

An upper bound for the planar Turán number of double star $S_{3,5}$

Dan-dan Liu, Shou-jun Xu*

Abstract

Given a graph H , the planar Turán number of H , denoted by $exp(n, H)$, is the maximum number of edges in an n -vertex H -free planar graph. Ghosh, Győri, Paulos and Xiao initiated the topic of the planar Turán number for double stars. A (k, l) -star, denoted by $S_{k,l}$, is the graph obtained from an edge uv , and joining end vertices with k and l vertices, respectively. However, the exact value of $exp(n, S_{3,5})$ remains unknown. Building upon this research, we further investigate the problem. A k - l edge refers to an edge whose endpoints have degrees k and l , respectively. In this paper, we establish an upper bound for the planar Turán number of a graph G that does not contain the double star $S_{3,5}$ or any 6-6 edges, which is $\frac{23n}{8} - 3$ for all $n \geq 2$.

Keywords: Planar Turán number, Double star, Extremal planar graph

1. Introduction

This paper restricts attention to finite simple graphs, where edges uniquely connect distinct vertex pairs.

Let $G = (V(G), E(G))$ be a graph, where $V(G)$ and $E(G)$ are the vertex set and edge set of the graph G , respectively. A planar graph is a graph that can be drawn on a plane such that its edges are non-intersecting. We use $N_G(v)$ to denote the set of vertices of G adjacent to v , abbreviated without ambiguity as $N(v)$. The degree of a vertex v is the number of vertices of $N(v)$, denoted by $d_G(x)$, abbreviated without ambiguity as $d(x)$ i.e. $|N(v)|$. Let $N_G[v] = N(v) \cup \{v\}$, abbreviated without ambiguity as $N[v]$. Let $v(G)$, $e(G)$, $\delta(G)$ and $\Delta(G)$ denote the number of vertices, the number of edges, the minimum degree and the maximum degree of G , respectively. For any subset $S \subset V(G)$, the subgraph induced on S is denoted by $G[S]$. We denote by $G \setminus S$ the subgraph induced on $V(G) \setminus S$. If $S = v$, we simply write $G \setminus v$. We use $E[S, T]$ to denote the edge set between S and T , let $e[S, T] = |E[S, T]|$, where S, T are subsets of $V(G)$.

Let H be a graph, and a graph is called H -free if it does not contain H as a subgraph. A well-known problem is the Turán problem: What is the maximum number of edges in a graph with n vertices that does not contain H as a subgraph? How to inscribe the graph with these edges? Is it unique? This problem gave the definitions of the Turán number.

Given a graph H , the Turán number of H , denoted by $ex(n, H)$, is the maximum number of edges in an H -free graph on n vertices. In this paper, we focus on the planar Turán number. The planar Turán number of a graph H , denoted by $exp(n, H)$, is the maximum number of edges in an H -free planar graph on n vertices.

Significant progress has been made in the research on the planar Turán number. Dowden [1] in 2016 initiated the study of planar Turán-type problems. Dowden studied the planar Turán number

* Corresponding author.

School of Mathematics and Statistics, Gansu Center for Applied Mathematics, Lanzhou University, Lanzhou, Gansu 730000, China

E-mail: liudd2023@lzu.edu.cn, shjxu@lzu.edu.cn

of C_4 and C_5 , where C_k is a cycle with k vertices. Then Ghosh, Győri, Martin, Paulos and Xiao [5] gave the exact value for C_6 . After that, Shi, Walsh and Yu [10], Győri, Li and Zhou [6] gave the exact value for C_7 . But the planar Turán number of C_k remains undermined for $k \geq 8$. And Lan, Shi and Song [8] gave a sufficient condition for graphs with planar Turán number of $3n - 6$. We refer the interested readers to more results on paths, theta graphs and other graphs [2, 3, 7, 9].

The double star is an important structure in graph theory, but the special structure of the double star has not been considered on planar graphs before. Then in 2022, Győri, Martin, Paulos and Xiao [4] studied the topic for double stars as the forbidden graph. A (k, l) -star, denoted by $S_{k,l}$, is the graph obtained from an edge uv , and joining end vertices with k and l vertices, respectively. A k - l edge refers to an edge whose endpoints have degrees k and l , respectively. Győri, Martin, Paulos and Xiao gave the exact value for $S_{2,2}$ and $S_{2,3}$, and gave the upper bounds of $S_{2,4}$, $S_{2,5}$, $S_{3,3}$, $S_{3,4}$. In 2024, Xu [11, 12] *et al.* improved the upper bounds of $S_{2,4}$ and $S_{2,5}$. However, the exact value of $exp(n, S_{3,5})$ remains unknown. Then in this paper, we establish an upper bound for $exp(n, S_{3,5})$, and give the following theorem.

Theorem 1.1. Let G be an $S_{3,5}$ -free planar graph on n vertices that does not contain any 6-6 edges. Then $exp(n, S_{3,5}) \leq \frac{23n}{8} - 3$ for all $n \geq 2$.

The remainder of this paper is organized as follows. Essential preliminaries are provided in Section 2. Section 3 establishes the proof of Theorem 1.1, with detailed analysis of its implications.

2. Preliminaries

Claim 2.1. If G is a graph on n vertices for $2 \leq n \leq 24$, then the number of edges in G is at most $\frac{23n}{8} - 3$.

Proof. It is easy to see that a maximum planar graph with n vertices contains $3n - 6$ edges. Note that $3n - 6 \leq \frac{23n}{8} - 3$ for $2 \leq n \leq 24$. Thus, there is $e(G) \leq \frac{23n}{8} - 3$ for $2 \leq n \leq 24$. \square

For the convenience of discussion, according to Claim 2.1, we may further assume $n \geq 24$.

Claim 2.2. Let G be an $S_{3,5}$ -free graph. If there exist an edge cut set $E[S_1, S_2]$ in the graph G such that $V(G) = S_1 \cup S_2$, $e[S_1, S_2] \leq 2$ and $|S_1|, |S_2| \geq 1$, then $e(G) \leq \frac{23n}{8} - 3$.

Proof. Suppose that there exists an edge cut set $E[S_1, S_2]$ in the graph G , where $V(G) = S_1 \cup S_2$, $e[S_1, S_2] \leq 2$. Since G is $S_{3,5}$ -free, then $G[S_1]$ and $G[S_2]$ are $S_{3,5}$ -free.

By the induction hypothesis, $e(G[S_1]) \leq \frac{23|S_1|}{8} - 3$, $e(G[S_2]) \leq \frac{23|S_2|}{8} - 3$. Then

$$\begin{aligned} e(G) &= e(G[S_1]) + e(G[S_2]) + e[S_1, S_2] \\ &\leq \frac{23|S_1|}{8} - 3 + \frac{23|S_2|}{8} - 3 + 2 \\ &\leq \frac{23n}{8} - 4. \end{aligned}$$

\square

In the following, assume that all edge cut sets $E[S_1, S_2]$ in the graph G satisfy $e[S_1, S_2] \geq 3$.

If G is disconnected, there is an edge cut set $E[S_1, S_2]$ such that $e[S_1, S_2] = 0$ and $|S_1|, |S_2| \geq 1$. Then $e(G) \leq \frac{23n}{8} - 3$ by the Claim 2.2. So assume that G is connected.

In all the following cases, let G be a planar graph with n vertices for $n \geq 24$ that does not contain $S_{3,5}$ and has no 6-6 edges.

Claim 2.3. In the graph G , a vertex with degree at least 9 cannot be adjacent to a vertex with degree at least 4.

Proof. Suppose not. Let xy be an edge in G such that $d(x) \geq 9$ and $d(y) \geq 4$. Obviously, there are at least three vertices in $V(G) \setminus \{x\}$, say y_1, y_2 and y_3 , respectively. Because of $|N(x) \setminus \{y\}| \geq 8$, there are at least five vertices x_1, x_2, x_3, x_4 and x_5 , respectively, not in $\{y, y_1, y_2, y_3\}$ which are adjacent

to x . This implies we got an $S_{3,5}$ in G with backbone xy and leaf-sets $\{x_1, x_2, x_3, x_4, x_5\}$ and $\{y_1, y_2, y_3\}$, respectively, which is a contradiction. This completes the proof. \square

Claim 2.4. If $\Delta(G) \geq 9$ in the graph G , then $e(G) \leq \frac{23n}{8} - 3$.

Proof. Suppose that $d(x) = \Delta(G)$ with $d(x) \geq 9$. By Claim 2.3, we know that for any $y \in N(x)$ there is $d(y) \leq 3$. Without loss of generality, taking x and nine neighbors of x in $N[x]$ as a subset H . Deleting the vertices in H from the graph G , the number of edges deleted is at most $9 + 9 \times 3 = 27$.

By the induction hypothesis, $e(G \setminus H) \leq \frac{23(n-10)}{8} - 3$. Then

$$\begin{aligned} e(G) &\leq e(G \setminus H) + 27 \\ &\leq \frac{23(n-10)}{8} - 3 + 27 \\ &\leq \frac{23n}{8} - 4. \end{aligned}$$

\square

Claim 2.5. If the graph G contains a vertex v with $d(v) = 8$, then $e(G) \leq \frac{23n}{8} - 3$.

Proof. Let $d(v) = 8$, $S_1 = \{x_1, x_2, x_3, x_4, x_5, x_6, x_7, x_8\}$ as the set of its eight neighbors, and define $H = S_1 \cup \{v\}$. If a vertex in S_1 is adjacent to at least two vertices within S_1 (excluding itself), then it has no neighbors in $V(G) \setminus H$. If a vertex is adjacent to one vertex within S_1 , then it has at most one neighbor in $V(G) \setminus H$. If a vertex is not adjacent to any vertices within S_1 , then it has at most two neighbors in $V(G) \setminus H$. In fact, it is equivalent to the situation that if a vertex is adjacent to zero or one vertex in S_1 , the total number of edges deleted is the same when the maximum number of edges are deleted. Next, we conduct a classification discussion on the total number of vertices in S_1 that are adjacent to at least two vertices within S_1 (excluding itself).

Case 1. If each vertex in S_1 has at most one neighbor within S_1 (excluding itself), then removing H from the graph G deletes at most $8 + 8 \times 2 = 24$ edges.

Case 2. If there is one vertex in S_1 that has at least two neighbors within S_1 , and the remaining 7 vertices have at most one neighbor within S_1 (excluding itself), then removing H from the graph G deletes at most $8 + 2 + 2 + 5 \times 2 = 22$ edges.

Case 3. If there is more than one vertex in S_1 that has at least two neighbors within S_1 , and the remaining vertices have at most one neighbor within S_1 (excluding itself), then removing H from the graph G deletes at most $3(m+1) - 6 + (8-m) + m \times 1 + (8-m) \times 2 = 21$ edges.

At this case, let V_m be the set containing these vertices. Therefore, $V_m \cup \{v\}$ contains at least three vertices. In this case, we consider the maximum number of edges in the subgraph induced by $V_m \cup \{v\}$. Since for the set of vertices in S_1 that have at most one other neighbor in S_1 , whether they have one neighbor or none, the total number of edges formed remains the same when the maximum number of edges are deleted. Thus, we may assume that these vertices in S_1 which have at most one neighbor within S_1 have no neighbors in S_1 . A planar graph with $n \geq 3$ vertices has at most $3n - 6$ edges. Let m be the number of vertices in V_m . We have $e(V_m \cup \{v\}) \leq 3(m+1) - 6$.

To conclude, deleting H without considering the condition that the size of the edge cut set is at least 3 will delete at most 24 edges. Thus, under the condition that the size of the edge cut set is at least 3, the number of edges deleted is at most 24.

By the induction hypothesis, $e(G \setminus H) \leq \frac{23(n-9)}{8} - 3$,

$$\begin{aligned} e(G) &\leq e(G \setminus H) + 24 \\ &\leq \frac{23(n-9)}{8} - 3 + 24 \\ &\leq \frac{23n}{8} - 4. \end{aligned}$$

\square

Claim 2.6. Let v be a vertex with $d(v) = 7$ in the graph G and the set consisting of the seven neighbors of v be $S_1 = \{x_1, x_2, x_3, x_4, x_5, x_6, x_7\}$. If at least one vertex in S_1 has no neighbors within S_1 , then $e(G) \leq \frac{23n}{8} - 3$.

Proof: Let $d(v) = 7$ and define $H = S_1 \cup \{v\}$. If a vertex in S_1 is adjacent to at least one vertex within S_1 (excluding itself), then it has at most one neighbor in $V(G) \setminus H$. If a vertex is not adjacent to any vertices within S_1 , then it has at most two neighbors in $V(G) \setminus H$. Next, we conduct a classification discussion on the total number of vertices in S_1 that are adjacent to at least one vertex within S_1 (excluding itself).

Case 1. If each vertex in S_1 has no neighbors within S_1 , then removing H from the graph G deletes at most $7 + 7 \times 2 = 21$ edges.

Case 2. If there is one vertex in S_1 that have at least one neighbor within S_1 , and the remaining six vertices have no neighbors within S_1 , then it is impossible.

Case 3. If there are two vertices in S_1 that have at least one neighbor within S_1 , and the remaining five vertices have no neighbors within S_1 , then removing H from the graph G deletes at most $7 + 1 + 5 \times 2 + 2 \times 1 = 20$ edges.

Case 4. If there are three vertices in S_1 that have at least one neighbor within S_1 , and the remaining four vertices have no neighbors within S_1 , then removing H from the graph G deletes at most $7 + 3 + 4 \times 2 + 3 \times 1 = 21$ edges.

Case 5. If there are four vertices in S_1 that have at least one neighbor within S_1 , and the remaining three vertices have no neighbors within S_1 , then removing H from the graph G deletes at most $9 + 3 + 3 \times 2 + 4 \times 1 = 22$ edges.

In this case, these four vertices and vertex v form a planar graph with 5 vertices. For a planar graph with 5 vertices, the maximum number of edges is $3 \times 5 - 6 = 9$. To preserve planarity during the removal of a subgraph H , at most $3 + 3 \times 2 + 4 \times 1 = 13$ additional edges beyond these 9 edges must be deleted.

Case 6. If there are five vertices in S_1 that have at least one neighbor within S_1 , and the remaining two vertices have no neighbors within S_1 , then removing H from the graph G deletes at most $12 + 2 + 2 \times 2 + 5 \times 1 = 23$ edges.

In this case, these five vertices and vertex v form a planar graph with 6 vertices. For a planar graph with 6 vertices, the maximum number of edges is $3 \times 6 - 6 = 12$. To preserve planarity during the removal of a subgraph H , at most $2 + 2 \times 2 + 5 \times 1 = 11$ additional edges beyond these 12 edges must be deleted.

Case 7. If there are six vertices in S_1 that have at least one neighbor within S_1 , and the remaining one vertex have no neighbors within S_1 , then removing H from the graph G deletes at most $15 + 1 + 1 \times 2 + 6 \times 1 = 24$ edges.

Without loss of generality, let these six vertices be $\{x_1, x_2, x_3, x_4, x_5, x_6\}$. In this case, $\{x_1, x_2, x_3, x_4, x_5, x_6\} \cup \{v\}$ form a planar graph with 7 vertices. For a planar graph with 7 vertices, the maximum number of edges is $3 \times 7 - 6 = 15$. To preserve planarity during the removal of a subgraph H , at most $1 + 1 \times 2 + 6 \times 1 = 9$ additional edges beyond these 15 edges must be deleted.

At this time, $\{x_1, x_2, x_3, x_4, x_5, x_6\} \cup \{v\}$ form a plane graph with 7 vertices, and the number of edges in this graph reaches the maximum. Moreover, there must be six edges incident to the central vertex v . The graph with the central vertex v of 15 edges is isomorphic to the following Figure 1.

In this case, regardless of which face the vertex x_7 lies on, there exists an edge cut set with size at most 2. Therefore, the number of edges deleted is at most 23.

To conclude, if at least one vertex in S_1 has no neighbor within S_1 , then removing H from the graph G deletes at most 23 edges.

By the induction hypothesis, $e(G \setminus H) \leq \frac{23(n-8)}{8} - 3$,

$$e(G) \leq e(G \setminus H) + 23 \leq \frac{23(n-8)}{8} - 3 + 23 \leq \frac{23n}{8} - 3. \quad \square$$

Claim 2.7. If the graph G contains a 5-7 edge, then $e(G) \leq \frac{23n}{8} - 3$.

Proof. Let $xy \in E(G)$ be a 5-7 edge. There are at least 3 triangles containing the edge xy . Otherwise, G contains an $S_{3,5}$. We subdivide the cases based on the number of triangles containing the edge xy .

Case 1. There are 4 triangles containing the edge xy .

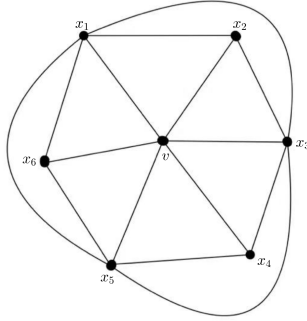


Figure 1: A planar graph with 7 vertices, including a central vertex v , has at most 15 edges.

Let a, b, c and d be the vertices in G that are adjacent to both x and y . Let e and f be the vertices adjacent to y but not to x , as shown in the Figure 2. Define $S_1=\{a, b, c, d\}$, $S_2=\{e, f\}$, $S_3=S_1 \cup S_2 \cup \{x\}$ and let $H=S_1 \cup \{y\}$.

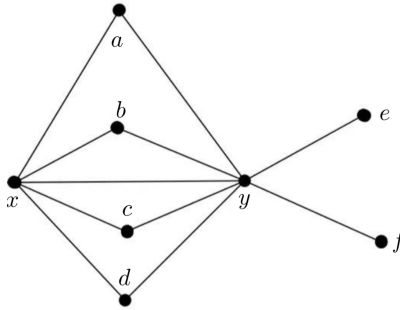


Figure 2: The 5-7 edge xy is contained in 4 triangles.

Removing the vertices in H from the graph G . Assume that a has two neighbors in $V(G)\setminus H$, we immediately get an $S_{3,5}$. Thus, any vertices in S_1 can have at most one neighbor in $V(G)\setminus H$. It can form a path of length 3 within S_1 and the edges of S_1 do not affect the neighbors of the vertices of S_1 in $V(G)\setminus H$. Each of the vertices e and f can have at most two neighbors in $V(G)\setminus H$. If a vertex s in S_2 is adjacent to a vertex t in S_1 , this adjacent situation does not alter the set of vertices adjacent to T within S_1 in the subgraph $V(G)\setminus H$. If e and f are adjacent, this implies that each of them has at most one neighbor in $V(G)\setminus H$. If e is adjacent to at least one vertex in $S_1 \cup \{f\}$, then it has at most one neighbor in $V(G)\setminus H$. Similarly, the same situation holds for f .

Here, y is a vertex of degree 7 in G . According to Claim 2.6, it is only necessary to consider the case where all the vertices in S_3 have at least one other neighbor within S_3 . Specifically, consider vertices e and f in S_3 .

Removing the vertices in H from the graph G , the number of edges deleted is at most $11 + 3 + 4 \times 1 + (1 + 2) \times 2 = 24$. At this case, both e and f are adjacent to at least two other vertices in $S_1 \cup S_2$, respectively. In any cases, apart from the two edges ey and ef , the two vertices e and f are connected to at most four edges in total. If we delete 24 edges, then all the vertices in $S_1 \cup S_2$ have at least one neighbor in $V(G)\setminus H$. At this case, there are two possible cases, as shown in the Figure 3.

For the Figure 3(i), at this case, the vertices e and f lie in the same face. After deleting 24

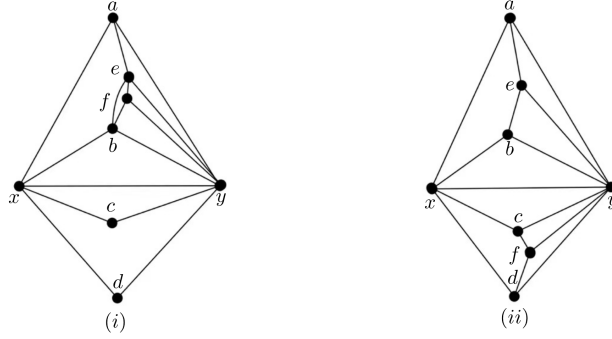


Figure 3: If we delete 24 edges, here is the adjacent situation of the vertices of H .

edges, there exists an edge cut set with size at most 2. Therefore, in this case, we must delete at most 23 edges to avoid finding an edge cut set with size at most 2.

For the Figure 3(ii), the vertices e and f lie in the different faces. If we delete 24 edges, then there must exist a connected component H_m in the resulting graph $G \setminus G[H]$, because all the vertices in $S_1 \cup S_2$ have at least one neighbor in $V(G) \setminus H$.

Suppose that there are m vertices in H_m for $m \geq 1$. Then, according to the induction hypothesis, H_m is a subgraph of the graph G . Therefore, H_m does not contain any 6-6 edges or $S_{3,5}$ as a subgraph. Because the number of vertices in H_m is less than n . By the induction hypothesis, H_m has at most $\frac{23m}{8} - 3$ edges. Let V_m be the vertex set of H_m . Then, if we delete $H \cup V_m$ from the graph G , we will delete at most $\frac{23m}{8} - 3 + 24$ edges.

By the induction hypothesis,

$$e(G \setminus (H \cup V_m)) \leq \frac{23(n - (m+8))}{8} - 3 + \frac{23m}{8} - 3 + 24 = \frac{23n}{8} - 5 \leq \frac{23n}{8} - 3.$$

Therefore, deleting at most 24 edges, Claim 2.7 holds.

Case 2. There are 3 triangles containing the edge xy .

Let a, b and c be the vertices in G that are adjacent to both x and y . Let d, e and f be the vertices adjacent to y but not to x , and m be the vertex adjacent to x but not to y , as shown in the Figure 4. Define $S_1 = \{a, b, c\}$, $S_2 = \{d, e, f\}$, $S_3 = S_1 \cup S_2 \cup \{x\}$ and let $H = S_3 \cup \{y, m\}$.

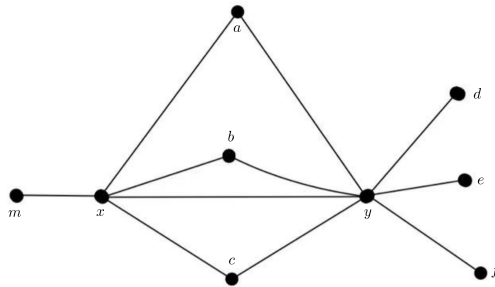


Figure 4: The 5-7 edge xy is contained in 3 triangles.

Removing the vertices in H from the graph G . Assume that a has two neighbors in $V(G) \setminus H$, we immediately get an $S_{3,5}$. Thus, any vertices in S_1 can have at most one neighbor in $V(G) \setminus H$. It can form a path of length 2 within S_1 and the edges of S_1 do not affect the neighbors of the vertices of S_1 in $V(G) \setminus H$. Each vertex in S_2 can have at most two neighbors in $V(G) \setminus H$. If a vertex r in S_2 is adjacent to a vertex p in S_1 , this adjacent situation does not alter the set of vertices adjacent to p within S_1 in the subgraph $V(G) \setminus H$. If a vertex r in S_2 is adjacent to at least one vertex in $S_1 \cup S_2$, it makes these vertices in S_2 have at most one neighbor in $V(G) \setminus H$. The vertex m can

have at most four neighbors in $V(G)\setminus H$. If m is adjacent to a vertex in S_1 , then this vertex in S_1 have no neighbors in $V(G)\setminus H$, and m has at most three neighbors in $V(G)\setminus H$. If m is adjacent to a vertex in S_2 , then this vertex in S_2 has at most one neighbor in $V(G)\setminus H$, and m has at most three neighbors in $V(G)\setminus H$.

Here, y is a vertex of degree 7. According to Claim 2.6, it is only necessary to consider the case where all the vertices in S_3 have at least one neighbor within S_3 . Specifically, consider vertices d , e and f in S_3 .

Deleting the vertices in H from the graph G , the number of edges deleted is at most $11 + 2 + 3 \times 1 + (1 + 2) \times 3 + 4 = 29$. At this case, d , e , and f are adjacent to at least two other vertices in $S_1 \cup S_2$, respectively. In any cases, apart from the three edges dy , ey and fy , the three vertices d , e , and f are connected to at most six edges in total.

If the three vertices d , e , and f lie in the same face and we deleting 29 edges, it is impossible that none of the three vertices d , e , and f is adjacent to each other. There are two cases as shown in Figure 5.

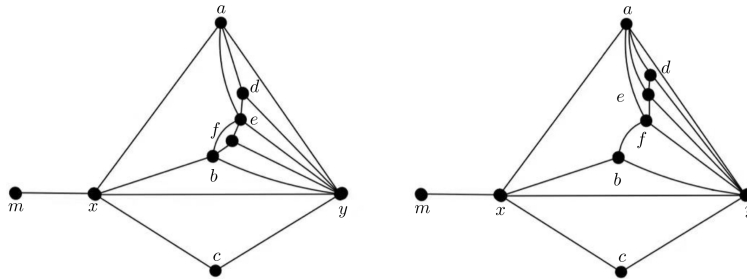


Figure 5: The vertices d , e , and f lie in the same face.

In either case, the graph must have an edge cut set with size at most 2, a contradiction.

If the three vertices d , e , and f are not in the same faces, then there are two vertices among d , e , and f that are adjacent to two vertices in S_1 . Assume that these two vertices are d and e . However, in a planar graph, the neighbors of d and e in S_1 cannot be exactly the same. Without loss of generality, let d be adjacent to a and b , and e be adjacent to c and d . At this case, f is adjacent to one vertex in S_1 and one vertex in $\{d, e\}$, respectively. There are two cases as shown in the Figure 6. At this case, m is not adjacent to any vertices in $S_1 \cup S_2$.

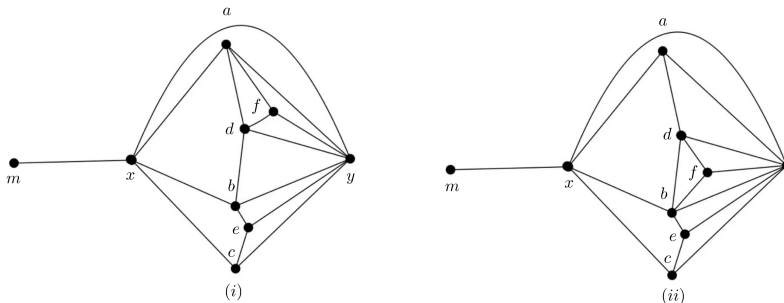


Figure 6: The vertices d , e , and f lie in the different faces.

For the Figure 6(i), at this case, no matter which face the neighbors of vertices a and c lie in, there exists an edge cut set with size at most 2. If the neighbors of vertices a , d and f are in the same connected component, and the neighbors of vertices b , c and e are in another same connected

component, then if considering the connected component H_t in $G \setminus H$ that contains the neighbors of vertex m in $V(G) \setminus H$, there exists an edge cut set with size of 1.

For the Figure 6(ii), there exists an edge cut set with size at most 2.

Therefore, if the size of the edge cut set is at least 3, we cannot delete 29 edges.

Deleting the vertices in H from the graph G , the number of edges deleted is at most 28, using the same method as above, there must exist a connected component H_m in the graph $G \setminus H$ such that Claim 2.7 holds. \square

Claim 2.8. If the graph G contains a 6-7 edge, then $e(G) \leq \frac{23n}{8} - 3$.

Proof. Let $xy \in E(G)$ be a 6-7 edge. There are at least 4 triangles containing the edge xy . Otherwise, G contains an $S_{3,5}$. We subdivide the cases based on the number of triangles containing the edge xy .

Case 1. There are 5 triangles containing the edge xy .

Let a, b, c, d and e be the vertices in G that are adjacent to both x and y . Let f be the vertices adjacent to y but not to x , as shown in the Figure 7. Define $S_1 = \{a, b, c, d, e\}$, $S_2 = S_1 \cup \{f, x\}$ and let $H = S_2 \cup \{y\}$.

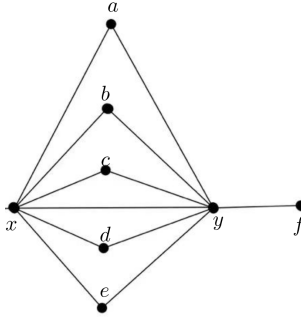


Figure 7: The 6-7 edge xy is contained in 5 triangles.

Deleting the vertices in H from the graph G . Assume that a has two neighbors in $V(G) \setminus H$, we immediately get an $S_{3,5}$. Thus, any vertices in S_1 can have at most one neighbor in $V(G) \setminus H$. It can form a path of length 4 within S_1 and the edges of S_1 do not affect the neighbors of the vertices of S_1 in $V(G) \setminus H$. The vertex f can have at most two neighbors in $V(G) \setminus H$. If f is adjacent to a vertex p in S_1 , this adjacent situation does not alter the set of vertices adjacent to p within S_1 in the subgraph $V(G) \setminus H$. If f is adjacent to at least one vertex in S_1 , then f has at most one neighbor in $V(G) \setminus H$.

Here, y is a vertex of degree 7. According to Claim 2.6, it is only necessary to consider the case where all the vertices in S_2 have at least one neighbor within S_2 . Specifically, consider vertex f in S_2 .

Deleting the vertices in H from the graph G , the number of edges deleted is at most $12 + 2 + 4 + 5 \times 1 + 1 = 24$. At this case, f is adjacent to two vertices in S_1 . If the number of deleted edges is 24, each vertex of $S_2 \setminus \{x\}$ has one neighbor in $V(G) \setminus H$. In this case, there exists an edge cut set with size at most 2. Therefore, it is impossible to delete 24 edges. The number of edges deleted is at most 23.

By the induction hypothesis, $e(G \setminus H) \leq \frac{23(n-8)}{8} - 3$,

$e(G) \leq e(G \setminus H) + 23 \leq \frac{23(n-8)}{8} - 3 + 23 \leq \frac{23n}{8} - 3$.

Claim 2.8 is true.

Case 2. There are 4 triangles containing the edge xy .

Let a, b, c and d be the vertices in G that are adjacent to both x and y . Let e and f be the vertices adjacent to y but not to x , m be the vertex adjacent to y but not to x , as shown in Figure 8. Define $S_1 = \{a, b, c, d\}$, $S_2 = \{e, f\}$, $S_3 = S_1 \cup S_2 \cup \{x\}$ and let $H = S_3 \cup \{y, m\}$.

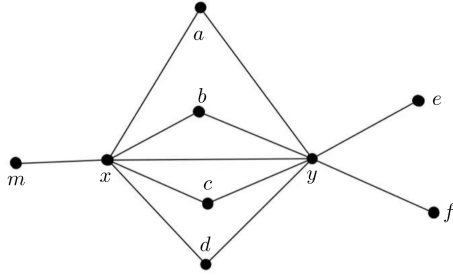


Figure 8: The 6-7 edge xy is contained in 4 triangles.

Deleting the vertices in H from the graph G . Assume that a has two neighbors in $V(G)\setminus H$, we immediately get an $S_{3,5}$. Thus, any vertices in S_1 can have at most one neighbor in $V(G)\setminus H$. It can form a path of length 3 within S_1 and the edges of S_1 do not affect the neighbors of the vertices of S_1 in $V(G)\setminus H$. Each vertex of S_2 can have at most two neighbors in $V(G)\setminus H$. If a vertex q in S_1 is adjacent to a vertex r in S_2 , then the vertex q in S_1 has at most one neighbor in $V(G)\setminus H$. If a vertex t in S_1 is adjacent to two vertices t_1 and t_2 in S_2 , then the vertex t in S_1 has no neighbors in $V(G)\setminus H$. If a vertex t_3 in S_2 is adjacent to at least one vertex in $S_1 \cup S_2$, it makes the vertex t_3 in S_2 has at most one neighbor in $V(G)\setminus H$. The vertex m has at most two neighbors in $V(G)\setminus H$. If m is adjacent to a vertex t_4 in S_1 , then this vertex t_4 in S_1 has no neighbors in $V(G)\setminus H$, and m has at most two neighbors in $V(G)\setminus H$. If m is adjacent to a vertex t_5 in S_2 , then the vertex t_5 in S_2 has at most one neighbor in $V(G)\setminus H$, and m has at most one neighbor in $V(G)\setminus H$ as well.

Here, y is a vertex of degree 7. According to Claim 2.6, it is only necessary to consider the case where all the vertices in S_3 have at least one neighbor within S_3 . Specifically, consider the vertices e and f in S_3 .

Deleting the vertices in H from the graph G , the number of edges deleted is at most $12 + 3 + 2 + 4 \times 1 + (1 + 2) \times 2 = 27$. At this case, both e and f are adjacent to at least two other vertices in $S_1 \cup S_2$, respectively. In any cases, apart from the two edges ey and ef , the two vertices e and f are connected to four edges in total.

At this case, the adjacent situation of the vertices in H is as shown in the Figure 9.

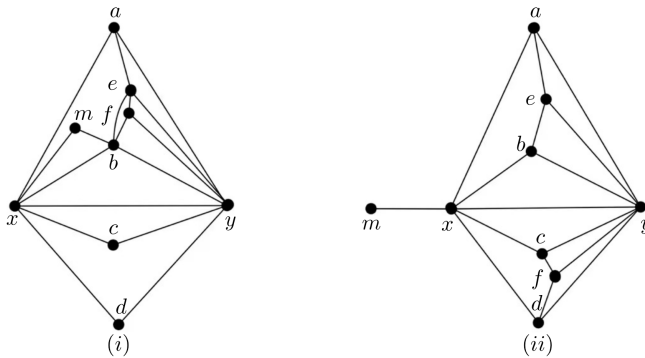


Figure 9: If we delete 27 edges, here is the adjacent situation of the vertices of H .

If we delete 27 edges, then there must exist a connected component H_s in the resulting graph $G\setminus H$.

Suppose that there are s ($s \geq 1$) vertices in H_s . Then, according to the induction hypothesis, H_s

is a subgraph of the graph G . Therefore, H_s does not contain any 6-6 edges or $S_{3,5}$ as a subgraph. Because the number of vertices in H_s is less than n , H_s has at most $\frac{23s}{8} - 3$ edges. Let V_s be the vertex set of H_s . Then, if we delete $H \cup V_s$, deleting at most $\frac{23s}{8} - 3 + 27$ edges.

By the induction hypothesis,

$$e(G \setminus (H \cup V_s)) \leq \frac{23(n - (s+9))}{8} - 3 + \frac{23s}{8} - 3 + 27 \leq \frac{23n}{8} - 4.$$

The Claim 2.8. is true. \square

Claim 2.9. If the graph G contains a 7-7 edge, then $e(G) \leq \frac{23n}{8} - 3$.

Proof. Let $xy \in E(G)$ be a 7-7 edge. There are at least 5 triangles containing the edge xy . Otherwise, G contains an $S_{3,5}$. We subdivide the cases based on the number of triangles containing the edge xy .

Case 1. There are 6 triangles containing the edge xy .

Let a, b, c, d, e and f be the vertices in G that are adjacent to both x and y , as shown in the Figure 10. Define $S_1 = \{a, b, c, d, e, f\}$, $S_2 = S_1 \cup \{x\}$ and $H = S_2 \cup \{y\}$.

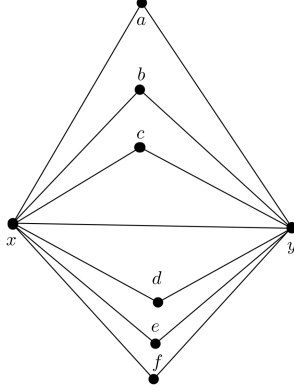


Figure 10: The 7-7 edge xy is contained in 6 triangles.

Deleting the vertices in H from the graph G . Assume that a has two neighbors in $V(G) \setminus H$, then we immediately get an $S_{3,5}$. Thus, any vertices in S_1 can have at most one neighbor in $V(G) \setminus H$. It can form a path of length 5 within S_1 and the edges of S_1 do not affect the neighbors of the vertices of S_1 in $V(G) \setminus H$. The number of edges deleted is at most $13 + 5 + 6 \times 1 = 24$. If we delete 24 edges, each vertex in S_1 has a neighbor in $V(G) \setminus H$. At this case, there exists an edge cut set with size at most 2, a contradiction.

Deleting the vertices in H from the graph G , the number of edges deleted is at most 23. By the induction hypothesis, the Claim 2.9 is true.

Case 2. There are 5 triangles containing the edge xy .

Let a, b, c, d and e be the vertices in G that are adjacent to both x and y . Let g be the vertices adjacent to y but not to x , f be the vertex adjacent to x but not to y , as shown in the Figure 11. Define $S_1 = \{a, b, c, d, e\}$, $S_2 = S_1 \cup \{g, x\}$ and let $H = S_1 \cup \{f, y\}$.

Deleting the vertices in H from the graph G . Assume that a has two neighbors in $V(G) \setminus H$, then we immediately get an $S_{3,5}$. Thus, any vertices in S_1 can have at most one neighbor in $V(G) \setminus H$. It can form a path of length 4 within S_1 and the edges of S_1 do not affect the neighbors of the vertices of S_1 in $V(G) \setminus H$. Both f and g can have at most two neighbors in $V(G) \setminus H$. If f (or g) is adjacent to at least one vertex in S_1 , then these vertices in S_1 have no neighbors in $V(G) \setminus H$, and f (or g) has at most one neighbor in $V(G) \setminus H$. If f is adjacent to g , then the maximum number of neighbors of f and g in $V(G) \setminus H$ will decrease by 1 each.

Here, y is a vertex of degree 7. According to Claim 2.6, it is only necessary to consider the case where all the vertices in S_2 have at least one neighbor within S_2 . Specifically, consider the vertex g in S_2 .

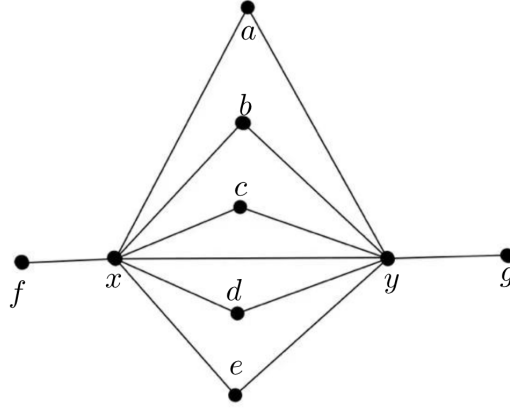


Figure 11: The 7-7 edge xy is contained in 5 triangles

Deleting the vertices in H from the graph G , the number of edges deleted is at most $13 + 4 + 4 + 2 \times 1 + 3 \times 1 = 26$. At this case, the two neighbors of f and g in S_1 are the same. If we delete 26 edges, there exists an edge cut set with size at most 2, a contradiction.

Deleting the vertices in H from the graph G , the number of edges deleted is at most 25. By the induction hypothesis, the Claim 2.9 is true. \square

3. Proof of Theorem 1.1.

Theorem 1.1. Let G be an $S_{3,5}$ -free planar graph with n vertices and does not contain any 6-6 edges. Then $exp(n, S_{3,5}) \leq \frac{23n}{8} - 3$ for all $n \geq 2$.

Proof. Let xy be an edge of the graph G . If $d(x) + d(y) \geq 15$, then $\Delta(G) \geq 8$. Theorem 1.1 holds by Claim 2.4 and Claim 2.5.

If $d(x) + d(y) = 14$, and $\Delta(G) \leq 8$, then xy must be a 7-7 edge. Theorem 1.1 holds by Claim 2.9.

If $d(x) + d(y) = 13$, and $\Delta(G) \leq 8$, then xy must be a 6-7 edge. Theorem 1.1 holds by Claim 2.8.

If $d(x) + d(y) = 12$, and $\Delta(G) \leq 8$, then xy must be a 5-7 edge. Theorem 1.1 holds by Claim 2.7.

If $d(x) + d(y) \leq 11$, then $\sum_{xy \in E(G)} (d(x) + d(y)) = \sum_{xy \in E(G)} d(x)^2 \geq n \cdot \bar{d}^2 = n \cdot \left(\frac{2e}{n}\right)^2$, where $e \leq \frac{11n}{4} \leq \frac{23n}{8} - 3$ for any $n \geq 24$. Combined with Claim 2.1, we know that Theorem 1.1 holds. \square

Funding

This work was funded in part by Natural Science Foundation of China (Grant No. 12071194).

Data availability

No data was used for the research described in the article.

References

- [1] Chris Dowden. Extremal C_4 -free/ C_5 -free planar graphs. *Journal of Graph Theory*, 83, 2015.
- [2] Lian Yan Du, Bing Wang, and Mingqing Zhai. Planar Turán numbers on short cycles of consecutive lengths. *Bulletin of the Iranian Mathematical Society*, 48:2395 – 2405, 2021.
- [3] Longfei Fang, Huiqiu Lin, and Yongtang Shi. Extremal spectral results of planar graphs without vertex-disjoint cycles. *Journal of Graph Theory*, 106:496 – 524, 2023.
- [4] Debarun Ghosh, Ervin Győri, Addisu Paulos, and Chuanqi Xiao. Planar Turán number of double stars. arXiv:2110.10515, October 2021.
- [5] Debarun Ghosh, Ervin Győri, Ryan R. Martin, Addisu Paulos, and Chuanqi Xiao. Planar Turán number of the 6-Cycle. *SIAM Journal on Discrete Mathematics*, 36(3):2028–2050, 2022.
- [6] Ervin Győri, Alan Li, and Runtian Zhou. The planar Turán number of the seven-cycle. arXiv:2307.06909, July 2023.
- [7] Yongxin Lan and Yongtang Shi. Planar Turán numbers of short paths. *Graphs and Combinatorics*, 35:1035 – 1049, 2019.
- [8] Yongxin Lan, Yongtang Shi, and Zi-Xia Song. Extremal H -free planar graphs. arXiv:1808.01487, August 2018.
- [9] Yongxin Lan, Yongtang Shi, and Zi-Xia Song. Extremal Theta-free planar graphs. *Discrete Mathematics*, 342(12):111610, 2019.
- [10] Ruilin Shi, Zachary Walsh, and Xingxing Yu. Planar Turán number of the 7-cycle. *European Journal of Combinatorics*, 2023.
- [11] Xin Xu, Yue Hu, and Xu Zhang. An improved upper bound for planar Turán number of double star $S_{2,5}$. *Discrete Applied Mathematics*, 358:326–332, 2024.
- [12] Xin Xu and Jiawei Shao. The planar Turán number of double star $S_{2,4}$. arXiv:2409.01016, September 2024.