

Excavation Problems in Elamite Mathematics

Nasser Heydari* and Kazuo Muroi†

April 5, 2023

Abstract

In this article, we study the problems found in the Susa Mathematical Texts No. 24 and No. 25 (**SMT No. 24** and **SMT No. 25**) which concern excavation projects such as canals and holes. We also examine certain Elamite structures, such as the canal systems serving Susa and a reservoir at the ziggurat of Chogha Zanbil, in whose construction geometry might well have played an important role.

1 Introduction

SMT No. 24 and **SMT No. 25** are two of the texts inscribed on 26 clay tablets excavated from Susa in southwest Iran by French archaeologists in 1933. The texts of all the Susa mathematical texts (**SMT**) along with their interpretations were first published in 1961 (see [BR61]).

SMT No. 24 and **SMT No. 25** are on a one-column clay tablet¹. Following Bruins in [BR61], we treat these two texts separately.

SMT No. 24 contains two problems. The first, an excavation problem, which leads to a complicated quadratic equation, is found on the obverse of the tablet. The second problem, concerning the digging of a canal, is presented on the reverse.

The text of **SMT No. 25**, also on the reverse of the tablet, is another belonging to the category of excavation problems. There is only one problem treated in this text, which concerns digging a canal.

Although the entire problems are unavailable because of damage to the tablet, considerable understanding of the mathematical calculations utilized in solving these problems can be derived from a careful analysis of the text that remains.

*Email: nasser.heydari@mun.ca

†Email: edubakazuo@ac.auone-net.jp

¹ The reader can see the new photos of this tablet on the website of the Louvre's collection. Please see <https://collections.louvre.fr/en/ark:/53355/cl010186434> for obverse and reverse.

2 Excavation Problems in the SMT

In Babylonian mathematics, there are many problems which concern digging a hole, a cistern, a canal or a foundation for a building or a wall. Such problems are often referred as *excavation problems*. Among the Babylonian mathematical texts, there are several which address various quantities concerning canals, although from the mathematical point of view they are relatively simple. By way of examples of such texts, we mention **YBC 4666**, **YBC 7164**, **YBC 9874**, **VAT 7528**, and **BM 85196** (please also see [Mur92-4], for more details about the texts of such tablets).

In the following two parts, we discuss **SMT No. 24** and **SMT No. 25** and provide our mathematical interpretation of each text.

2.1 SMT No. 24

Transliteration

Obverse, Lines 1-40

- (L1) [pa₅ i-na g]iš-gi ù giš-tir ak-šú-ru [... ..]
(L2) [... ..] 30 dirigiš dagal ki-ta šà-lu-uš-ti [... ..]
(L3) [ak-š]ú-ru šu-up-lu 24 sahar ak-šú-r[u ...]
(L4) [ù] šu-up-lu mi-nu za-e 1 dagal šà la t[i-du-ú ...]
(L5) 30 ta-mar ... [... ..] 30 dirigiš gar 1 a-rá [... ..]
(L6) 30 dirigiš šà-lu-uš-ti 30 le-qé 10 ta-mar [... ..]
(L7) i-ší-ma 2 ta-mar 2 ki-ma sag gar 1 dagal a[n-ta ...]
(L8) 1,30 ta-mar 1/2 1,30 [he-pe] 45 ta-mar 45 [uš]
(L9) tu-úr-ma šà-lu-[uš-ti 30 di]rig le-qé 10 ta-mar [... ..]
(L10) i-ší-ma 2 ta-mar ... [... ..]
(L11) 15 ta-mar 15 ... [... ..] uš gar ... [... ..]
(L12) re-iš-ka li-ki-[il] ... igi-45 uš pu-ťú-[úr]
(L13) a-na [... ..] ... a-šà i-ší-ma 9,22,30 [... ..] i-ší
(L14) [... ..] 2]4(?) ù 2 ma-na-at
(L15) [... ..] sag(?) 2 zi a-šà
(L16) [... ..] i-š]i-ma uš 15 wa-ší-ib uš
(L17) [... ..] 3]0 [a]-na 9,22,30 i-ší-ma
(L18) [4,41,15 ta-ma]r tu-úr-ma 45 uš a-na 2 sag
(L19) [i-ší-ma 1,30] a-na [9,2]2,30 i-ší-ma 14:3,45 ta-mar
(L20) [14:3,45 a-šà sà-a]r-ru [14:]3,45 [a-n]a 4,[4]1,15 a-šà
(L21) [i-ší-ma 1,5,55],4,41,15 ta-mar re-[iš-k]a li-ki-il
(L22) [15 wa-ší-ib uš a-na 2] sag i-ší-ma 30 t[a-mar 30 n]a-sí-ih sag
(L23) [30 a-na 3 i-š]i-ma [1],30 ta-mar [3]0 i-na 1,[30] zi
(L24) 1 ta-mar 1 a-[na] 9,22,30 i-ší-ma 9,2[2,30] ta-mar
(L25) aš-šum <1> ki-ma uš qa-bu-ku 1 a-rá [a-na 9],22,[30 dah]
(L26) 1,9,22,30 ta-mar 1/2 1,[9,2]2,30 he-pe 34,41,15 ta-mar

- (L27) 34,41,15 nigin 20:3,[13,21,3]3,45 *ta-mar*
(L28) *a-na* 20:3,13,21,33,[45] 1,5,55,4,41,15 dah
(L29) 21:9,8,26,15 [*ta-mar*] *m[i-n]a* íb-si 35,37,30 íb-si
(L30) 34,41,15 *ta-ki-i[l-ta]-ka* [*a-na* 3]5,37,30 dah
(L31) 1,10:18,45 *ta-m[ar]* *m[i-na a-na]* 14:3,45
(L32) *a-šà sà-ar-ri* gar *šà* [1,10:1]8,45 *i-na-ad-di-na*
(L33) 5 gar 5 dagal an-ta 1/2 [5 *he-pe* 2,30 *ta-mar* 2,30 *a-na*]
(L34) 30 dirig dah 3 *ta-mar* 3 dagal ki-ta [igi-12 *šà* dagal an-ta]
(L35) ugu dagal ki-ta *i-te-ru le-q[é]* 10 *ta-mar* [30 ù 10 ul-gar]
(L36) 40 *a-na* 12 *šu-up-li i-ší* 8 *ta-mar* [5 dagal an-ta]
(L37) ù 3 dagal ki-ta ul-gar 8 *ta-mar* [1/2 8 *he-pe*]
(L38) 4 *ta-mar* 4 *a-na* 8 *šu-up-li i-ší-[ma]*
(L39) 32 *ta-mar* igi-32 *pu-ťú-úr* 1,5[2,30 *ta-mar*]
(L40) 1,52,30 *a-na* 24 sahar *i-š[í* 45 *ta-mar* 45 uš]

Reverse, Lines 1-24

- (L1) *za-e(?)* . . . [.]
(L2) *ú-šà-pí-i[l]* *i(?)-[na(?) k]**a-la-ak-[ki-im*]
(L3) 2-kam *ta-a[d]-di-in* 2-tu [.]
(L4) *a-šà ka-la-ak-ki* gal ul-[gar]
(L5) *a-na* *tùn šà a-ta-ap pa-[n]a-n[im]* da[h]
(L6) *a-na* tur *aš-[lu-u]ť* (?) ul-gar sahar . . . [. 1,15]
(L7) *za-e* 1,15 ul-gar *a-na* 13 *šà-[la-šé-ra-t]i i-ší-ma* 16,[15]
(L8) 10 *šà ka-la-ak-ku* ugu *ka-la-a[k-ki i-t]e-ru* nigin 1,40 *ta-mar*
(L9) 1,40 *i-na* 16,15 zi 16,[13,20] *ta-mar* igi-10 dirig *pu-ťú-úr*
(L10) 6 *ta-mar* igi-12 *šu-up-li pu-ťú-úr* 5 *ta-mar* 5 *a-na* 6 *i-ší*
(L11) 30 *ta-mar* 30 *ta-lu-ku* 30 *ta-lu-ka a-na* 16,13,20 *i-ší-ma*
(L12) 8,6,40 *ta-mar* 10 [dir]ig nigin 1,40 *ta-mar* 1,40 *a-na* 13 *šà-la-šé-ra-ti*
(L13) *i-ší-ma* 21,[40 *ta-mar*] 21,40 *i-na* 8,6,40 zi
(L14) 7,45 *ta-[mar re-iš-k]a li-ki-il* 3[0 *ta-lu-k]a*
(L15) *a-na* 13 [*šà-la-šé-ra-ti*] *i-ší* 6,30 *t[a-mar 30 t]a-lu-ka*
(L16) *a-na ka-aiia-ma-[ni]* 2 tab-ba 1 *ta-mar* 1 *a-na* 6,30 dah
(L17) [7],30 *ta-mar* 1 [3 *šà-l]a-aš-šé-ra-ti a-na* 3-*šu a-na ka-aiia-ma-ni*
(L18) *a-li-ik-ma* 3[9] *ta-mar* 7,30 *a-na* 39 dah 46,30 *ta-mar*
(L19) *mi-na a-na* 46,30 gar *šà* 7,45 *šà r[e-iš]-ka ú-ki-il-lu*
(L20) [*i-n]a-ad-di-na* [10] gar *re-iš-ka li-ki-il* 1/2 10 dirig *he-pe*
(L21) [5 *ta]-mar* [5(?) gar(?)] 5 nigin 25 *ta-mar* 25 *a-na* 10
(L22) [*šà re-iš-ka ú-ki-il-lu*] dah 10,25 *ta-mar mi-na* íb-si
(L23) [25 íb-si 25(?) gar(?)] 5 *a-na* 25 *iš-te-en* dah 30 *ta-mar*
(L24) [*i-na* 25 2-kam zi 20 *t]a-mar* 30 gal 20 tur

Translation

Obverse, Lines 1-40

- (L1) The canal that I constructed in reed beds and woods, \dots \dots .
- (L2) \dots 0;30 of the excess, the lower breadth. One third of \dots ,
- (L3) that I constructed, the depth. The volume 24,0(volume-sar) that I constructed \dots .
- (L4) What are \dots and the depth? You, 1 breadth that you do not know \dots ,
- (L5) you see 0;30. Put down 0;30 of the excess. 1 regular number \dots ,
- (L6) 0;30 of the excess. Take one third of 0;30, (and) you see 0;10. \dots .
- (L7) Multiply (it by 12), and you see 2. Put down 2 as the width. 1, the upper breadth \dots ,
- (L8) you see 1,30. Halve 1,30, (and) you see 45. 45 is the length. \dots .
- (L9) Return. Take one third of 0;30 of the excess, (and) you see 0;10. \dots .
- (L10) Multiply (it by 12), and you see 2. \dots ,
- (L11) you see 15. 15, \dots . Put down the length. \dots .
- (L12) Let it hold your head. \dots . Make the reciprocal of 45 of the length, (and 0;1,20).
- (L13) Multiply (it) by \dots of the area, and you see 9;22,30. Multiply \dots .
- (L14) \dots \dots 24,0(?), and 0;2 is the ratio (of the width to the length).
- (L15) \dots \dots width(?), subtract 0;2(?), and the area.
- (L16) \dots \dots , and the length. 15, the one which is to be added to the length.
- (L17) \dots \dots . Multiply 0;30 by 9;22,30, and
- (L18-19) you see 4;41,15. Return. Multiply 45 of the length by 0;2 of (the ratio of the width (to the length), and you see 1;30. Multiply (it) by 9;22,30, and you see 14;3,45.
- (L20-21) 14;3,45 is the false area. Multiply 14;3,45 by 4;41,15 of the area, and you see 1,5;55,4,41,15. Let it hold your head.
- (L22) Multiply 15, the one which is to be added to the length, by 0;2 of (the ratio of) the width (to the length), and you see 0;30.
- (L23) Multiply 0;30 by 3, and you see 1;30. Subtract 0;30 from 1;30, (and)
- (L24) you see 1. Multiply 1 by 9;22,30, and you see 9;22,30.
- (L25) Since $< 1, 0 >$ as the length is said to you, add 1,0, the factor, to 9;22,30, (and)
- (L26) you see 1,9;22,30. Halve 1,9;22,30, (and) you see 34;41,15.
- (L27) Square 34;41,15, (and) you see 20,3;13,21,33,45.
- (L28) Add 1,5;55,4,41,15 to 20,3;13,21,33,45, (and)
- (L29) you see 21,9;8,26,15. What is the square root? 35;37,30 is the square root.
- (L30) Add 34;41,15 (which was used in) your completing the square to 35;37,30, (and)
- (L31-32) you see 1,10;18,45. What should I put down to 14;3,45, the false area, which will give me 1,10;18,45?
- (L33) Put down 5. 5 is the upper breadth. Halve 5, (and) you see 2;30.
- (L34) Add 2;30 to 0;30 of the excess, (and) you see 3. 3 is the lower breadth.

- (L35) Take $1/12$ of the amount by which the upper breadth exceeded the lower breadth, (and) you see $0;10$. Add $0;30$ and $0;10$ together, (and the result is $0;40$).
- (L36) Multiply $0;40$ by 12 of the (constant of the) depth, (and) you see 8 .
- (L37) Add together 5 of the upper breadth and 3 of the lower breadth, (and) you see 8 . Halve 8 , (and)
- (L38) you see 4 . Multiply 4 by 8 , of the depth, and
- (L39) you see 32 . Make the reciprocal of 32 , (and) you see $0;1,52,30$.
- (L40) Multiply $0;1,52,30$ by $24,0$ of the volume, (and) you see 45 . 45 is the length.

Reverse, Lines 1-24

- (L1) You(?),
- (L2) I excavated . In(?) the hole
- (L3) you gave the second A second time
- (L4) I added and the area of the large hole together,
- (L5) I added to the depth of the former canal,
- (L6) I cut off (?) for the small. The sum of the volume and is $1;15$.
- (L7) You, multiply $1;15$ of the sum by 13 of one thirteenth, and (you see) $16;15$.
- (L8) Square $0;10$ of the amount by which (the length of) the (large) hole exceeded (the length of) the (small) hole, (and) you see $0;1,40$.
- (L9) Subtract $0;1,40$ from $16;15$, (and) you see $16;13,20$. Make the reciprocal of $0;10$ of the excess,
- (L10) (and) you see 6 . Make the reciprocal of 12 of the depth, (and) you see $0;5$. Multiply $0;5$ by 6 ,
- (L11) (and) you see $0;30$. $0;30$ is the product. Multiply $0;30$ of the product by $16;13,20$, and
- (L12) you see $8;6,40$. Square $0;10$ of the excess, (and) you see $0;1,40$. Multiply $0;1,40$ by 13 of one thirteenth,
- (L13) and you see $0;21,40$. Subtract $0;21,40$ from $8;6,40$, (and)
- (L14) you see $7;45$. Let it hold your head.
- (L15) Multiply $0;30$ of the product by 13 of one thirteenth, (and) you see $6;30$.
- (L16) Multiply $0;30$ of the product by regular (number) 2 , (and) you see 1 . Add 1 to $6;30$, (and)
- (L17) you see $7;30$. Multiply 13 of the one thirteenth by 3 , by regular (number three),
- (L18) and you see 39 . Add $7;30$ to 39 , (and) you see $46;30$.
- (L19) What should I put to $46;30$ which gives me $7;45$ that held your head?
- (L20) Put down $0;10$. Let it hold your head. Halve $0;10$ of the excess, (and)
- (L21) you see $0;5$. Put down $0;5(?)$. Square $0;5$, (and) you see $0;0,25$.
- (L22) Add $0;0,25$ to $0;10$ that held your head, (and) you see $0;10,25$. What is the square root?
- (L23) $0;25$ is the square root. Put down $0;25(?)$. On the one hand add $0;5$ to $0;25$, (and) you see $0;30$.
- (L24) On the other hand subtract $(0;5)$ from $0;25$, (and) you see $0;20$. $0;30$ is the large, (and) $0;20$ is the small.

Mathematical Calculations

The two problems in this text deal with constructing canals and computing their dimensions. The general shape of a canal is a prism with trapezoidal bases as shown in [Figure 1](#) along with its reserved water. Denote the lower breadth (width), the upper breadth (width), the length and the depth (height) of the canal by v , u , x and z respectively. Also denote the height of the reserved water by z' .

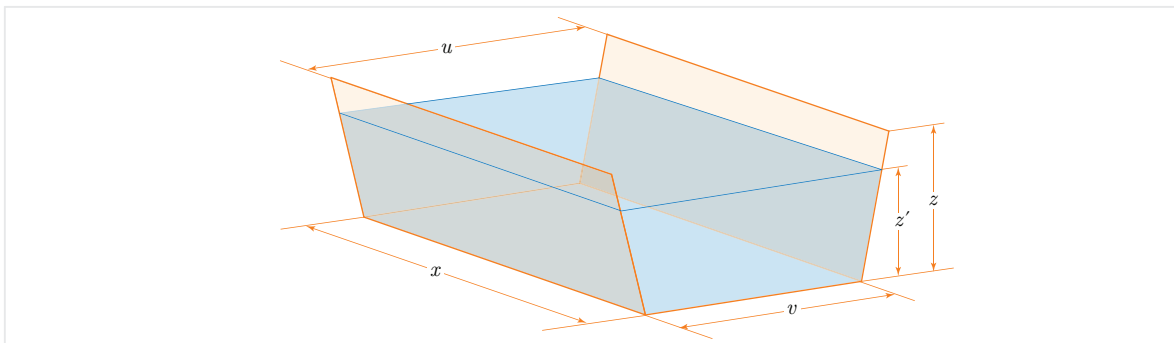


Figure 1: The general shape of a canal and its dimensions

The area S of the trapezoidal base and the volume V of the trapezoidal canal are obtained by

$$S = \frac{1}{2}z(u + v), \quad (1)$$

and

$$V = xS = \frac{1}{2}xz(u + v). \quad (2)$$

Although formula (2) gives us the whole capacity of a canal, it is possible to compute the capacity of its reserved water V' by using the constant of a canal given in **SMT No. 3**, line 33. In this line we read:

48 igi-gub šâ pa₅-sig

“0;48 is the constant of a small canal”

This suggest that the ratio of the depth of canal to that of its reserved water is 0;48 = $\frac{4}{5}$. In other words, we have

$$\frac{z'}{z} = \frac{4}{5}.$$

Thus, $z' = \frac{4}{5}z$ and the volume of the reserved water should be

$$V' = \frac{4}{5}V.$$

So it follows from (2) that

$$V' = \frac{2}{5}xz(u + v). \quad (3)$$

First Problem

Due to damage to the tablet, we are unable to establish with certainty the meanings of the technical expressions and calculations found in lines 1-25. We enumerate some of these ambiguities below:

Line 18: “0;2 is the ratio . . .”

If we denote the width by y , this probably means $\frac{y}{x} = 0;2$. In this case, according to lines 22-23, the value of y is obtained by

$$y = (0;2)x = (0;2) \times 45 = 1;30$$

assuming that $x = 45$. But this only adds to the confusion because similar terminologies (such as the upper breadth and the lower breadth) also occur in the text.

Line 22: “15, the one which is to be added to the length”

If we assume that $x = 45$, this probably concerns the calculation

$$x + 15 = 45 + 15 = 1,0$$

whose result is mentioned in line 25: “Since 1,0 as the length is said to you”.

Lines 18-19: “(0;30) × (9;22,30) = 4;41,45”

The result of this multiplication is called “the area” in lines 20-21.

Lines 20-21: “(1;30) × (9;22,30) = 14;3,45”

The result of this multiplication is called “the false area” in lines 20-21.

Lines 22-24: “15 × (0;2) × 3 - 0;30 = (0;30) × 3 - 0;30 = 1;30 - 0;30 = 1”

The number 0;30 is called “the one which is subtracted from the width” in line 23.

Line 24: “1 × (9;22,30) = 9;22,30”

We have been unable to reach a conclusion concerning this multiplication.

Line 25: “1,0 + 9;22,30 = 1,9;22,30”

We have also been unable to reach a conclusion concerning this addition.




Figure 2: Cross-section of a trapezoidal canal

In spite of these uncertainties, the scribe of this text is able to compute both the dimensions of a canal in general and also solve a quadratic equation to find the upper breadth of the canal. We have shown the trapezoidal cross-section of a general trapezoidal canal in [Figure 2](#).

Note that the calculations in lines 34-40 show that the scribe is assuming the following relations between the dimensions of the canal:

$$\begin{cases} v = \frac{u}{2} + 0; 30 \\ z = 12 \left(0; 30 + \frac{1}{12}(u - v) \right). \end{cases} \quad (4)$$

By looking carefully at the scribe's calculations in lines 26-33, it can be seen that he has solved the following quadratic equation:

$$(14; 3, 45)u^2 - (1, 9; 22, 30)u = 4; 41, 15. \quad (5)$$

This equation (5) has been solved by the usual method of completing the squares—a standard method used by Babylonian and Elamite scribes to solve quadratic equations. This method was called *Takiltum* in Babylonian texts (see [\[Mur03-1\]](#), for a discussion on this topic).

Now, let us use this method and solve the quadratic equation (5) as follows:

$$\begin{aligned} & (14; 3, 45)u^2 - (1, 9; 22, 30)u = 4; 41, 15 \\ \implies & (14; 3, 45) \times (14; 3, 45)u^2 - (14; 3, 45) \times (1, 9; 22, 30)u = (14; 3, 45) \times (4; 41, 15) \\ \implies & (14; 3, 45)^2u^2 - (1, 9; 22, 30) \times ((14; 3, 45)u) = 1, 5; 55, 4, 41, 15 \\ \implies & ((14; 3, 45)u)^2 - 2 \times (34; 41, 15) \times ((14; 3, 45)u) = 1, 5; 55, 4, 41, 15 \\ \implies & ((14; 3, 45)u)^2 - 2 \times (34; 41, 15) \times ((14; 3, 45)u) + (34; 41, 15)^2 \\ & \qquad \qquad \qquad = 1, 5; 55, 4, 41, 15 + (34; 41, 15)^2 \\ \implies & ((14; 3, 45)u - 34; 41, 15)^2 = 1, 5; 55, 4, 41, 15 + 20, 3; 13, 21, 33, 45 \\ \implies & ((14; 3, 45)u - 34; 41, 15)^2 = 21, 9; 8, 26, 15 \\ \implies & (14; 3, 45)u - 34; 41, 15 = \sqrt{21, 9; 8, 26, 15} \\ \implies & (14; 3, 45)u - 34; 41, 15 = \sqrt{(35; 37, 30)^2} \\ \implies & (14; 3, 45)u - 34; 41, 15 = 35; 37, 30 \\ \implies & (14; 3, 45)u = 35; 37, 30 + 34; 41, 15 \\ \implies & (14; 3, 45)u = 1, 10; 18, 45 \\ \implies & u = \frac{1}{(14; 3, 45)} \times (1, 10; 18, 45) \\ \implies & u = (0; 4, 16) \times (1, 10; 18, 45) \\ \implies & u = 5. \end{aligned}$$

So

$$u = 5. \tag{6}$$

Now, according to lines 33-36, we can find the values of v and z . On the one hand, by (4) and (6), we have

$$\begin{aligned} v &= \frac{u}{2} + 0; 30 \\ &= \frac{5}{2} + 0; 30 \\ &= 2; 30 + 0; 30 \\ &= 3. \end{aligned}$$

Hence,

$$v = 3. \tag{7}$$

On the other hand, it follows from (4) and (7) that

$$\begin{aligned} z &= 12 \left(0; 30 + \frac{1}{12}(u - v) \right) \\ &= 12 \left(0; 30 + \frac{1}{12}(5 - 3) \right) \\ &= 12 \left(0; 30 + \frac{2}{12} \right) \\ &= 12 \times (0; 30 + 0; 10) \\ &= 12 \times (0; 40) \end{aligned}$$

which implies that

$$z = 8. \tag{8}$$

Finally, a verification process seems to begin at line 37. First, the area of the trapezoidal cross-section S is obtained by using (1), (6), (7) and (8) as follows:

$$S = \frac{z(u + v)}{2} = \frac{8(5 + 3)}{2} = 4 \times 8 = 32. \tag{9}$$

Then, the length x of the canal is obtained by using the known volume $V = 24, 0$ (mentioned in line 3). In fact, it follows from (2) and (9) that

$$\begin{aligned} x &= \frac{V}{S} \\ &= \frac{24, 0}{32} \\ &= \frac{1}{32} \times (24, 0) \\ &= (0; 1, 52, 30) \times (24, 0) \\ &= 45. \end{aligned}$$

Second Problem

In the lines regarding the second problem, we can recognize several typical expressions found in excavation problems as follows:

- (1) Reverse, line 2: “I excavated”.
- (2) Reverse, line 4: “the area of the large hole”.
- (3) Reverse, line 5: “the depth of the former canal”.
- (4) Reverse, line 6: “I cut off \dots for the small”.
- (5) Reverse, line 8: “the amount by which (the length of) the (large) hole exceeded (the length of) the (small) hole”.
- (6) Reverse, line 10: “the reciprocal of a number of 12 of the depth”.

Although we cannot restore the statement of this problem either, it seems that a canal has been enlarged, that is, the bottom of a canal has been deepened. Let x , y and z denote the length, the width and the depth of a canal whose cross-section is rectangular (see [Figure 3](#)).

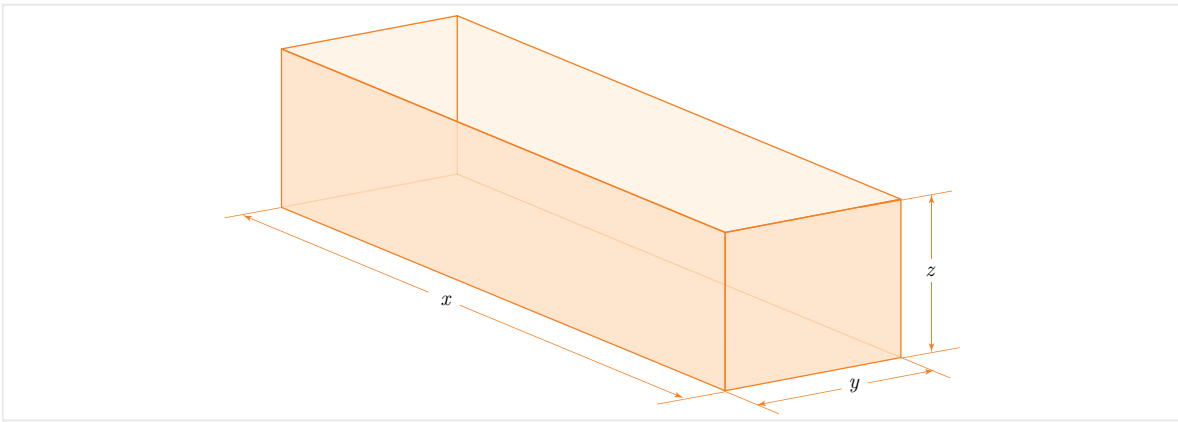


Figure 3: A canal with rectangular cross-section

Judging from the calculations performed in the text, the equations dealt with in this problem are:

$$\begin{cases} x - y = 0; 10 \\ z = 12(x - y) \\ z(x^2 + y^2) + xy(z + 1) + \frac{1}{13}(x^2 + y^2) = 1; 15. \end{cases} \quad (10)$$

Before discussing the geometrical significance of these equations and the nature of the hole (*kalakkum*), we analyze the solution given in lines 7-24.

According to line 7, we can multiply both sides of the third equation in (10) by 13. Since $13 \times (1; 15) = 16; 15$, we get

$$13z(x^2 + y^2) + 13xy(z + 1) + x^2 + y^2 = 16; 15. \quad (11)$$

At this point, the scribe appears to have used the algebraic identity

$$x^2 + y^2 = (x - y)^2 + 2xy. \quad (12)$$

According to lines 8-9, since $x - y = 0; 10$, we can use (11) and (12) to write

$$\begin{aligned} & 13z(x^2 + y^2) + 13xy(z + 1) + x^2 + y^2 = 16; 15 \\ \implies & 13z((x - y)^2 + 2xy) + 13xy(z + 1) + (x - y)^2 + 2xy = 16; 15 \\ \implies & 13z(x - y)^2 + 26xyz + 13xyz + 13xy + (x - y)^2 + 2xy = 16; 15 \\ \implies & 13z(x - y)^2 + (3 \times 13)xyz + (13 + 2)xy = 16; 15 - (x - y)^2 \\ \implies & 13z(x - y)^2 + (3 \times 13)xyz + (13 + 2)xy = 16; 15 - (0; 10)^2 \\ \implies & 13z(x - y)^2 + (3 \times 13)xyz + (13 + 2)xy = 16; 15 - 0; 1, 40 \end{aligned}$$

thus

$$13z(x - y)^2 + (3 \times 13)xyz + (13 + 2)xy = 16; 13, 20. \quad (13)$$

(Following the scribe's calculations, we did not substitute $x - y = 0; 10$ in term $13z(x - y)^2$ to simplify (13) more.)

In lines 10-11, the scribe calculates the reciprocal of z . It follows from the first two equations in (10) that

$$\begin{aligned} & z = 12(x - y) \\ \implies & \frac{1}{z} = \frac{1}{12} \times \frac{1}{x - y} \\ \implies & \frac{1}{z} = (0; 5) \times \frac{1}{(0; 10)} \end{aligned}$$

which gives us

$$\frac{1}{z} = 0; 30. \quad (14)$$

Next, according to lines 11-20, we multiply both sides of (13) by $1/z$ and then use (13)

to find the value of xy as follows:

$$\begin{aligned}
& 13z(x-y)^2 + (3 \times 13)xyz + (13+2)xy = 16; 13, 20 \\
\implies & \frac{1}{z} \times \left(13z(x-y)^2 + (3 \times 13)xyz + (13+2)xy \right) = \frac{1}{z} \times (16; 13, 20) \\
\implies & 13(x-y)^2 + (3 \times 13)xy + (13+2)\left(\frac{1}{z} \times xy\right) = \frac{1}{z} \times (16; 13, 20) \\
\implies & 13(x-y)^2 + (3 \times 13)xy + \left((13+2) \times (0; 30) \right) xy = (0; 30) \times (16; 13, 20) \\
\implies & 13 \times (0; 10)^2 + \left((3 \times 13) + 13 \times (0; 30) + 2 \times (0; 30) \right) xy = 8; 6, 40 \\
\implies & 13 \times (0; 1, 40) + (39 + 6; 30 + 1)xy = 8; 6, 40 \\
\implies & 0; 21, 40 + (46; 30)xy = 8; 6, 40 \\
\implies & (46; 30)xy = 8; 6, 40 - 0; 21, 40 \\
\implies & (46; 30)xy = 7; 45 \\
\implies & xy = \frac{1}{(46; 30)} \times (7; 45) \\
\implies & xy = \frac{1}{6 \times (7; 45)} \times (7; 45)
\end{aligned}$$

which implies that

$$xy = 0; 10. \tag{15}$$

The last part of the text proceeds with the common Babylonian method (completing the square). According to lines 20-21, by (10) and (15), we can write:

$$\begin{aligned}
\frac{x+y}{2} &= \sqrt{\left(\frac{x-y}{2}\right)^2 + xy} \\
&= \sqrt{\left(\frac{0; 10}{2}\right)^2 + 0; 10} \\
&= \sqrt{(0; 5)^2 + 0; 10} \\
&= \sqrt{0; 0, 25 + 0; 10} \\
&= \sqrt{0; 10, 25} \\
&= \sqrt{(0; 25)^2}
\end{aligned}$$

So

$$\frac{x+y}{2} = 0; 25. \tag{16}$$

Now, we are in the position to compute the values of x and y . According to lines 23-24,

it follows from (10) and (16) that

$$\begin{aligned} x &= \frac{x+y}{2} + \frac{x-y}{2} \\ &= 0;25 + 0;5 \\ &= 0;30 \end{aligned}$$

and

$$\begin{aligned} y &= \frac{x+y}{2} - \frac{x-y}{2} \\ &= 0;25 - 0;5 \\ &= 0;20. \end{aligned}$$

Therefore, the required values of the length and the width are

$$x = 0;30 \quad \text{and} \quad y = 0;20.$$

Although we can now understand the mathematical meaning of the second problem, difficult questions still remain:

What are really x and y in this problem?; and

What is the relation between “a canal” (*atappum*) and “a hole” (*kalakkum*)?

To answer these questions, we may need to consider a hypothetical situation where two canals intersect as shown in Figure 4. In this situation, an old canal of depth z and width x is joined by a new canal of depth z and width y at right angles. The intersection between the old and new canals is a rectangle with sides x and y and deepened by 1 kùš, probably to allow the deposit of silt².

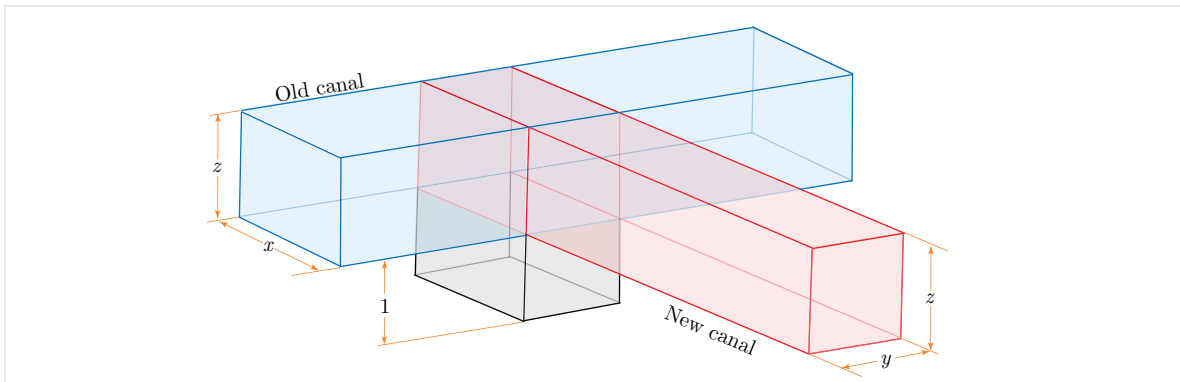


Figure 4: Intersection of two canals

The top view of this intersection is pictured with related dimensions in Figure 5. The rectangle in the east-west direction is the old canal and the one in the north-south direction is the new canal. It is clear from the figure that the junction of the two canals is a cube of length x , width y and depth $1 + z$. According to the text, there are two

² In modern Japan, people sometimes see the same device for irrigation canals.

holes adjoining to this intersection which we have named the large hole and the small hole. Note that the large hole (*kalakki gal*) has dimensions x, x, z and the small hole (*kalakki tur*) has dimensions y, y, z . The unknown quantities asked for in this problem are the length x of the large hole and the length y of the small hole. One might expect here that x is called, for example, *uš kalakki gal* “the length of the large hole” instead of *kalakki gal* “(the length) of the large hole”. Since x is originally the width of the old canal, the Susa scribe might have omitted *uš* “the length” in order to avoid confusion. In fact, neither *uš* “the length” nor *sag* “the width” occurs in the text at all.

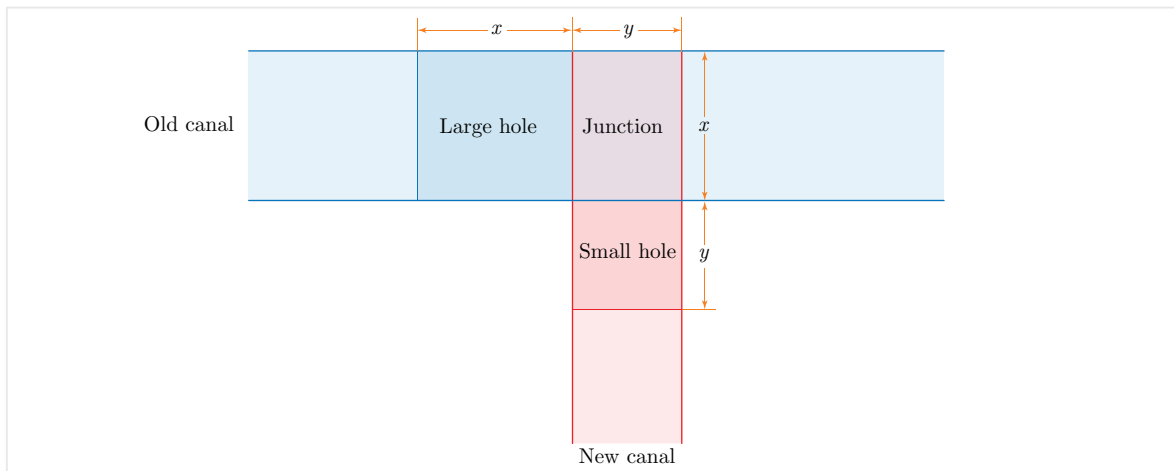


Figure 5: Top view of two intersecting canals and their junction

Now, let us return to the third equation in (10). We interpret the first and the second terms of the left-hand side, i.e., $z(x^2 + y^2) = zx^2 + zy^2$ and $xy(z + 1)$, as the sum of the volumes of the large hole, the small hole and the junction of the two canals respectively. However, as to the third term $\frac{1}{13}(x^2 + y^2)$, we are of the view that it does not have any geometrical meaning and is added to these volumes to make the equation more complicated. There are examples of similar equations in the so-called *series texts*, that is, the ancient drill books in mathematics. For example, the following system of equations is given in the text of **VAT 7537**³:

$$\begin{cases} xy = 10, 0 \\ x^2 + \frac{1}{11} \left(2 \left(\frac{1}{7} \left((2y + 3(x - y)) \right) \right)^2 + x^2 \right) = 16, 40. \end{cases}$$

2.2 SMT No. 25

As mentioned earlier, the problem in **SMT No. 25** concerns the dimensions of a canal.

³ Tablet **VAT 7537** is a Babylonian mathematical text in the Berlin Museum which originally was published by Neugebauer in [Neu35]. For more information about this tablet and its text, see [Mur91-1].

Transliteration

Reverse, Lines 25-34

- (L25) [. me]-e šà giš-g[i . . .] 2 šuššār (ŠÁRxDIŠ) šà pa₅ GIG(?)
(L26) [.] . . . [. . .] uš 5-ta-àm šà 6 š[à šár] . . . -ma
(L27) i[gi-5] pu-ťú-úr 12 ta-mar 12 a-na 6 šà šár i-ší-ma
(L28) 1,12 ta-mar 1 šár ù 12 šu-ši mu-ú a-na 40 erín-hi-a [gar]
(L29) igi-40 erín pu-ťú-úr 1,30 ta-mar 1,30 a-na 1,12 i-ší-ma
(L30) 1,48 ta-mar mu-ú šà erín 1-k[am uš] 1 nindan 30 dagal
(L31) [1],48 mu-ú šu-up-lu mi-nu igi-48 igi-gub pa₅ pu-ťú-[úr]
(L32) [1,15 t]a-mar 1,15 a-na 1,48 me-e šà [erín 1-kam i-ší-ma]
(L33) [2,15 t]a-mar igi-30 dagal pu-ťú-úr 2 ta-mar
(L34) [2,15 a-n]a 2 i-ší-ma 4,30 ta-mar 4,30 šu-up-lu

Translation

Reverse, Lines 25-34

- (L25) water of reed bed 2,0 saros (of water) of a canal.
(L26) the length 5 (**nindan**) each that of 6 saros
(L27) Make the reciprocal of 5, (and) you see 0;12. Multiply 0;12 by 6 saros, and
(L28) you see 1,12,0. 1 saros and 12 sixties is the (volume of) water. Put (it) down
for 40,0 workers.
(L29) Make the reciprocal of 40,0 of the workers, (and) you see 0;0,1,30. Multiply
0;0,1,30 by 1,12,0, and
(L30) you see 1;48. (This is the volume of) the water (per 1 **nindan** in length) of
the first(sic) worker. (If) the length is 1 **nindan**, the breadth is 0;30 (**nindan**),
(and)
(L31) the (volume of) water is 1;48, what is the depth? Make the reciprocal of 0;48,
the constant of a canal, (and)
(L32) you see 1;15. Multiply 1;15 by 1;48 of the water of a worker, and
(L33) you see 2;15. Make the reciprocal of 0;30 of the breadth, (and) you see 2.
(L34) Multiply 2;15 by 2, and you see 4;30. 4;30 (**kùš**) is the depth.

Mathematical Calculations

The statement of the problem is almost entirely broken, and we have been unable to locate a similar problem to assist us in restoring it. However, the text calculates the depth of a canal using several conditions which may well have been provided in the statement. Judging from the calculations performed in the text, the missing conditions might have been as follows:

Problem: Two thousand four hundred workers (40,0 **erín-hi-a**) built a canal whose width is 0;30 **nindan**, and whose reserved water is 6 **šár**⁴ (that is, 6,0,0 **volume-sar**).

⁴ Note that 1 šár=1 saros equals to 1,0,0 in sexagesimal number system.

The workers were each assigned to dig a part of the canal 5 nindan in length. What is the depth of the canal?

Consider a canal of length x , width y , and depth z and denote the depth of its reserved water by z' as is shown in Figure 6. As we said before, we must have

$$\frac{z'}{z} = 0; 48. \tag{17}$$

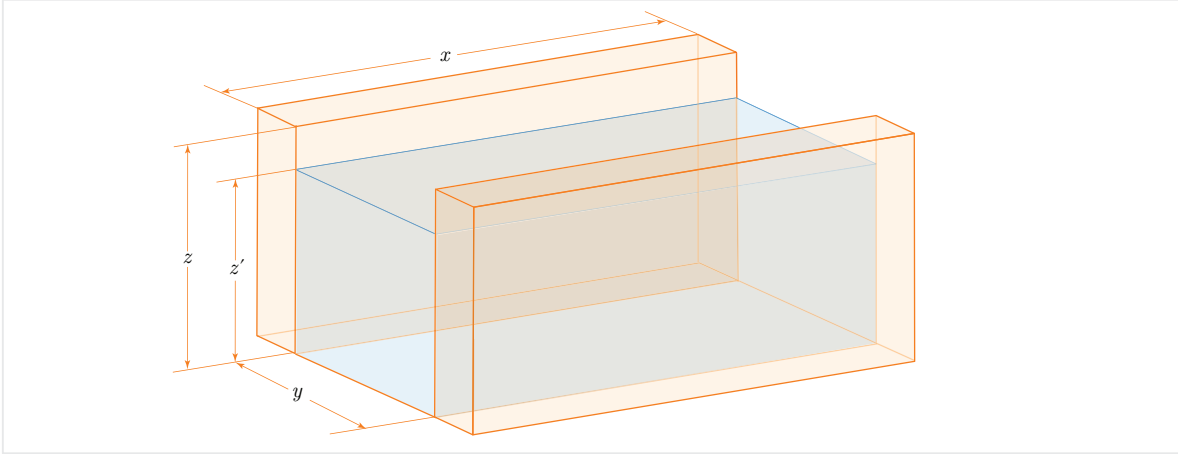


Figure 6: A canal and its reserved water

Let V be the volume of the canal, V' the volume of its reserved water, S the area of its cross-section and S' the area of a part of the cross-section submerged in water. It is clear from the figure that

$$\begin{cases} V = xyz \\ V' = xyz' \\ S = yz \\ S' = yz'. \end{cases} \tag{18}$$

Note that it follows from (17) and (18) that

$$\frac{V'}{V} = \frac{S'}{S} = 0; 48. \tag{19}$$

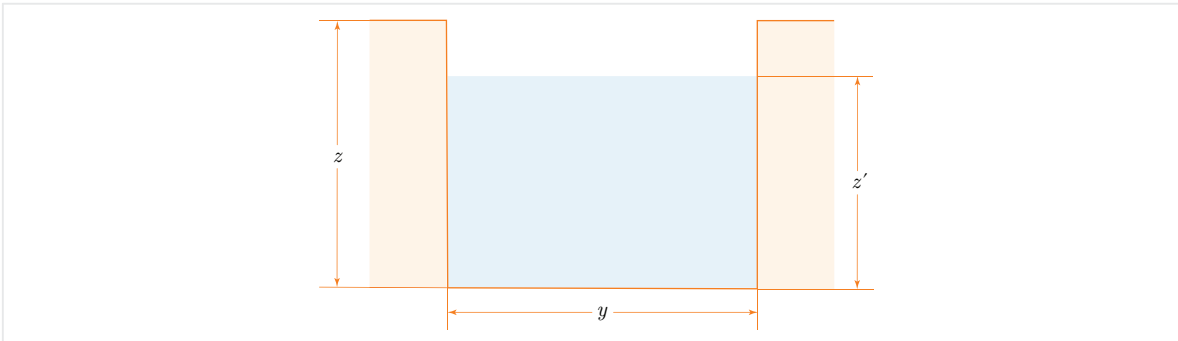


Figure 7: The cross-section of a canal and the level of its reserved water

In [Figure 7](#), we have shown the cross-section of the canal and its reserved water. The height of canal is z' and that of reserved water is z .

In lines 26-30, the scribe has calculated the volume of the water per 1 **nindan** and per one worker, say V'_1 . To do so, he first obtains the the volume V'_0 of water per 1 **nindan** and all workers as follows:

$$\begin{aligned} V'_0 &= \frac{V'}{5} \\ &= \frac{1}{5} \times (6 \text{ šár}) \\ &= (0; 12) \times (6, 0, 0) \\ &= 1, 12, 0 \\ &= 1 \text{ šár } 12 \text{ šūši.} \end{aligned}$$

(Note that 1 *šūši* is equal to $1, 0 = 60$.) Then, he divides this volume $V'_0 = 1, 12, 0$ by the number of all workers to find V'_1 , which is also called “the water of the first worker” in line 30:

$$\begin{aligned} V'_1 &= \frac{V'_0}{(40, 0)} \\ &= \frac{1}{(40, 0)} \times (1, 12, 0) \\ &= (0; 0, 1, 30) \times (1, 12, 0) \\ &= 1; 48. \end{aligned}$$

Note that the value of $V'_1 = 1; 48$ is the volume of the reserved water of the part of canal with length 1. That is, V'_1 is obtained by assuming $x = 1$ in the second equation of [\(18\)](#):

$$V'_1 = 1yz' = yz' = S'.$$

This means V'_1 is equal to the area of the cross-section of the lower part of the canal submerged in water:

$$S' = 1; 48. \tag{20}$$

From [\(18\)](#) and [\(20\)](#), (according to lines 31-33) we can obtain S :

$$\begin{aligned} S &= \frac{S'}{(0; 48)} \\ &= \frac{1}{(0; 48)} \times (1; 48) \\ &= (1; 15) \times (1; 48) \end{aligned}$$

which implies that

$$S = 2; 15. \tag{21}$$

Since by the assumption $y = 0; 30$, we can (according to lines 33-34) use [\(18\)](#) and [\(21\)](#) to find the depth of the canal, i.e., z , as follows:

$$z = \frac{S}{y} = \frac{1}{(0; 30)} \times (2; 15) = 2 \times (2; 15) = 4; 30.$$

Therefore the depth of the canal is

$$z = 4; 30. \tag{22}$$

Note that the depth of water can be easily computed by using (17) and (22) as follows:

$$z' = (0; 48) \times (4; 30) = 3; 36.$$

3 Applications of Mathematics in Ancient Elam

In this section, we consider the possible practical applications of mathematics both in construction projects and in Elamite architecture. The reader will note that the mathematical skills demonstrated in **SMT No. 24** and **SMT No. 25** may well have been of considerable assistance to those charged with the construction of Elamite infrastructure and other substantial buildings at the behest of the Elamite rulers of the time.

3.1 Canals

As for any ancient civilization, water played a decisive role in where the people of ancient Elam decided to settle. The Elamite people were among the very first farmers in the Ancient Near East (see [ÁBW18]), utilizing the nearby rivers to irrigate their lands and farms. For example, the ancient capital city of Susa was founded in a region watered by at least two rivers⁵: the Karkheh and the Dez (see Figure 8).



Figure 8: A satellite view of modern Susa (Google Map)

⁵ Professor Daniel Potts has made a strong case that there was only one river at Susa and that the modern Shavur river was the ancient course of the Karkheh river. See [Pot99] for more details.

Although the course of the Karkheh in ancient Elam has been the subject of considerable scholarly debate, it has been suggested that since the Karkheh river is at a higher level than the fields between the Karkheh and the Dez, the people of Susa may have used the Karkheh’s water to irrigate the land around the city or save it for future purposes (probably for drinking or making mud bricks). According to some research (see [Gra18, Sad14]), there were at least four agricultural sections near ancient Susa which contained more than 40 small irrigation canals. Based on the analysis of other legal, economic and administrative clay tablets excavated from Susa, scholars have been able to determine the names and locations of many of these canals in each of these agricultural sections. These tablets date to the Sukkalmah Dynasty 1900-1500 BC, as do the **SMT**. We have shown three of these sections and the number of canals they contained in Figure 9. The location of the fourth section, described as being “on the other bank of the *Zamun*”, cannot be established as it is not known which river was at that time known as the *Zamun*.

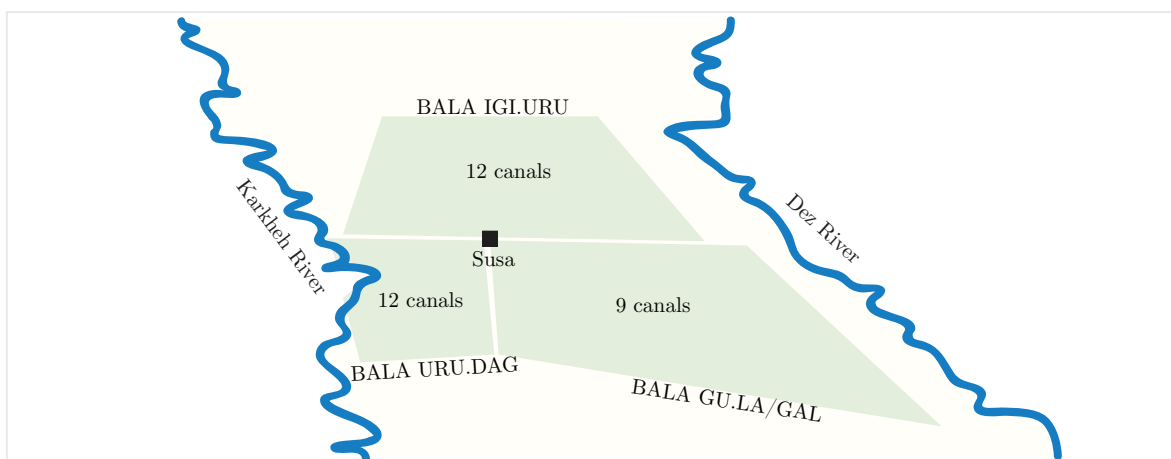


Figure 9: Possible distribution of irrigation canals near Susa (adapted from [Gra18])

In addition to this network of irrigation canals around ancient Susa, there was also the ancient Harmushi canal system, which consisted of a group of connected canals watering the vast area of lands between the Karkheh and the Dez river. Archaeological evidence show that some branches of this network date to the Middle Elamite period (see [Ada62, Ras20, Ras21]).

The main branch of this canal system was called the *Harmushi* and connected to the Karkheh river at the point called *Pay-e Pol* (literally, “at the foot of the bridge”), where there are still the ruins of an ancient dam which regulated the river into different branches. The length of this canal is thought to have been approximately 50km in which case it could have irrigated nearly 200km^2 of the land between the Karkheh and the Dez rivers. Figure 10 shows a hypothetical course of the Harmushi canal network which has been adopted from Adams [Ada62, Fig. 4]. The Harmushi system had several subbranches which is thought to provide water for the livestock of nomadic tribes. Many western travelers and scholars, who visited Khuzistan during last two centuries, mentioned the Harmushi canal in their reports and asserted that it was the

main source for irrigating a large area around Susa (see [Eh175, Fie39, Lor08, Raw36]). Although this ancient canal system had been irrigating the Susa area for more than 3000 years, it was finally replaced by the modern canal network after the construction of a concrete dam built on the Dez river in 1963.



Figure 10: The hypothetical course of the Harmushi canal network

To understand the historical significance of this canal and its importance to the local population, even though there is almost no physical trace of the original system, the name of Harmushi still lives on in the surname of many people whose ancestors lived alongside it for centuries.⁶

In addition to canals, there are archaeological sites near modern Susa containing the remains of other water structures one of which is located in the Elamite holy city of Chogha Zanbil⁷. There is a hydraulic complex consisting of canals and a water reservoir of length 10.70m, width 7.25m and depth 4.35m whose capacity is about 332m³ (see Figure 11).

Although as yet there is no satisfactory explanation for how the hydraulic mechanism of this sophisticated piece of engineering worked, scholars have suggested different hypotheses. Some scholars including Ghirshman believed that this reservoir was fed

⁶ The complete name of the first author used to be “Nasser Heydari Harmushi”.

⁷ The holy city of Chogha Zanbil (also known as *Dur-Untash*, or City of Untash, in Elam) located at 38km to the southeast of Susa was founded by the Elamite king *Untash-Napirisha* (1275–1240 BCE) to be the religious center of Elam. The principal element of this complex is an enormous ziggurat dedicated to the Elamite divinities Inshushinak and Napirisha. For more information, see <https://whc.unesco.org/en/list/113/> or <http://tchoghazanbil.com/>.

by the Karkheh river via the Harmushi canal, which was specially built to supply the new holy city (see [Ghi68, Ste67]). Drinking water was then thought to be distributed throughout the city by a system of smaller canals.



Figure 11: A water reservoir at the holy city of Chogha Zanbil (Credit: The World Heritage of Chogha Zanbil)

While Ghirshman’s opinion prevailed for decades, modern archaeological research has raised serious doubts about his analysis (see [Saf19]). Mofidi-Nasrabadi in [Mof07] has suggested that this water reservoir is actually a part of a drainage system devised by the Elamite engineers to remove floodwater from the holy city during the rainy season.

In either case, the mathematical knowledge of Elamite scribes might have been of assistance in the construction of such a complex structure. Their mathematical skills could have been applied to estimate the amount of time and number of workers needed for such a large engineering project.

4 Conclusion

The interpretation of problems contained in **SMT No. 24** and **SMT No. 25** taken together with the archaeological research confirming the existence of a substantial canal network at the time the problems were inscribed on the tablet, strongly infer that the Susa scribes were interested in the practical application of mathematics to the challenges faced by those living alongside them. These texts suggest that not only was mathematics taught in a “Susa School of Mathematics”, but also that the scribes used their mathematical skills to address issues arising in the design and construction of structures, such as canals, which facilitated both the agricultural and economic development of ancient Elam.

References

- [Ada62] R. M. Adams, *Agriculture and Urban Life in Early Southwestern Iran*, Science, New Series, Vol. 136, No. 3511 (Apr. 13, 1962), pp. 109–122.
- [ÁBW18] J. Álvarez-Mon, G. P. Basello, and Y. Wicks, *The Elamite World*, CRC Press, 2018.
- [BR61] E. M. Bruins and M. Rutten, *Textes Mathématiques de Suse [TMS]*, Librairie Orientaliste Paul Geuthner, Paris, 1961.
- [Ehl75] E. Ehlers, *Traditionelle und moderne Formen der Landwirtschaft in Iran: Siedlung, Wirtschaft und Agrarsozialstruktur in nördlichen Khuzistan seit dem Ende des 19. Jahrhunderts*, Iranian Studies, Vol. 9 (4), (1975), pp. 288–294.
- [Fie39] H. Field, *Contributions to the anthropology of Iran*, Chicago: Field Museum Press, 1939.
- [Ghi68] R. Ghirshman, *Tchoga Zanbil (Dur-Untash) II: Temenos, Temples, Palais, Tombes*, Mémoires de la Délégation archéologique en Iran 40, Librairie Orientaliste Paul Geuthner, Paris, 1968.
- [Gra18] K. D. Graef, *In Susa’s Field: On the Topography of Fields in Old Babylonian Administrative Documents from Susa*, in *Topography and Toponymy in the Ancient Near East: Perspectives and Prospects*, Vol. 71, J. Tavernier, K. Abraham, V. Boschloo, and E. Gorris, Eds. Leuven: Peeters (2018), pp. 267–311.
- [Lor08] J. G. Lormier, *Gazetteer Of The Persian Gulf, Oman and Central Arabia. Vol. II. Geographical And Statistical*, Rashtrapati Bhavan Library, 1908.
- [Mof07] B. Mofidi-Nasrabadi, *Archäologische Ausgrabungen und Untersuchungen in Čoġā Zanbil*, Münster: Agenda Verlag, 2007.
- [Mur91-1] K. Muroi, *The Expressions of Zero and of Squaring in the Babylonian Mathematical Text VAT 7537*, Historia Scientiarum Vol. 1 (1991), pp. 59–62.
- [Mur92-4] K. Muroi, *Small Canal Problems of Babylonian Mathematics*, Historia Scientiarum, Ser. 2, Vol. 1 (1992), pp. 173–180.
- [Mur03-1] K. Muroi, *Mathematical Term Takiltum and Completing the Square in Babylonian Mathematics*, Historia Scientiarum Vol. 12 (2003), pp. 254–263.
- [Neu35] O. Neugebauer, *Mathematische Keilschrift Texte*, Springer-Verlag, 1935.
- [Pot99] D. T. Potts, *Elamite Ulā, Akkadian Ulaya, and Greek Choaspes: A Solution to the Eulaios Problem*, Bulletin of the Asia Institute, 13 (1999), pp. 27–44.
- [Ras20] E. Rashidian, *Landschaftswandel und Siedlungsverschiebung Siedlungsdynamik im Großraum Susiana vom 5. bis 2. Jahrtausend vor unserer Zeit*, J.B. Metzler, 2020.
- [Ras21] E. Rashidian, *Rivers in the making; the definition of “Nahr” as a hybrid water-course based on geoarchaeological evidence from Southwestern Iran*, Water Hist 13 (2021), pp. 235–259.

- [Raw36] H. C. Rawlinson, *Notes on a March from Zohab, at the foot of Zagros, along the mountains to Khuzistan (Susiana), and from thence through the province of Luristan to Kirmanshah, in the year 1836*, Journal of the Royal Geographical Society of London, Vol. 9 (1839), pp. 26–119.
- [Sad14] S. J. Sadafi, *Die Altbabylonischen Kaufurkunden aus Susa*, Universitätsbibliothek Tübingen, 2014.
- [Ste67] M. J. Steve, *Textes Élamites et Accadiens de Tchogha Zanbil*, Mémoires de la Délégation archéologique en Iran 41, Librairie Orientaliste Paul Geuthner, Paris, 1967.
- [Saf19] A. Safari et al, *Geo-Archaeology of West Susiana Plain with an Analysis of Hydraulic Structures (in Farsi)*, Journal of Research on Archaeology, Vol. 5, No.1 (2019), pp. 17-29.