

# Max/Min Puzzles in Geometry II†

Revised

James M Parks  
Dept. of Math.  
SUNY Potsdam  
Potsdam, NY  
*parksjm@potsdam.edu*  
January 20, 2022

**Abstract.** In this paper we continue the investigation of finding the max/min polygons which can be inscribed in a given triangle. We are concerned here with equilateral triangles. This may seem uninteresting or benign at first, but there are some surprises later.

*An inscribed polygon in a given triangle is a polygon which has all of its vertices on the triangle.* In a previous paper [3] we considered the inscribed polygons: parallelograms, rectangles, and squares. In this paper we investigate inscribed equilateral triangles in a given triangle. Figure 1 shows two examples of inscribed equilateral triangles in  $\triangle ABC$ .

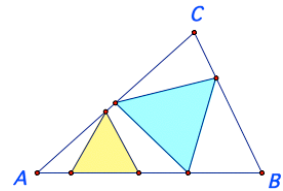


Figure 1

The first Puzzle is a quick investigation of properties of equilateral triangles (*ET* for short). All graphs were made with *Sketchpad*\*.

**Puzzle 1.** *If the sides of the ET  $\triangle XYZ$  have known length  $s$ , determine the height  $h$ , and the area of  $\triangle XYZ$  (denoted by  $(XYZ)$ ). If the height  $h$  of ET  $\triangle XYZ$  is known, determine the length of the side  $s$ , and the area  $(XYZ)$  of  $\triangle XYZ$ .*

Tip: The left and right hand halves of  $\triangle XYZ$  are  $30^\circ$ - $60^\circ$ - $90^\circ$  triangles with sides in the ratios  $s/2$ ,  $s$ , and  $h = s\sqrt{3}/2$ , Fig. 2.

Thus  $(XYZ) = hs/2 = s^2\sqrt{3}/4$ .

On the other hand, given  $h$ , the equality of ratios  $h/\sqrt{3} = s/2$  holds.

Hence  $s = 2h\sqrt{3}/3$ , and  $(XYZ) = h^2\sqrt{3}/3$ .

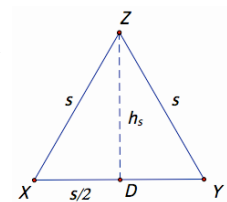


Figure 2

**Puzzle 2.** *Show that an inscribed ET of largest area in a given  $\triangle ABC$ , always shares at least one vertex with  $\triangle ABC$ .*

By trial and error it can be shown that there are only two ways an *ET* of maximum area will fit in a given  $\triangle ABC$ . Either with its base on one side of the triangle and its upper vertex coincides with

†Some of this material has appeared previously [4].

\*All graphs in this paper were made with *Sketchpad v5.10 BETA*.

the upper vertex of the given triangle, Fig. 3 Left, or it's base on one side of the triangle and at least one of it's base vertices coincides with one of the base vertices of the given triangle, Fig. 3 Right. That one side of the largest  $ET$  must be on a side of the triangle is well known [5], [6].

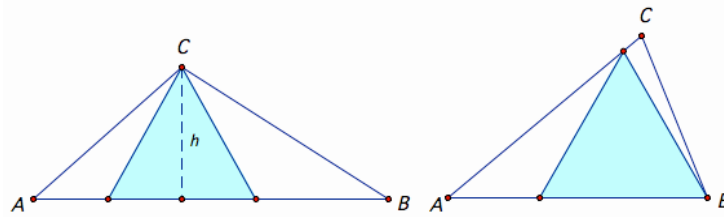


Figure 3

Observe that if the base angles of a side of  $\Delta ABC$  are both greater than  $60^\circ$ , then there is no inscribed  $ET$  possible on that side (look at examples, or see Fig. 13).

In Fig. 3 Left, notice that both base angles of  $\Delta ABC$  are less than  $60^\circ$ , so the area of the largest  $ET$  for this side is determined by the height  $h$  of  $\Delta ABC$ . From *Puzzle 1*, the area of the  $ET$  is  $h^2\sqrt{3}/3$ .

In Fig. 3 Right, base angle  $B$  of  $\Delta ABC$  is greater than  $60^\circ$ , and base angle  $A$  is less than  $60^\circ$ , so it will take some additional calculating to compute the area of the largest  $ET$  for that side of  $\Delta ABC$  (see *Puzzles 3 & 4*).

Since we are looking for the **inscribed  $ET$  of maximum area**, if we can determine the largest inscribed  $ET$  for each side of the given triangle, then **the largest of these three  $ET$ s is called the max  $ET$  of the triangle**, and **the smallest of these 3 is called the min  $ET$  of the triangle**.

By the results in *Puzzle 2* we know exactly where to look for the *max* and *min*  $ET$ s. We will see below that this makes our search much easier.

We consider an example in *Puzzle 3* which illustrates Fig. 3 Right.

The angle notation is standard, angle  $CAB = \alpha$ , and so on.

**Puzzle 3.** Let  $\Delta ABC$  be the given triangle with  $\alpha = 45^\circ$ ,  $\beta = 75^\circ$ ,  $\gamma = 60^\circ$ , and side  $a$  of length 2, Fig. 4. Let  $\Delta BDE$  be the largest  $ET$  with base  $EB$  on side  $AB$ , and  $D$  on side  $AC$ . Compute  $s$ , the length of the side of  $\Delta BDE$ , and the exact area of  $\Delta BDE$ . Is  $\Delta BD$  the max  $ET$  in  $\Delta ABC$ ?

Hint: Drop a perpendicular from  $B$  to  $AC$  at  $M$ .

Then  $\Delta MBC$  is a  $30^\circ$ - $60^\circ$ - $90^\circ$  triangle with  $|BM| = \sqrt{3}$ .

This means that  $c = \sqrt{6}$ , since  $\Delta ABM$  is a  $45^\circ$ - $45^\circ$ - $90^\circ$  triangle.

By the Law of Sines,  $s = \sqrt{6}(\sin 45^\circ / \sin 75^\circ) \sim 1.793$ , since angle  $BDA = 75^\circ$ . Hence  $(BDE) = s^2\sqrt{3}/4 \sim 1.392$ .

For side  $b$  construct a point  $F$  on  $AC$  such that  $|FC| = 2$ .

Then  $\Delta BCF$  is an  $ET$  which is the largest  $ET$  on both sides  $a$  and  $b$ , and  $(BCF) = \sqrt{3} \sim 1.732$ , by *Puzzle 1*.

Thus  $\Delta BCF$  is the *max*  $ET$  in  $\Delta ABC$ .

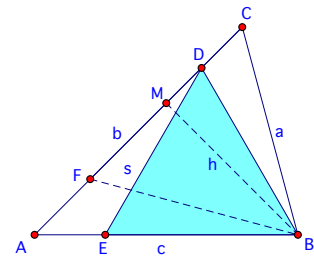


Figure 4

The key to solving *Puzzle 3* was knowing that  $\gamma = 60^\circ$ . But what if  $\gamma \neq 60^\circ$ ? How do we compute the area of  $\Delta BDE$  in that case?

Here's a way to compute the area of such an *ET*.

**Puzzle 4.** Compute the area of the largest inscribed *ET* on side  $c$  of  $\Delta ABC$ , for  $\alpha < 60^\circ$ ,  $\beta > 60^\circ$ .

Hint: By the Exterior Angle Theorem, angle  $CDB = 60^\circ + \alpha$ .

By the Law of Sines,  $s = a \sin \gamma / \sin(60^\circ + \alpha)$ .

But if  $h_b$  is the altitude of  $B$  to  $AC$  at  $M$ ,  $h_b = BM$ , as in Fig.4, then  $\sin \gamma = h_b/a$ , hence  $s = h_b / \sin(60^\circ + \alpha)$ .

So, by the solution to *Puzzle 1*,  $(BDE) = (h_b / \sin(60^\circ + \alpha))^2 \sqrt{3}/4$ .

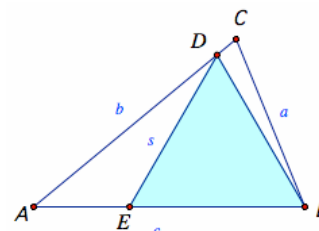


Figure 5

We will now determine the location of the max and min *ETs* for all triangles.

Also, we assume from here on that  $\Delta ABC$  is scalene, unless noted otherwise, and recall in particular that  $\alpha > \beta > \gamma$  iff  $a > b > c$ , [2, Vol.1, Props. 18, 19].

By symmetry, any result we get for  $\Delta ABC$  under these assumptions will also hold for a triangle reflected about the vertical line through the mid-point of the base  $AB$ . So we need only consider those triangles with upper vertex  $C$  to the left of this vertical line. If  $C$  is on this line, then  $\Delta ABC$  is an isosceles triangle, which is a simpler case to work with.

In the chart in Fig. 6 there is a list of examples generated on *Sketchpad*. The ratio of the area of the *ET* to the area of  $\Delta ABC$  is listed in the right-hand column, marked *Ratios*. This makes it easier to compare the sizes of the areas of the *ETs*. The bold **x** marks the side  $a$ ,  $b$ ,  $c$ , where the *max ET* occurs, and the italic *x* marks the side where the *min ET* is found. Several patterns can be observed here.

Angles $\alpha - \beta - \gamma$	Sides: long/middle/short a / b / c	Ratios
70-65-45	x	0.638
"	<b>x</b>	<b>0.677</b>
80-65-35	x	0.461
"	<b>x</b>	<b>0.547</b>
90-70-20	x	0.288
"	<b>x</b>	<b>0.327</b>
90-80-10	x	0.168
"	<b>x</b>	<b>0.173</b>
75-60-45	x	0.589
"	<b>x</b>	<b>0.732</b>
90-60-30	x	0.378
"	<b>x</b> <b>x</b>	<b>0.500</b>
100-60-20	x	0.265
"	<b>x</b> <b>x</b>	<b>0.348</b>
90-50-40	x	0.437
"	<b>x</b>	<b>0.569</b>
110-40-30	x	0.297
"	<b>x</b>	<b>0.395</b>
120-35-25	x    x	0.243
"	<b>x</b>	<b>0.325</b>
130-30-20	x	0.193
"	<b>x</b>	<b>0.258</b>
140-25-15	x	0.150
"	<b>x</b>	<b>0.193</b>

The general results are given in *Puzzle 5*. In each part of *Puzzle 5* an example(s) of triangles from this chart is considered.

Figure 6

**Puzzle 5.** Given  $\Delta ABC$ , suppose the sides  $a$ ,  $b$ ,  $c$  satisfy  $a > b > c$ . Show that the *max ET* is always on the long side  $a$  ( $a$  and  $c$ , when  $\beta = 60^\circ$ ), and the *min ET* is on:

- A. side  $c$ , when  $120^\circ < \alpha$ ; and sides  $b$  and  $c$ , when  $\alpha = 120^\circ$ ;
- B. side  $b$ , when  $60^\circ < \alpha < 120^\circ$ , and  $\beta < 60^\circ$ ;
- C. side  $b$ , when  $60^\circ \leq \beta$ .

In Figures 7 - 10, notice that all 3 largest ETs (2 ETs coincide in Fig.10) have vertex  $A$  in common. Then  $ET \Delta GHA$ , on the long side  $a$ , is the *max ET*, since  $JA$  and  $FA$  are interior to it (a consequence of Euclid Prop. 19 [2]). Since  $\Delta GHA$  and  $\Delta AEF$  coincide when  $\beta = 60^\circ$ , Fig. 10, the *max ET* is on both the long side  $a$  and the short side  $c$  for this case. If  $\beta > 60^\circ$ , Fig. 10, then  $\alpha > \beta > 60^\circ$ , and  $m\angle JAB > m\angle IBA$ . So  $|HI| > |JA|$ , by Euclid Prop. 19 [2], and  $\Delta GHI$  is the *max ET* on the long side  $a$ .

These results agree with what is observed in the chart in Fig. 6.

**A.** Fig. 7 is a  $130^\circ-30^\circ-20^\circ$  triangle with  $ET \Delta GHA$  on the long side  $a$ , which is clearly the *max ET*, since  $|AG| > |AJ|$  and  $|AG| > |AF|$ . If we compare  $|AJ|$  and  $|AF|$  we discover that  $\Delta AEF$  is the *min ET*.

For the general case for  $\alpha > 120^\circ$ , since  $m\angle CAJ = 60^\circ = m\angle FAB$ , it follows that  $m\angle AJC > m\angle AFB$ . So, in  $\Delta AJF$ ,  $s_b = |JA| > |FA| = s_c$ , and the *min ET* is on the short side  $c$ .

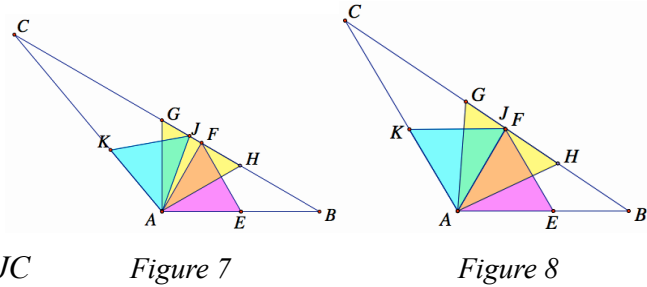
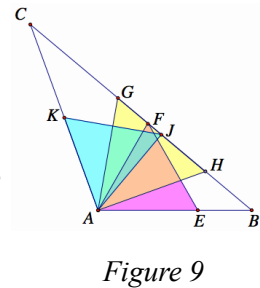


Figure 8 is a  $120^\circ-35^\circ-25^\circ$  triangle with the *max ET*,  $\Delta GHA$ , on the long side  $a$ . From the first of part **A** it follows that  $\Delta GHA$  is larger than the other two  $ETs$ , and  $\Delta AEF$  and  $\Delta JKA$  are congruent. For a general argument, if  $\alpha = 120^\circ$ , then  $s_b = |JA| = |FA| = s_c$ , so  $\Delta AEF$  and  $\Delta AJK$  are congruent, and the *min ET* is on both the short side  $c$ , and the middle side  $b$ .

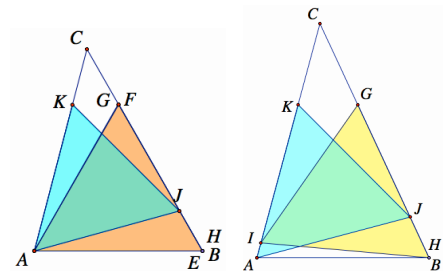
**B.** In the  $110^\circ-40^\circ-30^\circ$  triangle, Fig. 9, the area of the *min ET*,  $\Delta AJK$  on side  $b$ , is less in area than  $ET \Delta AEF$  on side  $c$ , which is less in area than the *max ET*  $\Delta GHA$  on side  $a$ , by comparing sides  $AG$ ,  $AF$ , and  $AJ$ .

For a formal argument, the situation is similar to part **A**, since  $m\angle CAJ = 60^\circ = m\angle FAB$ , so we have  $m\angle AJC > m\angle AFB$ . In  $\Delta AJF$  it follows that  $s_b = |JA| < |FA| = s_c$ , and  $\Delta AJK$  is the *min ET* on the middle side  $b$ .



**C.** In the  $75^\circ-60^\circ-45^\circ$  triangle Fig. 10, the  $ETs$  on sides  $c$  and  $a$  coincide, and have sides of length  $c$ , while the  $ET$  on side  $b$ ,  $\Delta AJK$ , has side  $s_b < c$ .

In general, if  $\beta = 60^\circ$ , then  $\Delta AEF$  and  $\Delta GHA$  coincide. Also  $AJ$  is interior to  $\Delta AEF$ ,  $s_b = |JA| < |AE| = s_c = c$ . This means the *min ET* is  $\Delta AJK$  on the middle side  $b$ .



In the  $70^\circ-65^\circ-45^\circ$  triangle, Fig.11, the length of the side of the *min ET*,  $\Delta AJK$  on side  $b$ , is less than that of the *max ET*,  $\Delta GHI$  on side  $a$ , by comparing  $|AJ|$  and  $|IB|$ .

For the general argument, suppose  $\beta > 60^\circ$ , then  $\alpha > \beta > 60^\circ$ , and by subtracting  $60^\circ$  from  $\alpha$  and  $\beta$  it follows that  $m\angle JAB > m\angle IBA$ . This means  $s_a = |HI| > |JA| = s_b$ , and  $\Delta JKA$  is the *min ET* on

the middle side  $b$ . There is no  $ET$  on side  $c$  in this case, as the base angles are greater than  $60^\circ$ .

In Fig. 12 the graphs of the regions which correspond to Puzzles 5A, 5B, and 5C, are shown. The regions are labeled with the puzzle letter. A typical triangle  $\Delta ABC$  is shown with vertex  $C$  in the region  $B$ . Ignoring isosceles triangles for now, the dashed lines in red and green are off limits, as is the white circular area (recall it is assumed that  $a > b > c$ ).

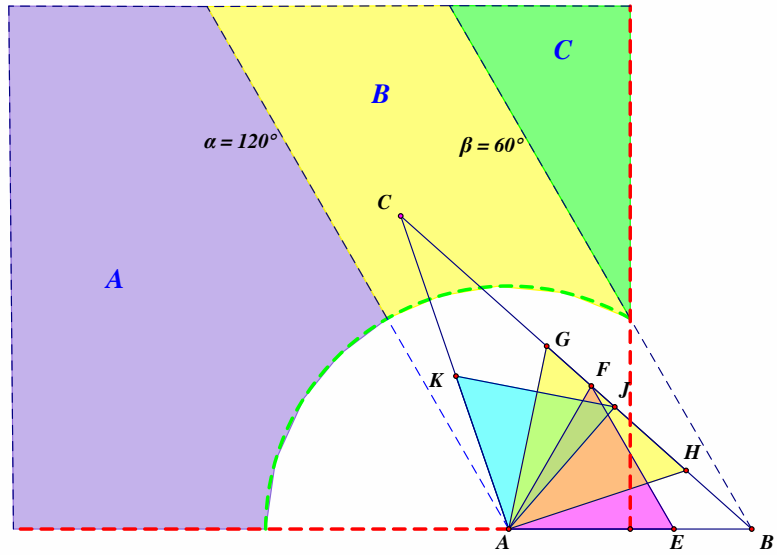


Figure 12

If  $ETs$  of largest area on side  $c$  are allowed, when vertex  $C$  is in region  $C$ , there is a *wedged ET* (*WET* for short) [1], [4].

These are not inscribed  $ETs$  as defined above, since the  $ETs$  do not have all 3 vertices on  $\Delta ABC$ , but they are the largest  $ETs$  on side  $c$ . The term *wedged* was first used by Calabi in [1].

The new results under this change will happen in *Puzzle 5C*, for then a *WET* on the base side  $c$  of the triangle can be included, see Figures 11 and 13.

We list these new results to *Puzzle 5C* here as 5C.1, 5C.2, and 5C.3.

**5C.1.** Let  $\Delta ABC$  satisfy  $60^\circ \leq \beta < 80^\circ$ ,  $60^\circ < \alpha < 90^\circ$ , and  $\alpha + \beta/2 < 120^\circ$ . Then the max *WET* is on the short side  $c$ , and the min *WET* is on the middle side  $b$ .

**5C.2.** In  $\Delta ABC$ , if we assume:

- i.)  $60^\circ < \beta < 80^\circ < \alpha < 90^\circ$ ,  $\alpha/2 + \beta < 120^\circ$ , and  $\alpha + \beta/2 \geq 120^\circ$ , then the min *WET* is on the middle side  $b$ , and the max *WET* is on both the short side  $c$  and the long side  $a$ , when  $\alpha + \beta/2 = 120^\circ$ , and on the long side  $a$ , when  $\alpha + \beta/2 > 120^\circ$ .
- ii.)  $75^\circ < \beta < 90^\circ$ ,  $80^\circ < \alpha < 90^\circ$ , and  $\alpha/2 + \beta \geq 120^\circ$ , then the max *WET* is on the long side  $a$ , and the min *WET* is on the short side  $c$ , when  $\alpha/2 + \beta > 120^\circ$ ; and on the short side  $c$  and the middle side  $b$ , when  $\alpha/2 + \beta = 120^\circ$ .

**5C.3.** In  $\Delta ABC$ , if  $60^\circ < \beta < 90^\circ < \alpha$ , then the max *WET* is on the long side  $a$ , and the min *WET*

- i.) is on the middle side  $b$ , when  $\alpha/2 + \beta < 120^\circ$ , and on the short side  $c$  and the middle side  $b$ , when  $\alpha/2 + \beta = 120^\circ$ ,
- ii.) is on the short side  $c$ , when  $\alpha/2 + \beta > 120^\circ$ .

As might be expected, the arguments for these results are a little more involved than those given for Puzzles 5A, B, and C above. For example, the following is an argument for result 5C.2.i.

Suppose  $60^\circ < \beta < 80^\circ < \alpha < 90^\circ$ ,  $\alpha/2 + \beta < 120^\circ$ ,  $\alpha + \beta/2 = 120^\circ$ , and  $20^\circ < \gamma < 30^\circ$ , by the boundaries of the subregion. This means  $90^\circ < m\angle AEC$ , and  $m\angle BGC < 100^\circ$ . Since  $\beta < \alpha$ ,  $m\angle EAB > m\angle GBA$ , and  $|GB| > |AE|$ . So  $\triangle BHG$  is a possible *max WET* on side  $a$ , and  $\triangle AEF$  is a possible *min WET* on side  $b$ .

Let  $BJ$  be the angle bisector of  $\beta$ ,  $J$  on  $CA$ , Fig. 13. Then  $m\angle AJB = 60^\circ$ , since  $\alpha + \beta/2 = 120^\circ$ . This also means  $\gamma + \beta/2 = 60^\circ$ , by the Ext. Angle Th., so  $m\angle CJB = 120^\circ = m\angle CHG$ , and  $m\angle CGH = \beta/2$ . But then  $m\angle AGB = \alpha$ , since  $\alpha + \beta/2 = 120^\circ$ , so  $\triangle ABG$  is isosceles, and  $c = |GB|$ . Therefore  $\triangle ABD$  and  $\triangle BHG$  are equal *max WETs* on sides  $c$  and  $a$ , resp., and  $\triangle AEF$  is the *min WET* on side  $b$ .

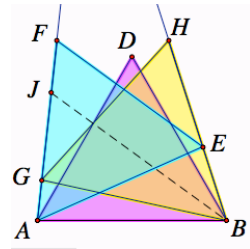


Figure 13

On the other hand, if  $60^\circ < \beta < 80^\circ < \alpha < 90^\circ$ ,  $\alpha/2 + \beta < 120^\circ$ , and  $\alpha + \beta/2 > 120^\circ$ , then  $15^\circ < \gamma < 30^\circ$  (check the conditions for  $\alpha = 90^\circ$ ), and as above  $\triangle CAE$  and  $\triangle CBG$  are similar, so  $m\angle AGB = m\angle AEB$ . Then  $\alpha > \beta$  implies  $\alpha + \beta/2 > \alpha/2 + \beta$ ,  $m\angle EAB > m\angle GBA$ , and  $m\angle AEB > \beta$ , so  $|GB| > c > |AE|$ . This means that  $\triangle BHG$  is the *max WET* on side  $a$  and  $\triangle AEF$  is the *min WET* on side  $b$ .

The argument for 5C.2.ii is analogous, but the angle  $\alpha$  is bisected instead of angle  $\beta$  in that case. Also, a similar argument can be used in 5C.3.

The other cases for isosceles triangles with central angle less than  $90^\circ$  are contained in results 5C.1, and 5C.2.ii.

These new results for Puzzle 5C divide region C, Fig. 12, into subregions which correspond to each of these new results, Fig. 14.

The subregion C.2.i is of particular interest, as two of the boundaries are the graphs of cubic equations, determined by the conditions on the angles in that part.

In region C.2.ii, if  $\alpha/2 + \beta = 120^\circ$ , then  $\gamma = 60^\circ - \alpha/2$ , so by the law of sines, if  $c = 1$ , then  $b = \sin\beta/\sin\gamma = \sin(120^\circ - \alpha/2)/\sin(60^\circ - \alpha/2) = \sin(60^\circ + \alpha/2)/\sin(60^\circ - \alpha/2)$ , [2].

Converting to polar coordinates:  $r = \sin(60^\circ + \theta/2)/\sin(60^\circ - \theta/2)$ , for  $80^\circ < \theta < 90^\circ$ ,  $A = (0, 0)$  the polar pole,  $B = (1, 0)$ ,  $\theta = \alpha$ , and  $AB$  on the polar axis.

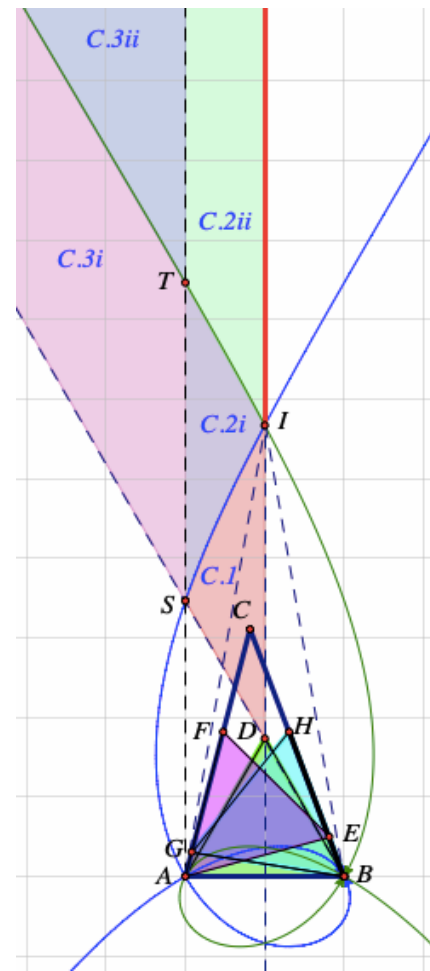


Figure 14

Changing to rectangular coordinates, by the usual method, determines the associated cubic equation:

$$\sqrt{3}x^3 + x^2(y - 2\sqrt{3}) + \sqrt{3}x(y^2 + 1) + y^3 - 2\sqrt{3}y^2 - y = 0.$$

The graph of this curve (green) is the lower bound of region C.2.ii (green) and the upper bound of region C.2.i.

Similarly, the lower bound of region C.2.i (blue) which is the upper bound of region C.1 satisfies the condition  $\alpha + \beta/2 = 120^\circ$ , so  $\gamma = 60^\circ - \beta/2$ .

By the law of sines, if  $c = 1$ , then  $b = \sin\beta/\sin\gamma = \sin(240^\circ - 2\alpha)/\sin(\alpha - 60^\circ)$ .

The corresponding polar coordinates equation is:  $r = \sin(240^\circ - 2\theta)/\sin(\theta - 60^\circ)$ , for  $80^\circ < \theta < 90^\circ$ .

In rectangular coordinates this corresponds to the cubic equation:

$$\sqrt{3}x^3 - x^2(y + \sqrt{3}) + x(\sqrt{3}y^2 + 2y) + \sqrt{3}y^2 - y^3 = 0.$$

The graph of this curve (blue) is the lower bound of region C.2.i, and the upper bound of C.1.

The two cubic curves are symmetric about the vertical line through points D and I. The point labeled I is a point where the 2 cubics intersect, and also the upper vertex of a triangle which is a WET analog of Calabi's result for wedged squares in triangles, Puzzle 6, [1] [3].

It should be obvious that if  $\Delta ABC$  is itself an ET, then all inscribed ETs of largest area will coincide with  $\Delta ABC$ . From our analysis above this is the only triangle where the 3 largest inscribed ETs are equal. However, if WETs are admitted, then a new possibility exists.

**Puzzle 6.** If  $\Delta ABC$  is isosceles with base angles of  $80^\circ$ , show that the largest WETs on sides a, b, and c are congruent.

Hint: Let  $\Delta BHG$ ,  $\Delta AEF$ , and  $\Delta ABD$  be the largest WETs on sides a, b, and c, respectively, Fig. 15.

Since  $\alpha = \beta = 80^\circ$ , it follows that  $\gamma = 20^\circ$ , and also  $m\angle EAB = m\angle GBA = 20^\circ$ .

So,  $m\angle AEB = m\angle BGA = 80^\circ$ .

Thus, it follows that triangles  $\Delta ABE$  and  $\Delta ABG$  are isosceles, so  $|GB| = |AB| = |AE|$ .

Hence, all 3 largest WETs:  $\Delta ABD$ ,  $\Delta AEF$ , and  $\Delta BHG$ , are congruent.

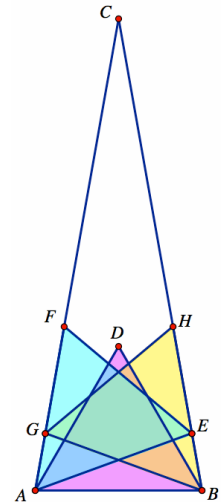


Figure 15

## References

1. E. Calabi, *Outline of Proof Regarding Squares Wedged in Triangles*,  
<http://www.mit.edu/~sfinch/calabi.html>
2. T. Heath, *EUCLID, The Thirteen Books of THE ELEMENTS*, Vol. 1, 2<sup>nd</sup> ed., Dover, 1956.
3. J. Parks, *Max/Min Puzzles in Geometry*, arXiv: 2201.02050.
4. \_\_\_\_\_, *Inscribing ETs in Triangles*, NYSMTJ, Vol. 63, No. 2, 2013.
5. K. A. Post, *Triangle in a triangle: on a problem of Steinhaus*, *Geom. Dedicata* 45 (93)  
115-120.
6. Sullivan, J. M., *Polygon in triangle: generalizing a theorem of Post*,  
<http://torus.math.uiuc.edu/jms/>, 1996.