

# Ricci-flat graphs with maximum degree at most 4

Shuliang Bai \*

Linyuan Lu †

Shing-Tung Yau ‡

December 26, 2018

## Abstract

A graph is called Ricci-flat if its Ricci curvatures vanish on all edges, here the definition of Ricci curvature on graphs was given by Lin-Lu-Yau [5]. The authors in [4] and [2] obtained a complete characterization for all Ricci-flat graphs with girth at least five. In this paper, we completely determined all Ricci-flat graphs with maximum degree at most 4.

*keywords:* Ricci curvature, Ricci-flat graph, maximum degree

## 1 Introduction

There is an increasing interest in applying tools and ideas from continuous geometry to discrete setting such as graphs. One of the principal developments in this area concerns curvature for graphs. It is known that Ricci curvature plays a very important role on geometric analysis on Riemannian manifolds. As for graphs, the first definition of Ricci curvature was introduced by Fan Chung and Yau[8] in 1996, their definition provides a curvature at each vertex. In 2009, Ollivier[7] gave a notation of coarse Ricci curvature of Markov chains valid on arbitrary metric spaces, including graphs. His definition on graphs provides a curvature on each edge and depends on a so-called idleness parameter. For a more general definition of Ricci curvature, Lin and Yau [6] gave a generalization of lower Ricci curvature bound in the framework of graphs in term the notation of Bakry and Emery. In 2011, Lin-Lu-Yau [5] modified Ollivier's definition. The modified version is a more suitable definition for graphs.

By Lin-Lu-Yau's definition, a Ricci-flat graph is a graph where Ricci curvature vanishes on every edge. In Riemannian manifold, there are many works on constructing Calabi-Yau manifolds which is a class of manifolds with zero Ricci curvature. As an analog, we want to know what do Ricci-flat graphs look like? There have been works on classifying Ricci-flat graphs. At first, [4] and [2] classified all Ricci-flat graphs with girth at least five. Then the authors in [3] characterized all Ricci-flat graphs of girth four with vertex-disjoint 4-cycles, their results show that there are two such graphs. While the fact is there are infinitely many Ricci-flat graphs with girth three or four. In this paper, we will completely classify these Ricci-flat graphs with maximum vertex degree at most 4.

Throughout this paper, let  $G = (V, E)$  represent an undirected connected graph with vertex set  $V$  and edge set  $E$  without multiple edges or self loops. For any vertices  $x, y \in V$ , let  $d(x)$  denote the degree of vertex  $x$ ,  $d(x, y)$  denote the distance from  $x$  to  $y$ , i.e. the length of the shortest path from  $x$  to  $y$ . Denote  $\Gamma(x)$  as the set of vertices that are adjacent to  $x$ , and  $N(x) = \Gamma(x) \cup \{x\}$ . Notation  $x \sim y$  represent that two vertices  $x$  and  $y$  are adjacent and  $(x, y)$  represent the edge. Let  $C_3, C_4, C_5$  represent any cycle of length 3, 4, 5 respectively. Let  $\mathcal{G}$  be the set of simple graphs with maximum degree at most 4 that contains at least one copy of  $C_3$  or  $C_4$ . Since the Ricci-flat graphs with girth at least five have been completely determined [5], we will only need to find the Ricci-flat graphs from the class  $\mathcal{G}$  for our purpose.

\*Harvard University, Cambridge, MA 02138 ([sbai525@cmsa.fas.harvard.edu](mailto:sbai525@cmsa.fas.harvard.edu)).

†University of South Carolina, Columbia, SC 29208 ([lu@math.sc.edu](mailto:lu@math.sc.edu)). Supported in part by NSF grant DMS 1600811 and ONR grant N00014-17-1-2842.

‡Harvard University, Cambridge, MA 02138 ([yau@math.harvard.edu](mailto:yau@math.harvard.edu)). Supported by NSF grant DMS-1607871: Analysis, Geometry and Mathematical Physics and National Science Foundation DMS-1418252: Collaborative Research: Geometric Analysis for Computer and Social Networks.

**Definition 1.** A probability distribution over the vertex set  $V$  is a mapping  $\mu : V \rightarrow [0, 1]$  satisfying  $\sum_{x \in V} \mu(x) = 1$ . Suppose that two probability distributions  $\mu_1$  and  $\mu_2$  have finite support. A coupling between  $\mu_1$  and  $\mu_2$  is a mapping  $A : V \times V \rightarrow [0, 1]$  with finite support so that

$$\sum_{y \in V} A(x, y) = \mu_1(x) \text{ and } \sum_{x \in V} A(x, y) = \mu_2(y).$$

The transportation distance between two probability distributions  $\mu_1$  and  $\mu_2$  is defined as follows:

$$W(\mu_1, \mu_2) = \inf_A \sum_{x, y \in V} A(x, y) d(x, y),$$

where the infimum is taken over all coupling  $A$  between  $\mu_1$  and  $\mu_2$ .

A coupling function provides a lower bound for the transportation distance, the following definition can provide an upper bound for the transportation distance.

**Definition 2.** Let  $G = (V, E)$  be a locally finite graph. Let  $f : V \rightarrow \mathbb{R}$ . We say  $f$  is 1-Lipschitz if

$$f(x) - f(y) \leq d(x, y),$$

for each  $x, y \in V$ .

By the duality theorem of a linear optimization problem, the transportation distance can also be written as follows:

$$W(\mu_1, \mu_2) = \sup_f \sum_{x \in V} f(x) [\mu_1(x) - \mu_2(x)],$$

where the supremum is taken over all 1-Lipschitz functions  $f$ .

For any vertex  $x \in V$  and any value  $\alpha \in [0, 1]$ , the probability distribution  $\mu_x^\alpha$  is defined as:

$$\mu_x^\alpha(z) = \begin{cases} \alpha, & \text{if } z = x, \\ \frac{1-\alpha}{d(x)}, & \text{if } z \sim x, \\ 0, & \text{otherwise.} \end{cases}$$

For any  $x, y \in V$ , the  $\alpha$ -Ricci curvature  $k_\alpha$  is defined to be

$$k_\alpha(x, y) = 1 - \frac{W(\mu_x^\alpha, \mu_y^\alpha)}{d(x, y)}.$$

Then the Ollivier-Ricci curvature  $k(x, y)$  is defined by Lin-Lu-Yau as

$$k(x, y) = \lim_{\alpha \rightarrow 1} \frac{k_\alpha(x, y)}{1 - \alpha}.$$

In [1], the authors introduced the concept of idleness function and studied its several properties. In the  $\alpha$ -Ollivier-Ricci curvature, for every edge  $(x, y)$  in  $G = (V, E)$ , the value  $\alpha$  is called the *idleness*, and function  $\alpha \rightarrow k_\alpha(x, y)$  is called the *Ollivier-Ricci idleness function*.

**Theorem 1.** Let  $G = (V, E)$  be a locally finite graph. Let  $x, y \in V$  such that  $x \sim y$  and  $d(x) \geq d(y)$ . Then  $\alpha \rightarrow k_\alpha(x, y)$  is a piece-wise linear function over  $[0, 1]$  with at most 3 linear parts. Furthermore,  $k_\alpha(x, y)$  is linear on  $[0, \frac{1}{\lceil \min(d(x), d(y)) \rceil + 1}]$  and is also linear on  $[\frac{1}{\max(d(x), d(y)) + 1}, 1]$ . Thus, if we have further condition  $d(x) = d(y)$ , then  $k_\alpha(x, y)$  has at most two linear parts.

By above theorem, to study the local structure of an edge  $(x, y)$  such that  $k(x, y) = 0$ , we only need to consider

$$k_\alpha(x, y) = 0, \text{ for } \alpha = \frac{1}{\max(d(x), d(y)) + 1},$$

equivalently,

$$W(\mu_x^\alpha, \mu_y^\alpha) = 1, \text{ for } \alpha = \frac{1}{\max(d(x), d(y)) + 1}.$$

Here are some helpful lemmas for our study.

**Lemma 1.** [5] Suppose that an edge  $(x, y)$  in a graph  $G$  is not in any  $C_3, C_4$  or  $C_5$ . Then  $k(x, y) = \frac{2}{d(x)} + \frac{2}{d(y)} - 2$ .

**Corollary 1.** [5] Suppose that  $x$  is a leaf-vertex (i.e.  $d(x) = 1$ ). Let  $y$  be the only neighbor of  $x$ . Then  $k(x, y) > 0$ .

**Lemma 2.** [5] Suppose that an edge  $(x, y)$  in a graph  $G$  is not in any  $C_3$  or  $C_4$ . Then  $k(x, y) \leq \frac{1}{d(x)} + \frac{2}{d(y)} - 1$ .

For any edge  $(x, y)$  in a Ricci-flat graph  $G$ , we require  $k(x, y) = 0$ , by Lemma 1, if  $0 = k(x, y) \neq \frac{2}{d(x)} + \frac{2}{d(y)} - 2$ , then  $(x, y)$  must be either in  $C_3$  or  $C_4$  or  $C_5$ . Similarly, by Lemma 2, if  $0 = k(x, y) > \frac{1}{d(x)} + \frac{2}{d(y)} - 1$ , then  $(x, y)$  must be either in  $C_3$  or  $C_4$ ; by Corollary 1, there is no leaf-vertex in a Ricci-flat graph.

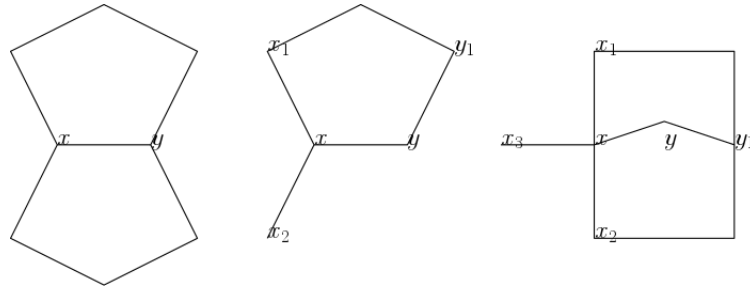
We first study the local structure in any Ricci-flat graph, that is, for every edge  $(x, y) \in E(G)$ , analysis the distance between each pair of vertices in  $\Gamma(x) \times \Gamma(y)$ , then take all “good” structures into consideration to find the Ricci-flat graphs in class  $\mathcal{G}$ . All Ricci-flat graphs with maximum degree at most 4 are showing in Theorems 6, 7, 8, 9, 11.

## 2 Study of local structures in $\Gamma(x) \cup \Gamma(y)$

In this section, let  $(x, y)$  be an edge in any Ricci-flat graph, we will study the distance between any pair of vertices in  $\Gamma(x) \cup \Gamma(y)$ . Let us first recall the local structure when edges are not contained in any  $C_3$  or  $C_4$ .

**Lemma 3.** [5] Suppose that an edge  $(x, y)$  in a graph  $G$  is not in any  $C_3$  or  $C_4$ . Without loss of generality, we assume  $d(x) \geq d(y)$ . If  $k(x, y) = 0$ , then one of the following statements holds:

1.  $d(x) = d(y) = 2$ . In this case,  $(x, y)$  is not in any  $C_5$ .
2.  $d(x) = d(y) = 3$ . In this case,  $(x, y)$  is shared by two  $C_5$ s.
3.  $d(x) = 2, d(y) = 2$ . In this case, let  $y_1$  be the other neighbor of  $x$  other than  $y$ . Let  $x_1, x_2$  be two neighbors of  $x$  other than  $y$ . Then  $\{d(x_1, y_1), d(x_2, y_1)\} = \{2, 3\}$ .
4.  $d(x) = 4$  and  $d(y) = 2$ . In this case, let  $y_1$  be the other neighbor of  $y$  other than  $x$ . Let  $x_1, x_2, x_3$  be three neighbors of  $x$  other than  $y$ . Then at least two of  $x_1, x_2, x_3$  have distance 2 from  $x$ .



In the following, we consider the case when an edge is supported on  $C_3$  or  $C_4$  or both. For convenience, we label all vertices by nonnegative integers, where  $x$  and  $y$  are labeled by 0, 1 respectively. Vertices in  $\Gamma(x)$  are labeled by first  $d(x)$  positive integers, vertices in  $\Gamma(y)$  are labeled by the succeeding integers. Note in [3], the authors also analyzed the local structures of edge with Ricci curvature 0, the difference is that their conclusions are based on that the the graph has girth 4 and the 4-cycles in the graph are mutually vertex-disjoint. Our results on these local structures can be applied to graphs without any restriction.

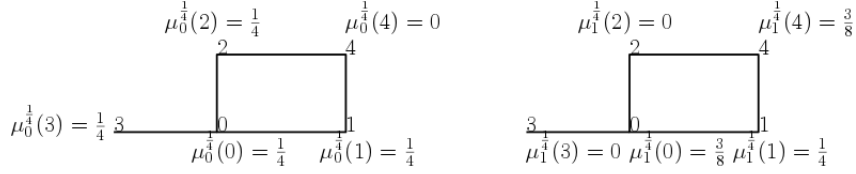
### 2.1 $d(x) = 2, d(y) = 2$

For the case  $k(x, y) = 0$  with  $d(x) = d(y) = 2$ , by Definition 1, shortening the distance for any pair of vertices would not increase the value of  $W(\mu_x^{\frac{1}{3}}, \mu_y^{\frac{1}{3}})$ , thus  $(x, y)$  cannot appear in any  $C_3$  or  $C_4$  or  $C_5$ .

## 2.2 $d(x) = 3, d(y) = 2$

By Lemma 1,  $\frac{2}{d(x)} + \frac{2}{d(y)} - 2 = \frac{2}{3} + \frac{2}{2} - 2 \neq 0$ . Thus  $(x, y)$  must be either in  $C_3$ , or  $C_4$  or  $C_5$ .

- If  $(x, y)$  in  $C_4$ , see the following graph, taking  $A(3, 0) = A(3, 4) = \frac{1}{8}, A(2, 4) = \frac{1}{4}$  and other values  $A(i, j) = 0$ , we have  $W(\mu_x^{\frac{1}{4}}, \mu_y^{\frac{1}{4}}) \leq A(3, 0) \times d(3, 0) + A(3, 4) \times d(3, 4) + A(2, 4) \times d(2, 4) = \frac{1}{8} \times 1 + \frac{1}{8} \times 3 + \frac{1}{4} \times 1 = 0.75 < 1$ .

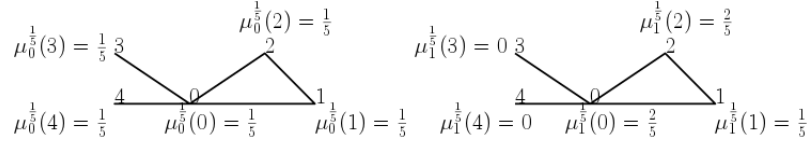


Thus  $(x, y)$  cannot appear in any  $C_3$  or  $C_4$ .

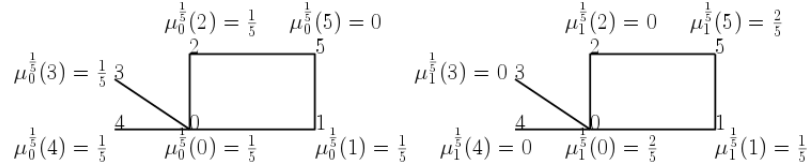
## 2.3 $d(x) = 4, d(y) = 2$

By Lemma 1,  $\frac{2}{d(x)} + \frac{2}{d(y)} - 2 = \frac{2}{4} + \frac{2}{2} - 2 \geq 0$ . Thus  $(x, y)$  must be either in  $C_3$ , or  $C_4$  or  $C_5$ .

- If  $(x, y)$  in  $C_3$ , see the following graph,  $W(\mu_x^{\frac{1}{5}}, \mu_y^{\frac{1}{5}}) < 1$  by taking  $A(3, 0) = A(4, 2) = \frac{1}{5}$  and other values  $A(i, j) = 0$ .



- If  $(x, y)$  is in  $C_4$ . See the following  $W(\mu_x^{\frac{1}{5}}, \mu_y^{\frac{1}{5}}) = 1$ . For  $W(\mu_x^{\frac{1}{5}}, \mu_y^{\frac{1}{5}}) < 1$ , we take  $A(0, 3) = A(5, 2) = A(5, 4) = \frac{1}{5}$  and other values  $A(i, j) = 0$ . For  $W(\mu_x^{\frac{1}{5}}, \mu_y^{\frac{1}{5}}) \leq 1$ , we take  $f(0) = 2, f(1) = 2, f(2) = f(3) = f(4) = 1$  and  $f(5) = 3$ .

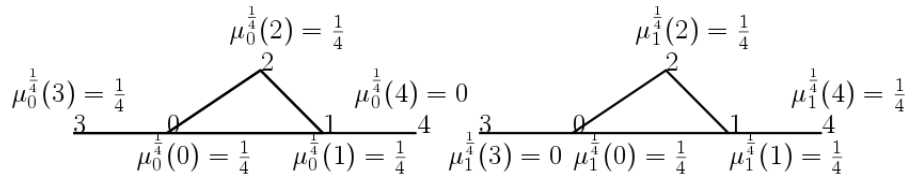


Note if  $d(3, 5) = 2$ ,  $W(\mu_x^{\frac{1}{5}}, \mu_y^{\frac{1}{5}}) < 1$  by taking  $A(4, 0) = A(2, 5) = A(3, 5) = \frac{1}{5}$ , and other values  $A(i, j) = 0$ . Similarly for  $d(4, 5)$ . Thus if  $(0, 1)$  is in  $C_4$  with  $d(2, 5) = 1$ , then  $d(3, 5)$  and  $d(4, 5)$  must be 3.

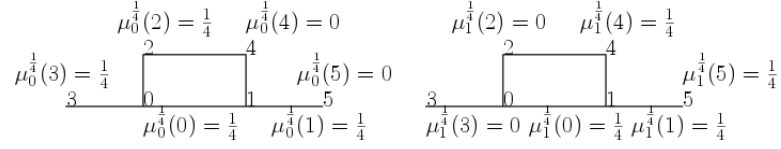
## 2.4 $d(x) = 3, d(y) = 3$

By Lemma 1,  $\frac{2}{d(x)} + \frac{2}{d(y)} - 2 = \frac{2}{3} + \frac{2}{3} - 2 \neq 0$ . Thus  $(x, y)$  must be either in  $C_3$ , or  $C_4$  or  $C_5$ .

- If  $(x, y)$  is in  $C_3$ , see the following graph,  $W(\mu_x^{\frac{1}{4}}, \mu_y^{\frac{1}{4}}) < 1$  by taking  $A(3, 4) = \frac{1}{4}$  and other values  $A(i, j) = 0$ . Contradiction.



- If  $(x, y)$  is in  $C_4$ , see the following graph,  $W(\mu_x^{\frac{1}{4}}, \mu_y^{\frac{1}{4}}) = 1$ . For  $W(\mu_x^{\frac{1}{4}}, \mu_y^{\frac{1}{4}}) \leq 1$ , we can take  $A(2, 4) = A(3, 5) = \frac{1}{4}$ . For  $W(\mu_x^{\frac{1}{4}}, \mu_y^{\frac{1}{4}}) \geq 1$ , we can take  $f(0) = 2, f(1) = 1, f(2) = f(3) = 3, f(4) = 2, f(5) = 0$ .

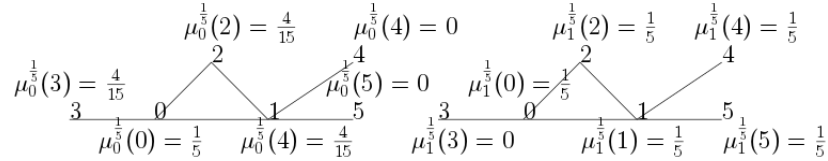


Note if  $d(2, 4) = 1$ , then  $d(3, 5)$  must be 3. If further  $d(2, 5) = 1$  or 2 then  $d(3, 4)$  must be 3, and we still have  $W(\mu_x^{\frac{1}{4}}, \mu_y^{\frac{1}{4}}) = 1$ . Similarly, if further  $d(3, 4) = 1$  or 2 then  $d(2, 5)$  must be 3, still  $W(\mu_x^{\frac{1}{4}}, \mu_y^{\frac{1}{4}}) = 1$ .

## 2.5 $d(x) = 3, d(y) = 4$

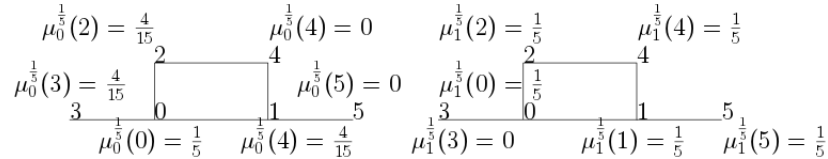
By Lemma 2,  $\frac{1}{d(x)} + \frac{2}{d(y)} - 1 = \frac{1}{3} + \frac{2}{4} - 1 < 0$ . Thus  $(x, y)$  must be either in  $C_3$  or  $C_4$ .

- If  $(x, y)$  is in  $C_3$ , see the following graph.  $W(\mu_x^{\frac{1}{5}}, \mu_y^{\frac{1}{5}}) = 1$ . For  $W(\mu_x^{\frac{1}{5}}, \mu_y^{\frac{1}{5}}) \leq 1$ , we can take  $A(1, 4) = A(1, 5) = \frac{1}{30}, A(3, 4) = A(3, 5) = \frac{2}{15}, A(2, 4) = A(2, 5) = \frac{1}{30}$  and other values  $A(i, j) = 0$ . For  $W(\mu_x^{\frac{1}{5}}, \mu_y^{\frac{1}{5}}) \geq 1$ , we can take  $f(0) = 2, f(1) = 1, f(2) = 1, f(3) = 3, f(4) = f(5) = 0$ .



If  $d(3, 5) = 2$ , taking the same function  $A(i, j)$ , we have  $W(\mu_x^{\frac{1}{5}}, \mu_y^{\frac{1}{5}}) < 1$ . Thus  $d(3, 5), d(3, 4)$  must be 3.

- If  $(x, y)$  is in  $C_4$ , see the following graph,  $W(\mu_x^{\frac{1}{5}}, \mu_y^{\frac{1}{5}}) = 1.2666$  by taking  $f(0) = 2, f(1) = 1, f(2) = f(3) = 3, f(4) = f(5) = f(6) = 0$ .



We claim  $(x, y)$  cannot share two  $C_4$ s, otherwise if both  $d(2, 4), d(3, 5)$  are 1, that is,  $(0, 1)$  shares two  $C_4$ s, then  $W(\mu_x^{\frac{1}{5}}, \mu_y^{\frac{1}{5}}) \leq 0.8666$  by taking  $A(2, 4) = A(3, 5) = \frac{1}{5}$  and other values  $A(i, j) = 0$ .

Thus there are two main cases left:

- $(x, y)$  is contained in exactly two  $C_4$ s.

Case a:  $(0, 1)$  is in two  $C_4$ s with  $C_4 = 0 - 2 - 4 - 1 - 0$  and  $C_4 = 0 - 2 - 5 - 1 - 0$ .

We claim that  $d(3, 6)$  cannot be 2 under this assumption. Otherwise, take  $A(1, 5) = A(2, 5) = \frac{1}{15}, A(2, 4) = \frac{3}{15}, A(3, 5) = \frac{1}{15}, A(3, 6) = \frac{2}{15}$ , then  $W(\mu_0^{\frac{1}{5}}, \mu_1^{\frac{1}{5}}) \leq \frac{1}{15} + \frac{1}{15} + \frac{3}{15} + d(3, 5) \times \frac{1}{15} + d(3, 6) \times \frac{2}{15} = \frac{9}{15} + \frac{d(3, 5)}{15} \leq \frac{12}{15} < 1$ , a contradiction.

We claim whatever  $d(2, 6)$  is (2 or 3),  $d(3, 4), d(3, 5)$  cannot be both 3, since we can take  $f(0) = 2, f(1) = 1, f(2) = 1, f(3) = 3, f(4) = f(5) = f(6) = 0$ , then  $W(\mu_0^{\frac{1}{5}}, \mu_1^{\frac{1}{5}}) = f(0) \times 0 + f(1) \times \frac{1}{15} + (f(2) + f(3)) \times \frac{4}{15} - (f(4) + f(5) + f(6)) \times \frac{3}{15} = \frac{1}{15} + \frac{16}{15} > 1$ . Thus one of  $d(3, 4), d(3, 5)$  must be 2. By the symmetry of vertex 4 and vertex 5, wlog, let  $d(3, 5) = 2$ . See the following graph, we have  $W(\mu_1^{\frac{1}{5}}, \mu_1^{\frac{1}{5}}) = 1$  by taking  $A(1, 6) = A(2, 5) = \frac{1}{15}, A(3, 6) = A(3, 5) = \frac{2}{15}, A(2, 4) = \frac{3}{15}$ , and  $f(0) = 2, f(1) = 1, f(2) = 2, f(3) = 3, f(4) = f(5) = 1, f(6) = 0$ .

Case b:  $(0, 1)$  is in two  $C_4$ s with  $C_4 = 0 - 1 - 4 - 2 - 0$ ,  $C_4 = 0 - 1 - 4 - 3 - 0$ .

We analysis the values of  $d(2, 5), d(2, 6), d(3, 5), d(3, 6)$ . Currently we have  $W(\mu_0^{\frac{1}{5}}, \mu_1^{\frac{1}{5}}) \geq 1.26666$ . Thus one of  $d(2, 5), d(2, 6), d(3, 5), d(3, 6)$  must be 2. Wlog, let  $d(2, 5) = 2$ . We calim that  $d(3, 6) = 3$ , otherwise let  $d(2, 6) = d(3, 5) = 3$ , take  $A(1, 5) = \frac{1}{15}, A(2, 4) = \frac{2}{15}, A(3, 4) = \frac{1}{15}, A(3, 6) = \frac{3}{15}$  and others  $A(i, j) = 0$ , then  $W(\mu_0^{\frac{1}{4}}, \mu_1^{\frac{1}{4}}) \leq 0.9333$ , thus  $d(3, 6)$  must be 3. Similarly, if  $d(2, 6) = 2$ , then  $d(3, 5)$  must be 3. Assume  $d(2, 6) = 3, d(3, 5) = 2$ , take the 1-Lipschitz function  $f(0) = 2, f(1) = 1, f(2) = f(3) = 3, f(4) = 2, f(5) = 1, f(6) = 0$ , then  $W(\mu_0^{\frac{1}{4}}, \mu_1^{\frac{1}{4}}) \geq \frac{16}{15} > 1$ . Thus  $d(2, 6) = 2, d(3, 5) = 3$ .

–  $(x, y)$  is contained in exactly one  $C_4$ , then at least one of  $d(3, 5), d(3, 6)$  is 2.

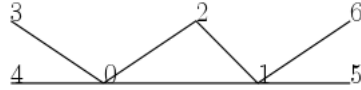
Wlog, let  $d(3, 5) = 2$ , we have  $W(\mu_x^{\frac{1}{5}}, \mu_y^{\frac{1}{5}}) \geq 1.066666$  by taking  $f(0) = 2, f(1) = 1, f(2) = f(3) = 3, f(4) = 2, f(6) = 0, f(5) = 1$ . Now there are two cases to consider.

1. If further  $d(3, 6) = 2$ , then  $d(2, 5) = d(2, 6) = 3$ . For  $W(\mu_x^{\frac{1}{5}}, \mu_y^{\frac{1}{5}}) \leq 1$ , we can take  $A(1, 5) = A(1, 6) = A(2, 5) = A(2, 6) = \frac{1}{30}, A(3, 5) = A(3, 6) = \frac{2}{15}, A(2, 4) = \frac{3}{15}$  and other values  $A(i, j) = 0$ . For  $W(\mu_x^{\frac{1}{5}}, \mu_y^{\frac{1}{5}}) \geq 1$ , we can take  $f(0) = 2, f(1) = 1, f(2) = 3, f(3) = 2, f(4) = 2, f(5) = f(6) = 0$ . From the values of  $A(i, j), d(2, 5), d(2, 6)$  must be 3.
2. If further  $d(3, 6) = 3$ , then  $d(2, 6) = 2, d(2, 5)$  could be 2 or 3. When  $d(2, 6) = 2$ , taking  $A(1, 6) = A(2, 6) = \frac{1}{15}, A(3, 5) = \frac{2}{15}, A(2, 4) = \frac{3}{15}$  and other values  $A(i, j) = 0$ , we get  $W(\mu_0^{\frac{1}{5}}, \mu_1^{\frac{1}{5}}) \leq \frac{3}{15} + 2 \times \frac{1}{15} + 2 \times \frac{3}{15} + \frac{1}{15} + 3 \times \frac{1}{15} = 1$ . Taking  $f(0) = 2, f(1) = 1, f(2) = 2, f(3) = 3, f(4) = 1, f(5) = 1, f(6) = 0$ , we have  $W(\mu_0^{\frac{1}{5}}, \mu_1^{\frac{1}{5}}) \geq 1$ . From the values of  $f(i), d(2, 6)$  must be 2.

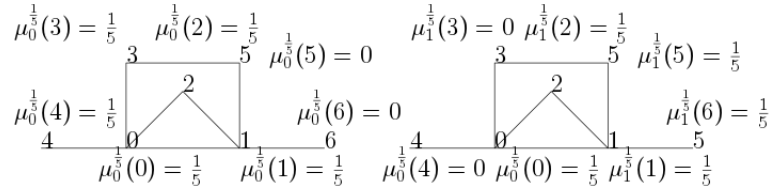
## 2.6 $d(x) = 4, d(y) = 4$

By Lemma 2,  $\frac{1}{d(x)} + \frac{2}{d(y)} - 1 = \frac{1}{4} + \frac{2}{4} - 1 < 0$ . Thus  $(x, y)$  must be either in  $C_3$  or  $C_4$ .

- If  $(x, y)$  is in  $C_3$ , see the following graph.  $W(\mu_x^{\frac{1}{5}}, \mu_y^{\frac{1}{5}}) \geq 1.2$ , since we can take  $f(0) = 2, f(1) = f(2) = 1, f(3) = f(4) = 3, f(5) = f(6) = 0$ .

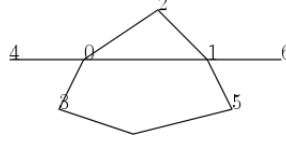


Note  $(x, y)$  cannot share both  $C_3$  and  $C_4$ . For example, if  $d(3, 5) = 1$ , ever  $d(4, 6) = 3$ , we have  $W(\mu_0^{\frac{1}{5}}, \mu_1^{\frac{1}{5}}) \leq 0.8$  by taking  $A(3, 5) = A(4, 6) = \frac{1}{5}$ . It implies that  $(x, y)$  cannot share two  $C_3$ s.

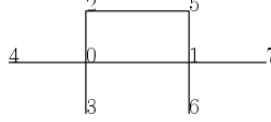


Then we need to solve  $d(3, 5) \times A(3, 5) + d(3, 6) \times A(3, 6) + d(4, 5) \times A(4, 5) + d(4, 6) \times A(4, 6)$ , by symmetric of these four vertices, there is only one solution: if  $d(3, 5) = 2$ , then  $d(4, 6)$  must be 3 and  $A(3, 5) = A(4, 6) = \frac{1}{5}$ ,  $d(3, 6), d(4, 5)$  could be 2 or 3. To see this, let  $d(3, 5) = 2$ , if  $d(4, 6) = 2$ , then  $W(\mu_0^{\frac{1}{5}}, \mu_1^{\frac{1}{5}}) \leq 0.8$  by taking  $A(3, 5) = A(4, 6) = \frac{1}{5}$  and other values  $A(i, j) = 0$ . Thus we have when the edge  $(0, 1)$  is in the  $C_3 := 0 - 1 - 2 - 0$ , then if  $d(3, 5) = 2$ , then  $d(4, 6) = 3$ .

If further  $d(3, 6) = 3$ , then  $d(4, 5)$  could be 2 or 3, since we can take  $f(0) = 2, f(1) = f(2) = 1 = f(5), f(3) = f(4) = 3$  and  $f(6) = 0$  such that  $W(\mu_0^{\frac{1}{5}}, \mu_1^{\frac{1}{5}}) \geq 1$  and take  $A(3, 5) = A(4, 6) = \frac{1}{5}$  and other values  $A(i, j) = 0$  such that  $W(\mu_0^{\frac{1}{5}}, \mu_1^{\frac{1}{5}}) \leq 1$ .

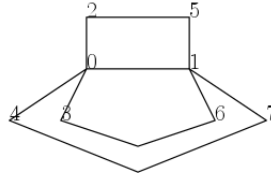


- When  $(x, y)$  is in one  $C_4$ , see the following graph.  $W(\mu_x^{\frac{1}{5}}, \mu_y^{\frac{1}{5}}) = 1.4$ .



Then we analysis the other pair of neighbors  $(3, 6), (3, 7), (4, 6), (4, 7)$ .

- Assume  $d(3, 6) = 1$ , then  $d(4, 7)$  must be 3. Otherwise  $W(\mu_0^{\frac{1}{5}}, \mu_1^{\frac{1}{5}}) \leq 0.8$  by taking  $A(2, 5) = A(3, 6) = A(4, 7) = \frac{1}{5}$ . Let  $d(4, 7) = 3$ , then  $(x, y)$  shares two  $C_4$ s, we have  $W(\mu_0^{\frac{1}{5}}, \mu_1^{\frac{1}{5}}) \leq 1$  by taking  $A(2, 5) = A(3, 6) = A(4, 7) = \frac{1}{5}$ ; and  $W(\mu_x^{\frac{1}{5}}, \mu_y^{\frac{1}{5}}) \geq 1$  by taking take  $f(0) = 2, f(1) = 1, f(2) = f(3) = f(4) = 3, f(5) = f(6) = 2, f(7) = 0$ .  
When  $d(2, 6) = 1$  (and  $d(3, 5) = 1$ ), then  $d(4, 5), d(4, 6)$  could be 1. When  $d(2, 7) = 1$  or  $d(3, 7) = 1$ , then  $d(4, 5), d(4, 6)$  must be 3. When  $d(2, 7) = 2$  (and  $d(3, 7) = 2$ ),  $d(4, 5), d(4, 6)$  could be 2 or 3.
- Assume  $d(3, 6) = 2$ , then  $d(4, 7)$  must be 2. Otherwise we can take  $f(0) = 2, f(1) = 2, f(2) = f(3) = f(4) = 3, f(5) = 2, f(6) = 1, f(7) = 0$ , then  $W(\mu_0^{\frac{1}{5}}, \mu_1^{\frac{1}{5}}) \geq 1.2$ . Let  $d(3, 6) = 2 = d(4, 7) = 2$ , then  $W(\mu_0^{\frac{1}{5}}, \mu_1^{\frac{1}{5}}) = 1$  by taking  $f(2) = f(3) = f(4) = 3, f(5) = 2, f(7) = 1, f(6) = 1$  and  $A(2, 5) = A(3, 6) = A(4, 7) = \frac{1}{5}$ .



If further  $d(2, 6) = d(2, 7) = 1, d(3, 5) = d(4, 5) = d(4, 6) = d(3, 7) = 2$ , then still  $W(\mu_0^{\frac{1}{5}}, \mu_1^{\frac{1}{5}}) = 1$ .

## 2.7 Conclusion on local structures

Based on above analysis, we get the following summary.

**Lemma 4.** *Suppose  $(x, y)$  is an edge in a graph  $G$  with Ricci curvature  $k(x, y) = 0$ . Then one of the following statements holds.*

*Type 1:*  $d(x) = 2, d(y) = 2$ , then  $(x, y)$  is not in any  $C_3, C_4$  or  $C_5$ .

*Type 2:*  $d(x) = 3, d(y) = 2$ , then  $(x, y)$  is in exactly one  $C_5$ . In other words, let  $x_1, x_2$  be the neighbors of vertex  $x$ ,  $y_1$  be the neighbor of  $y$ , then  $\{d(x_1, y_1), d(x_2, y_2)\} = \{2, 3\}$ .

*Type 3:*  $d(x) = 4, d(y) = 2$ , then  $(x, y)$  is either in exactly one  $C_4$  or is in at least two  $C_5$ s. In other words, let  $x_1, x_2, x_3$  be the neighbors of vertex  $x$ ,  $y_1$  be the neighbor of  $y$ , if  $d(x_1, y_1) = 1$ , then  $d(x_2, y_1) = d(x_3, y_1) = 3$ . If  $d(x_1, y_1) = 2$ , then at least one of  $d(x_2, y_1), d(x_3, y_1)$  is 2.

*Type 4:*  $d(x) = 3, d(y) = 3$ , then  $(x, y)$  either is in at least one  $C_4$  or shares two  $C_5$ s. In other words, let  $x_1, x_2$  be the neighbors of vertex  $x$ ,  $y_1, y_2$  be the neighbors of  $y$ . Then there are two main cases:

*Case 1: If  $d(x_1, y_1) = 1$ , then  $d(x_2, y_2) = 3$ . If further  $d(x_1, y_2) = 1, 2$ , then  $d(x_2, y_1) = 3$ . Similarly, if  $d(x_2, y_1) = 1, 2$ , then  $d(x_1, y_2) = 3$ .*

*Case 2: If  $d(x_1, y_1) = 2$ , then  $d(x_2, y_2) = 2$ .*

*Type 5:  $d(x) = 3, d(y) = 4$ , then  $(x, y)$  either shares one  $C_3$  or shares one  $C_4$  plus one  $C_5$ . In other words, let  $x_1, x_2$  be the neighbors of vertex  $x$ ,  $y_1, y_2, y_3$  be the neighbors of  $y$ . Then there are three main cases:*

*Case 1: If  $x_1 = y_1$ , then  $d(x_2, y_2) = d(x_2, y_3) = 3$ ;*

*Case 2: If  $d(x_1, y_1) = d(x_1, y_2) = 1$ , then  $d(x_2, y_3) = 3$  and at least one of  $d(x_2, y_1), d(x_2, y_2)$  is 3;*

*If  $d(x_1, y_1) = d(x_2, y_1) = 1$ , then  $\{d(x_1, y_2), d(x_1, y_3), d(x_2, y_2), d(x_2, y_3)\}$  is in the set  $\{2, 2, 3, 3\}$  or  $\{3, 3, 2, 2\}$ ;*

*Case 3: If  $d(x_1, y_1) = 1$ , then at least one of  $d(x_2, y_2), d(x_2, y_3)$  is 2. Further, there are two types.*

*Type 5a: If  $d(x_2, y_2) = d(x_2, y_3) = 2$ , then  $d(x_1, y_2) = d(x_1, y_3) = 3$ .*

*Type 5b: If  $d(x_2, y_2) = 2, d(x_2, y_3) = 3$ , then  $d(x_1, y_3) = 2, d(x_1, y_2) = 2$  or 3.*

*Type 6:  $d(x) = d(y) = 4$ , then  $(x, y)$  either shares one  $C_3$  plus one  $C_5$  or shares two  $C_4$ s or shares one  $C_4$  plus two  $C_5$ s. In other words, let  $x_1, x_2, x_3$  be the neighbors of vertex  $x$ ,  $y_1, y_2, y_3$  be the neighbors of  $y$ . Then there are three main cases:*

*Type 6a:  $x_1 = y_1$  and  $d(x_2, y_2) = 2$ , then  $d(x_3, y_3)$  must be 3.*

*Type 6b:  $d(x_1, y_1) = 1$  and  $d(x_2, y_2) = 1$ , then  $d(x_3, y_3)$  must be 3.*

*Type 6c:  $d(x_1, y_1) = 1, d(x_2, y_2) = 2$  and  $d(x_3, y_3) = 2$ .*

## 2.8 Further analysis

Above conclusions can be applied to Ricci-flat graphs without degree restriction. We now give several simple facts and further study these conclusions on Ricci-flat graphs with maximum degree at most 4.

**Lemma 5.** *Let  $G$  be a Ricci-flat graph that does not contain edge with endpoints degree  $\{2, 2\}$ , then any edge in  $G$  is either contained in a  $C_3$  or  $C_4$  or  $C_5$ .*

**Lemma 6.** *Let  $G$  be a Ricci-flat graph with maximum degree at most 4, then no edge in  $G$  shares  $C_3$  and  $C_4$ .*

**Lemma 7.** *Let  $G$  be any Ricci-flat graph with maximum degree at most 4 that contains an edge  $(x, y)$  with  $d(x) = 3$  and  $d(y) = 4$ , then  $(x, y)$  is not contained in any  $C_3$ . Thus Case 1 in ‘‘Type 5’’ is excluded for our purpose.*

**Lemma 8.** *Let  $G$  be a Ricci-flat graph with maximum degree at most 4, if there exists an edge  $(x, y)$  with  $d(x) = 3$  and  $d(y) = 4$ , then  $(x, y)$  must be contained in exactly one  $C_4$ . Thus Case 2 in ‘‘Type 5’’ is excluded for our purpose.*

**Lemma 9.** *Let  $G$  be a Ricci-flat graph with maximum degree at most 4, if there exists an edge  $(x, y)$  with endpoint degree  $(d(x), d(y)) = (3, 3)$ , then  $(x, y)$  is not contained in any  $C_4$ . Thus Case 1 in ‘‘Type 4’’ is excluded for our purpose.*

**Lemma 10.** *Let  $G$  be a Ricci-flat graph with maximum degree at most 4, if there exists an edge  $(x, y)$  with  $d(x) = d(y) = 3$ , and  $(x, y)$  shares two  $C_5$ s. Then  $d(z) = d(w)$  if both  $z, w$  are adjacent to  $x$  or  $y$ .*

**Theorem 2.** *Let  $G$  be a Ricci-flat graph with maximum degree at most 4. If  $G$  contains an edge  $(x, y)$  with  $d(x) = 3, d(y) = 2$ . Then  $(x, y)$  shares two  $C_5$ s, and  $G$  is the Half-dodecaheral graph.*

**Remark 1.** *Note Half-dodecaheral graph is proved to be Ricci-flat in [5], however we cannot use their results since we make no assumption on the girth of  $G$ .*

**Lemma 11.** *Let  $G$  be a Ricci-flat graph with maximum degree at most 4, if there exists an edge  $(x, y)$  with  $d(x) = 3, d(y) = 4$ , and  $(x, y)$  is contained in exactly one  $C_4 := x - x_1 - y_1 - y - x$  and let  $x_2, y_2, y_3$  be the neighbors of  $x$  and  $y$  that are not on the  $C_4$ , then  $d(x_2) = 3, d(x_1) = 4$ .*



### 3 Ricci-flat graphs containing vertex with degree 3

We have determined the Ricci-flat graphs in class  $\mathcal{G}$  that contains an edge with endpoint degree  $\{2, 3\}$  in Theorem 2. In this section, we continue with endpoint degree  $(3, 3)$  and  $(3, 4)$ . To determine the former case (see Theorem 5), we will need the Theorem 3. So let us start with the graphs that contain an edge with endpoint degrees  $\{3, 4\}$ . There are two case “Type 5a” and “Type 5b”. For “Type 5a”, we have the following four Ricci-flat graphs.

**Theorem 3.** Let  $G$  be a Ricci-flat graph with maximum degree at most 4, let  $(x, y)$  be an edge in  $G$  with  $d(x) = 3, d(y) = 4$  that satisfies “Type 5a”. Then  $G$  is isomorphic to one of the following graphs.

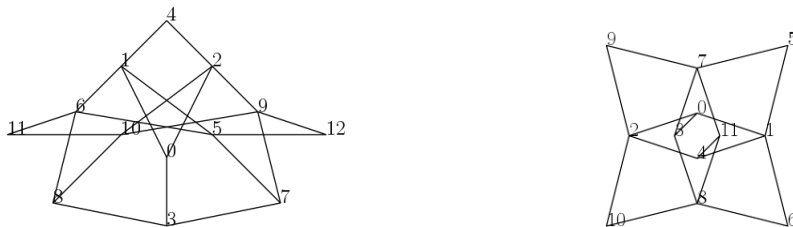


Figure 1: Ricci-flat graphs  $G_1, G_2$

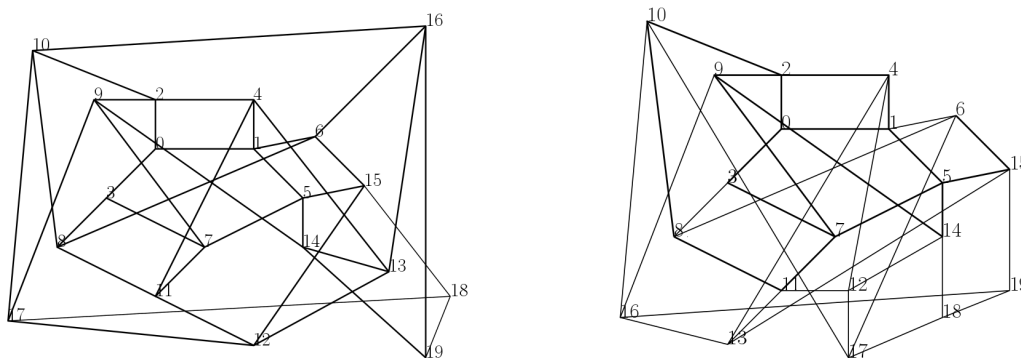


Figure 2: Ricci-flat graphs  $G_3, G_4$

Next we will reject the other case “Type 5b” for the edge with endpoint degrees  $\{3, 4\}$ .

**Theorem 4.** Let  $G$  be a graph with maximum degree at most 4, let  $(x, y)$  be an edge in  $G$  with  $d(x) = 3, d(y) = 4$  that satisfies “Type 5b”. Then  $G$  cannot be a Ricci-flat graph.

**Theorem 5.** Let  $G$  be a Ricci-flat graph with maximum degree at most 4, if there exists an edge  $(x, y)$  with endpoint degree  $(d(x), d(y)) = (3, 3)$ , and  $(x, y)$  is contained in exactly two separate  $C_5$ s. Then  $G$  is one of the following: the dodecahedral graph, the Petersen graph, the half-dodecahedral graph and the Triplex graph.

### 4 The other Ricci-flat graphs

In previous sections, we have finished all cases when an edge has endpoint degrees  $(2, 2), (2, 3), (3, 3), (3, 4)$ . In this section, we consider the Ricci-flat graphs that contain edges with endpoint degrees  $(2, 4), (4, 4)$ , we first classify these that contain a copy of  $C_3$ .

#### 4.1 Ricci-flat graphs that contain $C_3$

**Theorem 6.** Let  $G$  be a Ricci-flat graph with maximum degree at most 4 and there exist an edge  $e = (x, y)$  with  $d(x) = d(y) = 4$  such that  $e$  is contained in a  $C_3$ . Then the graph is isomorphic to graphs  $G_5, G_6$  and  $G_7$ .



Figure 3: Ricci-flat graph  $G_5, G_6$

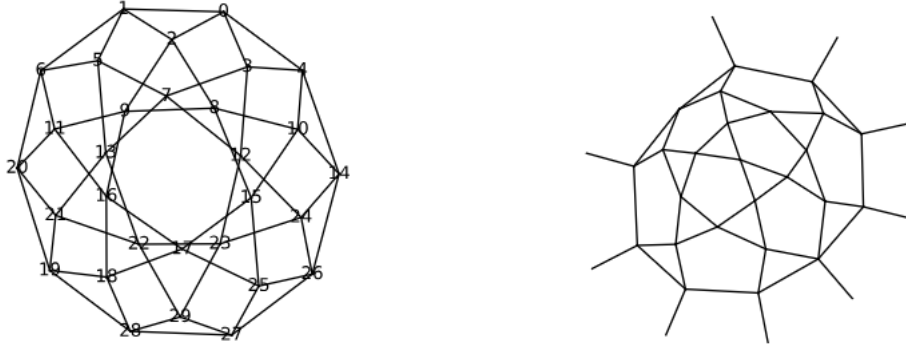


Figure 4: Ricci-flat graph  $G_7$  and its local structure

**Remark 2.** In Geometry,  $G_7$  is a polyhedron called *icosidodecahedron* with 20 triangular faces, 12 pentagonal faces, and 30 vertices, 60 edges.

## 4.2 Ricci-flat graphs that contain $C_4$

Now all Ricci-flat graphs containing  $C_3$  are determined. In the following section we will only consider the Ricci-flat graphs containing  $C_4$ s. Basically these can be classified into three cases:

- all  $C_4$ s are vertex-disjoint;
- exist two  $C_4$ s sharing an edge;
- no two  $C_4$ s sharing an edge, but exist two  $C_4$ s sharing a vertex.

We consider each case.

**Theorem 7.** Let  $G$  be a Ricci-flat graph with maximum vertex degree 4, assume  $G$  contains no edges with endpoint degree  $(3, 4)$ , and all  $C_4$ s of  $G$  are vertex-disjoint. Then  $G$  is isomorphic to  $G_8$ .

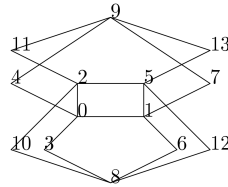


Figure 5: Ricci-flat graph  $G_8$

In the following parts, we will see many infinite Ricci-flat graphs, we call these as *primitive graphs*, as from each, we can obtain finite Ricci-flat graphs which are obtained by a vertex-preserve projection from the primitive graph.

For the second and third cases, we first consider the case when a vertex in some  $C_4$  has degree 2, see the following results:

**Theorem 8.** Let  $G$  be a Ricci-flat graph with maximum degree at most 4. Let edge  $(x, y) \in E(G)$  be in a  $C_4$  with  $d(x) = 4$  and  $d(y) = 2$ . Then the  $G$  is isomorphic to graphs with the primitive graphs showing in the Figures 6, 7, 8, 9.




Figure 6: Ricci-flat graphs: the primitive graph and an example of finite type

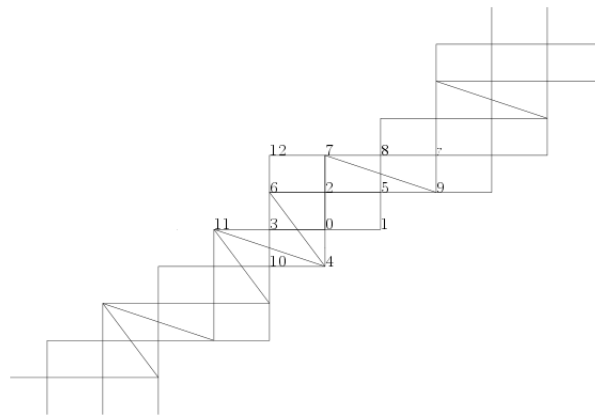


Figure 7: Ricci-flat graphs: the primitive graph

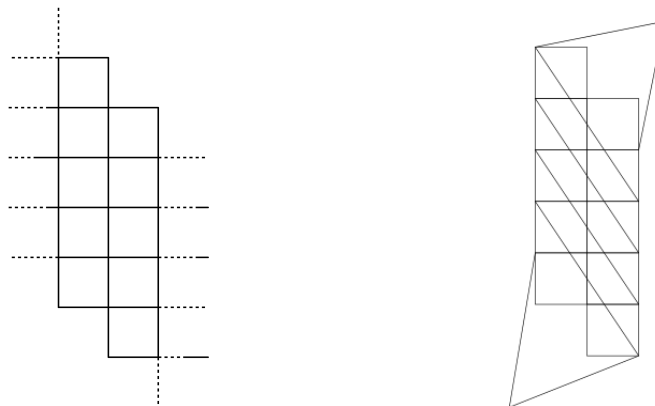


Figure 8: Infinite Ricci-flat graph of length 5, the first way to generate a finite type with width 2.

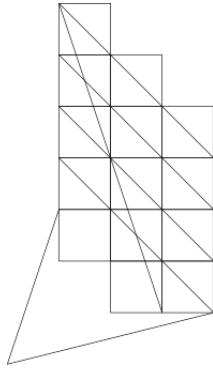


Figure 9: The second way to generate a finite type with width 3.

The other situation for the second case is that all four vertices in any  $C_4$  have degree 4, then  $G$  must be 4-regular, we have the following results.

**Theorem 9.** Let  $G$  be a 4-regular Ricci-flat graph that contains two  $C_4$ s sharing one edge. Then  $G$  is isomorphic to to graphs with the primitive graphs showing in the Figures 10, 12.

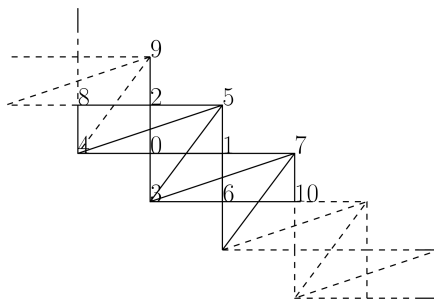


Figure 10: A primitive Ricci-flat graph

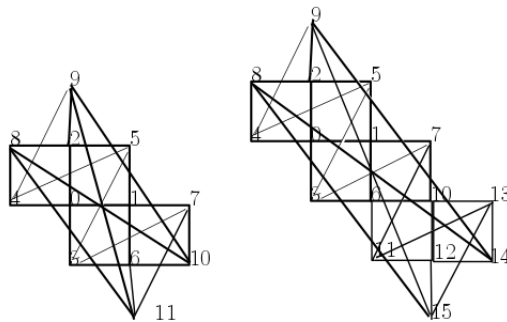


Figure 11: Two finite 4-regular Ricci-flat graphs




Figure 12: A primitive 4-regular Ricci-flat graph of “lattice type”

*Examples:*

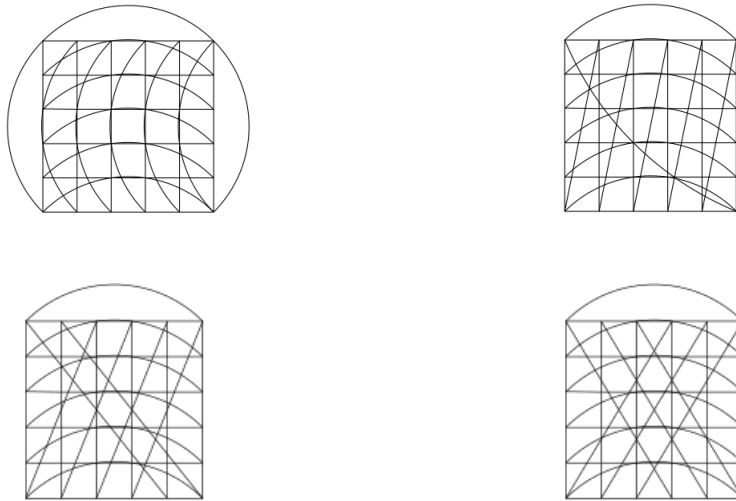


Figure 13: Finite 4-regular Ricci-flat graphs of “lattice type”

**Theorem 10.** *Let  $G$  be a Ricci-flat graph that contains two  $C_4$ s sharing one edge and all vertices on any  $C_4$  have degree 4. Assume  $G$  is not 4-regular,  $G$  is isomorphic to Figure 32.*

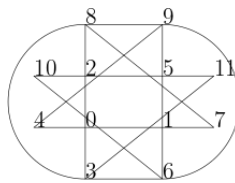


Figure 14: A Ricci-flat graph

*For the third case, let  $G$  be a 4-regular Ricci-flat graph in class  $\mathcal{G}$  such that there exist two  $C_4$ s sharing one vertex and any two  $C_4$ s don't share an edge. Then  $G$  contains a  $C_5$ , since every edge on the  $C_5$  must be in a  $C_4$ , there are three distinct substructures:*

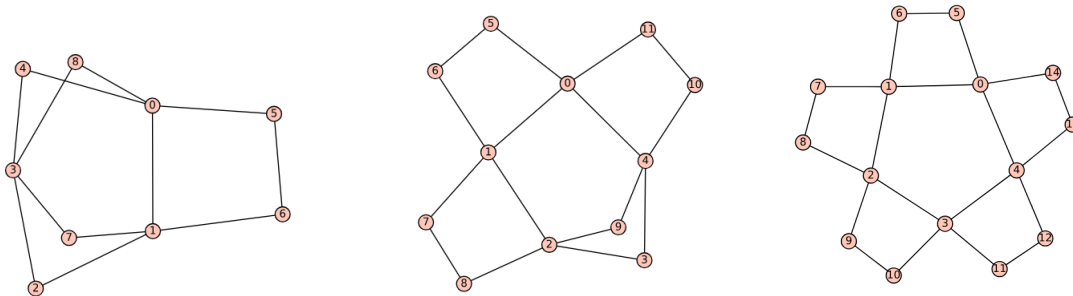


Figure 15: Type A, Type B, Type C

Next, we consider each case.

**Lemma 12.** *Let  $G$  be a 4-regular Ricci-flat graph, then  $G$  does not contain subgraph of “Type A.”*

**Lemma 13.** *Let  $G$  be a 4-regular Ricci-flat graph, then  $G$  does not contain subgraph of “Type B”.*

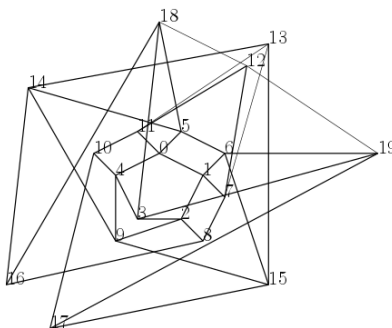


Figure 16: A Ricci-flat graph isomorphic to  $G_4$

Now we consider all graphs in which every  $C_5$  must be “Type C”. We have the following result.

**Theorem 11.** *Let  $G$  be a 4-regular Ricci-flat graph that contains a subgraph isomorphic to “Type C”. And  $G$  is isomorphic to the graph showing in Figure 17.*

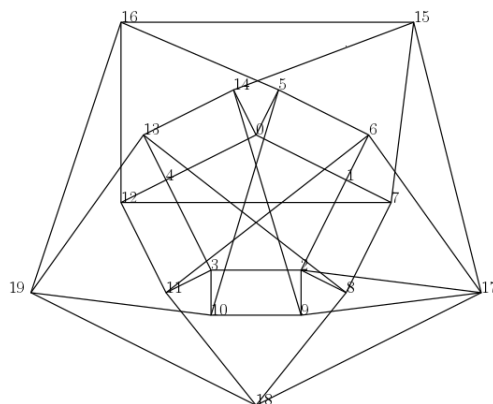


Figure 17: Ricci-flat graph

## References

- [1] David Bourne, David Cushing, Shiping Liu, Florentin Münch, and Norbert Peyerimhoff. Ollivier–ricci idleness functions of graphs. *SIAM Journal on Discrete Mathematics*, 32, 04 2017.

- [2] David Cushing, Riikka Kangaslampi, Yong Lin, Shiping Liu, Linyuan Lu, and Shing-Tung Yau. *Ricci-flat cubic graphs with girth five*. arXiv:1802.02982, 02 2018.
- [3] Weihua He, Jun Luo, Chao Yang, and Wei Yuan. *Ricci-flat graphs with girth four*. arXiv: 1807.07253, 07 2018.
- [4] Yong Lin, Linyuan Lu, and S T. Yau. *Ricci-flat graphs with girth at least five*. Communications in Analysis and Geometry, 22, 01 2013.
- [5] Yong Lin, Linyuan Lu, and Shing-Tung Yau. *Ricci curvature of graphs*. Tohoku Mathematical Journal - TOHOKU MATH J, 63, 12 2011.
- [6] Yong Lin and Shing-Tung Yau. *Ricci curvature and eigenvalue estimate on locally finite graphs*. Mathematical research letters, ISSN 1073-2780, Vol. 17, N<sup>o</sup> 2-3, 2010, pags. 343-356, 17, 03 2010.
- [7] Yann Ollivier. *Ricci curvature of markov chains on metric spaces*. Journal of Functional Analysis, 256:810–864, 02 2009.
- [8] F R. K. Chung and S.s.-T Yau. *Logarithmic harnack inequalities*. Mathematical Research Letters, 3:793–812, 01 1996.