

On modelling bicycle power for velodromes: Part II

Formulation for individual pursuits

Len Bos*, Michael A. Slawinski†, Raphaël A. Slawinski‡, Theodore Stanoev§

September 2, 2020

Abstract

We model the instantaneous power on a velodrome for individual pursuits, taking into account its straights, circular arcs, and connecting transition curves. The forces opposing the motion are air resistance, rolling resistance, lateral friction and drivetrain resistance. We examine the constant-cadence and constant-power cases, and discuss their results.

1 Introduction

This article is a continuation of research presented by Danek et al. (2020a), Danek et al. (2020b), Bos et al. (2020) and, in particular, by Slawinski et al. (2020). Herein, using a mathematical model, we examine the power required on a velodrome, for an individual pursuit. The opposing forces consist of air resistance, rolling resistance, lateral friction and drivetrain resistance. We consider a velodrome with its straights, circular arcs, and connecting transition curves, whose inclusion — while presenting a certain challenge, and neglected in previous studies (e.g., Slawinski et al., 2020) — increases the empirical adequacy of the model.

We begin this article by expressing mathematically the geometry of both the black line¹ and the inclination of the track. Our expressions are accurate analogies for the common geometry of modern 250-metre velodromes (Mehdi Kordi, *pers. comm.*, 2020). We proceed to formulate an expression for power, which we examine for both the constant-cadence and constant-power cases. We conclude by discussing the results.

2 Formulation

2.1 Black-line parameterization

To model the required power for an individual pursuit of a cyclist who follows the black line, in a constant aerodynamic position, we define this line by three parameters.

- L_s : the half-length of the straight

*Università di Verona, Italy, leonardpeter.bos@univr.it

†Memorial University of Newfoundland, Canada, msslawins@mac.com

‡Mount Royal University, Canada, rslawinski@mtroyal.ca

§Memorial University of Newfoundland, Canada, theodore.stanoev@gmail.com

¹The circumference along the inner edge of this five-centimetre-wide line — also known as the measurement line and the datum line — corresponds to the official length of the track.

- L_t : the length of the transition curve between the straight and the circular arc
- L_a : the half-length of the circular arc

The length of the track is $S = 4(L_s + L_t + L_a)$. In Figure 1, we show a quarter of a black line for $L_s = 19\text{ m}$, $L_t = 13.5\text{ m}$ and $L_a = 30\text{ m}$, which results in $S = 250\text{ m}$. This curve has continuous

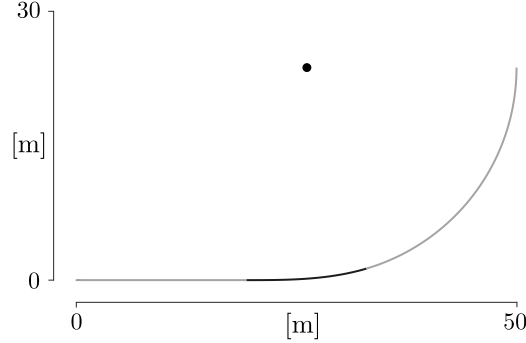


Figure 1: A quarter of the black line for a 250-metre track

derivative up to order two; it is a C^2 curve, whose curvature is continuous.

To formulate, in Cartesian coordinates, the curve shown in Figure 1, we consider the following.

- The straight,

$$y_1 = 0, \quad 0 \leq x \leq a,$$

shown in gray, where $a := L_s$.

- The transition, shown in black — following a standard design practice — we take to be an Euler spiral, which can be parameterized by Fresnel integrals,

$$x_2(t) = a + \sqrt{\frac{2}{A}} \int_0^{t\sqrt{\frac{A}{2}}} \cos(x^2) dx$$

and

$$y_2(t) = \sqrt{\frac{2}{A}} \int_0^{t\sqrt{\frac{A}{2}}} \sin(x^2) dx,$$

with $A > 0$ to be determined. Since the arclength differential, ds , is such that

$$\begin{aligned} ds &= \sqrt{x_2'(t)^2 + y_2'(t)^2} dt \\ &= \sqrt{\cos^2\left(\frac{At^2}{2}\right) + \sin^2\left(\frac{At^2}{2}\right)} dt \\ &= dt, \end{aligned}$$

we write the transition curve as

$$(x_2(s), y_2(s)), \quad 0 \leq s \leq b := L_t.$$

- The circular arc, shown in gray, whose centre is (c_1, c_2) and whose radius is R , with c_1 , c_2 and R to be determined. Since its arclength is specified to be $c := L_a$, we may parameterize the quarter circle by

$$x_3(\theta) = c_1 + R \cos(\theta) \quad (1)$$

and

$$y_3(\theta) = c_2 + R \sin(\theta), \quad (2)$$

where $-\theta_0 \leq \theta \leq 0$, for $\theta_0 := c/R$. The centre of the circle is shown as a black dot in Figure 1.

We wish to connect these three curve segments so that the resulting global curve is continuous along with its first and second derivatives. This ensures that the curvature of the track is also continuous.

To do so, let us consider the connection between the straight and the Euler spiral. Herein, $x_2(0) = a$ and $y_2(0) = 0$, so the spiral connects continuously to the end of the straight at $(a, 0)$. Also, at $(a, 0)$,

$$\frac{dy}{dx} = \frac{y_2'(0)}{x_2'(0)} = \frac{0}{1} = 0,$$

which matches the derivative of the straight line. Furthermore, the second derivatives match, since

$$\frac{d^2y}{dx^2} = \frac{y_2''(0)x_2'(0) - y_2'(0)x_2''(0)}{(x_2'(0))^2} = 0,$$

which follows, for any $A > 0$, from

$$x_2'(t) = \cos^2\left(\frac{At^2}{2}\right), \quad y_2'(t) = \sin^2\left(\frac{At^2}{2}\right) \quad (3)$$

and

$$x_2''(t) = -At \sin\left(\frac{At^2}{2}\right), \quad y_2''(t) = At \cos\left(\frac{At^2}{2}\right).$$

Let us consider the connection between the Euler spiral and the arc of the circle. In order that these connect continuously,

$$(x_2(b), y_2(b)) = (x_3(-\theta_0), y_3(-\theta_0)),$$

we require

$$x_2(b) = c_1 + R \cos(\theta_0) \iff c_1 = x_2(b) - R \cos\left(\frac{c}{R}\right) \quad (4)$$

and

$$y_2(b) = c_2 - R \sin(\theta_0) \iff c_2 = y_2(b) + R \sin\left(\frac{c}{R}\right). \quad (5)$$

For the tangents to connect continuously, we invoke expression (3) to write

$$(x_2'(b), y_2'(b)) = \left(\cos\left(\frac{Ab^2}{2}\right), \sin\left(\frac{Ab^2}{2}\right) \right).$$

Following expressions (1) and (2), we obtain

$$(x_3'(-\theta_0), y_3'(-\theta_0)) = (R \sin(\theta_0), R \cos(\theta_0)),$$

respectively. Matching the unit tangent vectors results in

$$\cos\left(\frac{Ab^2}{2}\right) = \sin\left(\frac{c}{R}\right), \quad \sin\left(\frac{Ab^2}{2}\right) = \cos\left(\frac{c}{R}\right). \quad (6)$$

For the second derivative, it is equivalent—and easier—to match the curvature. For the Euler spiral,

$$\begin{aligned}\kappa_2(s) &= \frac{x_2'(s)y_2''(s) - y_2'(s)x_2''(s)}{\left((x_2'(s))^2 + (y_2'(s))^2\right)^{\frac{3}{2}}} \\ &= A s \cos^2\left(\frac{A s^2}{2}\right) + A s \sin^2\left(\frac{A s^2}{2}\right) \\ &= A s,\end{aligned}$$

which is indeed the defining characteristic of an Euler spiral: the curvature grows linearly in the arclength. Hence, to match the curvature of the circle at the connection, we require

$$A b = \frac{1}{R} \iff A = \frac{1}{b R}.$$

Substituting this value of A in equations (6), we obtain

$$\begin{aligned}\cos\left(\frac{b}{2R}\right) &= \sin\left(\frac{c}{R}\right), \quad \sin\left(\frac{b}{2R}\right) = \cos\left(\frac{c}{R}\right) \\ \iff \frac{b}{2R} &= \frac{\pi}{2} - \frac{c}{R} \\ \iff R &= \frac{b + 2c}{\pi}.\end{aligned}$$

It follows that

$$A = \frac{1}{b R} = \frac{\pi}{b(b + 2c)};$$

hence, the continuity condition stated in expressions (4) and (5) determines the centre of the circle, (c_1, c_2) .

For the case shown in Figure 1, the numerical values are $A = 3.1661 \times 10^{-3} \text{ m}^{-2}$, $R = 23.3958 \text{ m}$, $c_1 = 25.7313 \text{ m}$ and $c_2 = 23.7194 \text{ m}$. The complete track—with its centre at the origin, $(0, 0)$ —is shown in Figure 2. The corresponding curvature is shown in Figure 3. Note that the curvature

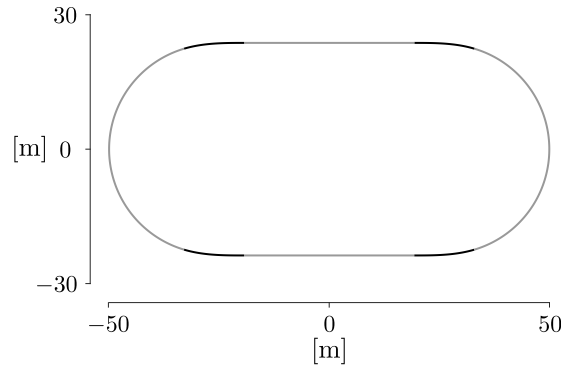


Figure 2: Black line of 250-metre track

transitions linearly from the constant value of straight, $\kappa = 0$, to the constant value of the circular arc, $\kappa = 1/R$.

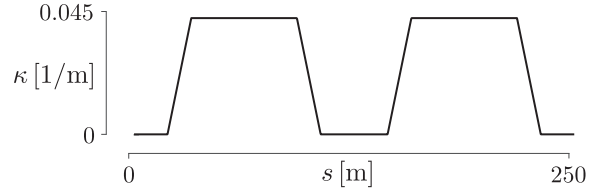


Figure 3: Curvature of the black line, κ , as a function of distance, s , with a linear transition between the zero curvature of the straight and the $1/R$ curvature of the circular arc

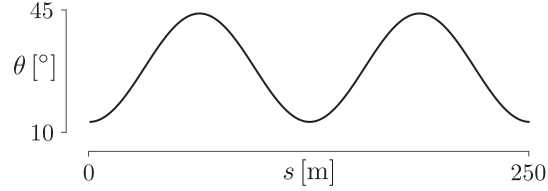


Figure 4: Track inclination, θ , as a function of the black-line distance, s

2.2 Track-inclination angle

There are many possibilities to model the track inclination angle. We choose a trigonometric formula in terms of arclength, which is a good analogy of an actual 250-metre velodrome. The minimum inclination of 13° corresponds to the midpoint of the straight, and the maximum of 44° to the apex of the circular arc. For a track of length S ,

$$\theta(s) = 28.5 - 15.5 \cos\left(\frac{4\pi}{S}s\right); \quad (7)$$

$s = 0$ refers to the midpoint of the lower straight, in Figure 2, and the track is oriented in the counterclockwise direction. Figure 4 shows this inclination for $S = 250$ m.

3 Instantaneous power

A mathematical model to account for the power required to propel a bicycle is based on (e.g., Danek et al., 2020a)

$$P = F V,$$

where F stands for the magnitude of forces opposing the motion and V for speed. Herein, we model the rider as undergoing instantaneous circular motion, in rotational equilibrium about the line of contact of the tires with the ground. Following Slawinski et al. (2020, Section 2), in accordance with

Figure 5, along the black line of a velodrome, in windless conditions,

$$P = \frac{1}{1-\lambda} \left\{ \right. \quad (8a)$$

$$\left(C_{\text{rr}} \underbrace{\overbrace{m g (\sin \theta \tan \vartheta + \cos \theta)}^{F_g}}_N \cos \theta + C_{\text{sr}} \underbrace{\left| \overbrace{m g \frac{\sin(\theta - \vartheta)}{\cos \vartheta}}^{F_g} \right|}_{F_f} \sin \theta \right) v \quad (8b)$$

$$\left. + \frac{1}{2} C_d A \rho V^3 \right\}, \quad (8c)$$

where m is the mass of the cyclist and the bicycle, g is the acceleration due to gravity, θ is the track-inclination angle, ϑ is the bicycle-cyclist lean angle, C_{rr} is the rolling-resistance coefficient, C_{sr} is the coefficient of the lateral friction, $C_d A$ is the air-resistance coefficient, ρ is the air density, λ is the drivetrain-resistance coefficient. Herein, v is the speed at which the contact point of the rotating wheels moves along the track, which is equivalent to the black-line speed (Danek et al., 2020a, Appendix B), and V is the centre-of-mass speed. Since the lateral friction is a dissipative force, it does negative work, and the work done against it — as well as the power — are positive. For this reason, in expression (8b), we consider the magnitude, $|\cdot|$.

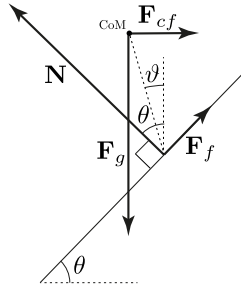


Figure 5: Force diagram

To gain an insight into expression (8), let us consider a few special cases. If $\theta = \vartheta = 0$,

$$P = \underbrace{\frac{C_{\text{rr}} m g + \frac{1}{2} C_d A \rho V^2}{1 - \lambda}}_F V, \quad (9)$$

where — as expected for a flat, straight road — $v \equiv V$. Also, on a velodrome, along the straights, $\vartheta = 0$ and expression (8b) becomes

$$(C_{\text{rr}} m g \cos^2 \theta + C_{\text{sr}} m g \sin^2 \theta) V.$$

If, along the curves, $\vartheta = \theta$, the second summand of expression (8b) is zero, as expected.

Let us return to expression (8). Therein, θ is given by expression (7). The lean angle is (Slawinski et al., 2020, Appendix A)

$$\vartheta = \arctan \frac{V^2}{g r_{\text{CoM}}}, \quad (10)$$

where r_{CoM} is the centre-of-mass radius, and — along the curves, at any instant — the centre-of-mass speed is

$$V = v \frac{\overbrace{(R - h \sin \vartheta)}^{r_{\text{CoM}}}}{R} = v \left(1 - \frac{h \sin \vartheta}{R} \right), \quad (11)$$

where R is the radius discussed in Section 2.1 and h is the centre-of-mass height. Along the straights, the black-line speed is equivalent to the centre-of-mass speed, $v = V$. As expected, $V = v$ if $h = 0$, $\vartheta = 0$ or $R = \infty$.

4 Numerical examples

4.1 Introduction

For expressions (8), (10) and (11), we consider a velodrome discussed in Section 2, to let $R = 23.3958 \text{ m}$. For the bicycle-cyclist system, we assume, $h = 1.2 \text{ m}$, $m = 84 \text{ kg}$, $C_d A = 0.2 \text{ m}^2$, $C_{rr} = 0.002$, $C_{sr} = 0.003$ and $\lambda = 0.02$. For the external conditions, $g = 9.81 \text{ m/s}^2$ and $\rho = 1.225 \text{ kg/m}^3$.

4.2 Constant cadence

Let the black-line speed be constant, $v = 16.7 \text{ m/s}$, which is tantamount to the constancy of cadence.

The lean angle and the centre-of-mass speed, as functions of distance — obtained by numerically and simultaneously solving equations (10) and (11), at each point of a discretized model of the track — are shown in Figures 6 and 7, respectively. The average centre-of-mass speed, per lap, is $\bar{V} = 16.3329 \text{ m/s}$.

The power — obtained by evaluating expression (8), at each point along the track — is shown in Figure 8. The average power, per lap, is $\bar{P} = 580.5941 \text{ W}$. Since the black-line speed is constant, this is both the arclength average and the temporal average.

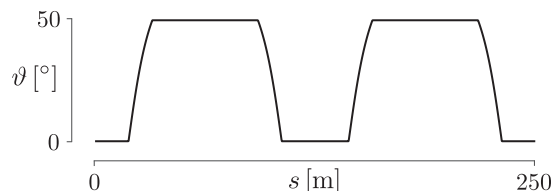


Figure 6: Lean angle, ϑ , as a function of the black-line distance, s , for constant cadence

Examining Figure 8, we see the decrease of power required to maintain the same black-line speed along the curve. This is due to both the decrease of the centre-of-mass speed, which results in a smaller value of term (8c), and the decrease of a difference between the track-inclination angle and the lean angle, shown in Figure 9, which results in a smaller value of the second summand of term (8b).

The argument presented in the previous paragraph leads to the following conjecture. The most efficient track is circular with $\theta = \vartheta$, which would correspond to the dashed line in Figure 9. However, this is not possible, since — according to the regulations of the Union Cycliste Internationale — the

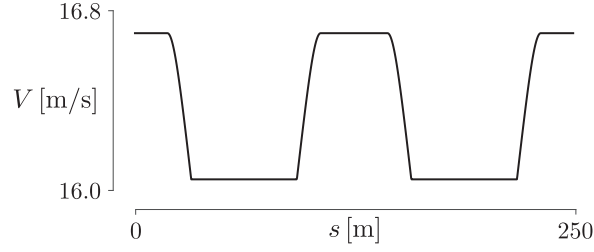


Figure 7: Centre-of-mass speed, V , as a function of the black-line distance, s , for constant cadence

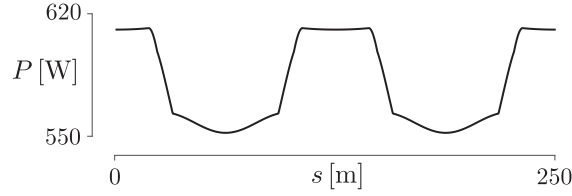


Figure 8: Power, P , as a function of the black-line distance, s , for constant cadence

inner edge of the track shall consist of two curves connected by two parallel straight lines. Hence, the optimization is constrained by the length of the straights.

Examining Figure 10, where—in accordance with expression (8)—we distinguish among the power used to overcome the air resistance, the rolling resistance and the lateral friction, we can quantify their effects. The first has the most effect; the last has the least effect, and is zero at points for which $\theta = \vartheta$, which corresponds to the zero crossings in Figure 9.

Let us comment on potential simplifications of a model. If we assume a straight flat course—which is tantamount to neglecting the lean and inclination angles—we obtain, following expression (9), $\bar{P} \approx 610$ W. If we consider an oval track but ignore the transitions and assume that the straights are flat and the semicircular segments, whose radius is 23 m, have a constant inclination of 43° , we obtain (Slawinski et al., 2020, expression (13)) $\bar{P} \approx 563$ W. In both cases, there is a significant discrepancy with the power obtained from the model discussed herein, $\bar{P} = 573.6080$ W.

To conclude this section, let us calculate the work per lap corresponding to the model discussed herein. The work performed during a time interval, $t_2 - t_1$, is

$$W = \int_{t_1}^{t_2} P dt = \frac{1}{v} \int_{s_1}^{s_2} \underbrace{P v}_{ds} dt,$$

where the black-line speed, v , is constant and, hence, ds is an arclength distance along the black line. Considering the average power per lap, we write

$$W = \underbrace{\frac{S}{v}}_{t_\odot} \underbrace{\frac{\int_0^S P ds}{S}}_{\bar{P}} = \bar{P} t_\odot.$$

Given $\bar{P} = 580.5941$ W and $t_\odot = 14.9701$ s, we obtain $W = 8691.5284$ J.

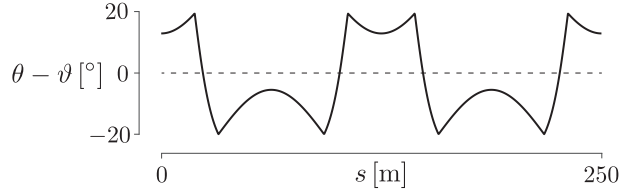


Figure 9: $\theta - \vartheta$, as a function of the black-line distance, s , for constant cadence

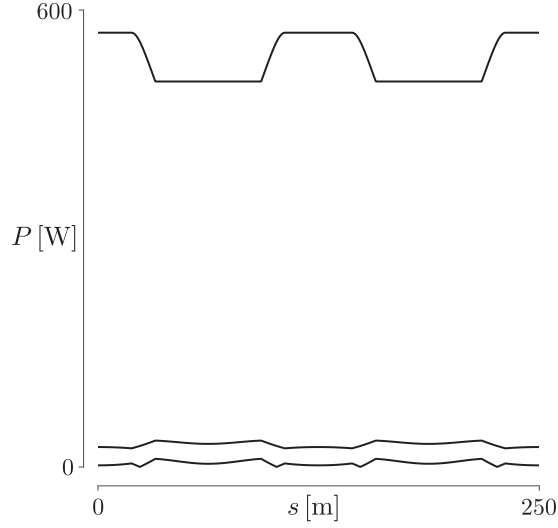


Figure 10: Power to overcome air resistance, rolling resistance and lateral friction

4.3 Constant power

Let us solve numerically the system of nonlinear equations given by expressions (8), (10) and (11), to find the lean angle as well as both speeds, v and V , at each point of a discretized model of the track, under the assumption of constant power. As in Section 4.2, we let $R = 23.3958$ m, $h = 1.2$ m, $m = 84$ kg, $C_d A = 0.2$ m², $C_{rr} = 0.002$, $C_{sr} = 0.003$, $\lambda = 0.02$, $g = 9.81$ m/s² and $\rho = 1.225$ kg/m³. However, in contrast to Section 4.2, we allow the black-line speed to vary, and set the power to be the average obtained in that section, $P = 580.5941$ W.

Stating expression (11), as

$$v = V \frac{R}{R - h \sin \vartheta},$$

we write expression (8) as

$$P = \frac{V}{1 - \lambda} \left\{ \left(C_{rr} m g (\sin \theta \tan \vartheta + \cos \theta) \cos \theta + C_{sr} \left| m g \frac{\sin(\theta - \vartheta)}{\cos \vartheta} \right| \sin \theta \right) \frac{R}{R - h \sin \vartheta} + \frac{1}{2} C_d A \rho V^2 \right\}, \quad (12)$$

where, in agreement with expression (10),

$$\vartheta = \arctan \frac{V^2}{g(R - h \sin \vartheta)},$$

which—given g , R and h —can be solved for V as a function of ϑ . Inserting that solution in expression (12), we obtain an equation whose only unknown is ϑ .

The difference of the lean angle—between the case of a constant cadence and a constant power is so small that there is no need to plot it; Figure 6 illustrates it accurately. The same is true for the difference between the track-inclination angle and the lean angle, illustrated in Figure 9, as well as for the dominant effect of the air resistance, illustrated in Figure 10.

The resulting values of V are shown in Figure 11. As expected, in view of the dominant effect of the air resistance, a constancy of P entails a nearly constant value of V ; note the difference of vertical scale between Figures 7 and 11. The corresponding values of v , in accordance with expression (11), are shown in Figure 12. The averages are $\bar{V} = 16.3316$ m/s and $\bar{v} = 16.7071$ m/s. These averages are similar to the case of the constant black-line speed averages. Notably, maintaining a constant cadence or a constant power results in nearly the same laptime, namely, 14.9701 s and 14.9670 s, respectively.

To conclude this section, let us calculate the corresponding work per lap. The work performed during a time interval, $t_2 - t_1$, is

$$W = \int_{t_1}^{t_2} P dt = P \int_{t_1}^{t_2} dt = P \underbrace{(t_2 - t_1)}_{t_\odot} = P t_\odot,$$

where, for the second equality sign, we use the constancy of P ; also, we let the time interval to be a laptime. Thus, given $\bar{P} = 580.5941$ W and $t_\odot = 14.9670$ s, we obtain $W = 8689.7680$ J.

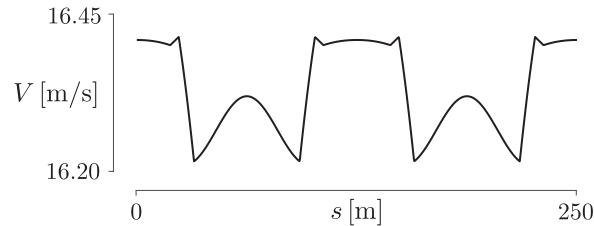


Figure 11: Centre-of-mass speed, V , as a function of the black-line distance, s , for constant power

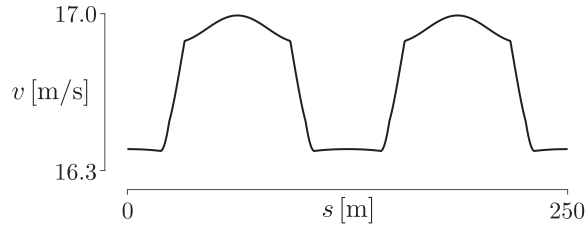


Figure 12: Black-line speed, v , as a function of the black-line distance, s , for constant power

5 Discussion and conclusions

The mathematical model presented in this article offers the basis for a quantitative study of individual pursuits. The model can be used to predict or retrodict the lap times, from the measurements of power, or to estimate the power from the recorded times. Comparisons of such predictions or retrodictions with the measurements of time, speed, cadence and power along the track offer an insight into the empirical adequacy of a model. Given a satisfactory adequacy and appropriate measurements, the model lends itself to estimating the rolling-resistance, lateral-friction, air-resistance and drivetrain-resistance coefficients.

Presented results allow us to comment on aspects of the velodrome design. As illustrated in Figures 6–8, 11, 12, the transitions—between the straights and the circular arcs—are not smooth for the lean angles, speeds and powers. It might suggest that a commonly used Euler spiral, illustrated in Figure 3, is not the optimal transition curve. Perhaps, the choice of a transition curve should consider such phenomena as the jolt, which is the temporal rate of change of acceleration. It might also suggest the necessity for the lengthening of the transition curve.

Furthermore, an optimal velodrome design would strive to minimize the distance between the zero line and the curve in Figure 9, which is tantamount to optimizing the track inclination to accommodate the lean angle of a rider. The smaller the distance, the smaller the second summand in term (8b). As the distance tends to zero, so does the summand.

These considerations are to be explored more thoroughly in a future work.

Acknowledgements

We wish to acknowledge Mehdi Kordi, for insights into the track geometry, Elena Patarini, for her graphic support, and Favero Electronics for inspiring this study by their technological advances with their latest model of Assioma Duo power meters.

Conflict of Interest

The authors declare that they have no conflict of interest.

References

- Bos, L., Slawinski, M. A., and Stanoev, T. (2020). On maximizing VAM for a given power: Slope, cadence, force and gear-ratio considerations. *arXiv: 2006.15816 [physics.pop-ph]*.
- Danek, T., Slawinski, M. A., and Stanoev, T. (2020a). On modelling bicycle power-meter measurements: Part I. Estimating effects of air, rolling and drivetrain resistance. *arXiv: 2005.04229 [physics.pop-ph]*.
- Danek, T., Slawinski, M. A., and Stanoev, T. (2020b). On modelling bicycle power-meter measurements: Part II. Relations between rates of change of model quantities. *arXiv: 2005.04480 [physics.pop-ph]*.
- Slawinski, M. A., Slawinski, R., and Stanoev, T. (2020). On modelling bicycle power-meter measurements for velodromes: Motion of center of mass for individual pursuits. *arXiv: 2005.04691 [physics.pop-ph]*.