

Extremal H -free planar graphs

Yongxin Lan and Yongtang Shi
 Center for Combinatorics and LPMC
 Nankai University, Tianjin 300071, China
 and

Zi-Xia Song*
 Department of Mathematics
 University of Central Florida, Orlando, FL 32816, USA

August 7, 2018

Abstract

Given a graph H , a graph is H -free if it does not contain H as a subgraph. We continue to study the topic of “extremal” planar graphs, that is, how many edges can an H -free planar graph on n vertices have? We define $ex_{\mathcal{P}}(n, H)$ to be the maximum number of edges in an H -free planar graph on n vertices. We first obtain several sufficient conditions on H which yield $ex_{\mathcal{P}}(n, H) = 3n - 6$ for all $n \geq |V(H)|$. We discover that the chromatic number of H does not play a role, as in the celebrated Erdős-Stone Theorem. We then completely determine $ex_{\mathcal{P}}(n, H)$ when H is a wheel or a star. Finally, we examine the case when H is a (t, r) -fan, that is, H is isomorphic to $K_1 + tK_{r-1}$, where $t \geq 2$ and $r \geq 3$ are integers. However, determining $ex_{\mathcal{P}}(n, H)$, when H is a planar subcubic graph, remains wide open.

Key words. Turán number, extremal planar graph, planar triangulation

AMS subject classifications. 05C10, 05C35

1 Introduction

All graphs considered in this paper are finite and simple. We use K_t , C_t and P_t to denote the complete graph, cycle, and path on t vertices, respectively. Given a graph G , we will use $V(G)$ to denote the vertex set, $E(G)$ the edge set, $|G|$ the number of vertices, $e(G)$ the number of edges, $\delta(G)$ the minimum degree, $\Delta(G)$ the maximum degree. For a vertex $v \in V(G)$, we will use $N_G(v)$ to denote the set of vertices in G which are adjacent to v . Let $d_G(v) = |N_G(v)|$ denote the degree of the vertex v in G and $N_G[v] = N_G(v) \cup \{v\}$. A vertex is a k -vertex in G if it has degree k . We use $n_k(G)$ to denote the number of k -vertices in G . For any set $S \subset V(G)$, the subgraph of G induced on S , denoted $G[S]$, is the graph with vertex set S and edge set $\{xy \in E(G) : x, y \in S\}$. We denote by $G \setminus S$ the subgraph of G induced on $V(G) \setminus S$. If $S = \{v\}$, then we simply write $G \setminus v$. For any

*Corresponding author.

E-mail addresses: yxlan0@126.com; shi@nankai.edu.cn; Zixia.Song@ucf.edu

two disjoint sets A and B of $V(G)$, we use $e_G(A, B)$ to denote the number of edges between A and B in G . The *join* $G + H$ (resp. *union* $G \cup H$) of two vertex-disjoint graphs G and H is the graph having vertex set $V(G) \cup V(H)$ and edge set $E(G) \cup E(H) \cup \{xy \mid x \in V(G), y \in V(H)\}$ (resp. $E(G) \cup E(H)$). For a positive integer t , we use tG to denote disjoint union of t copies of a graph G . Given two isomorphic graphs G and H , we may (with a slight but common abuse of notation) write $G = H$. For any positive integer k , let $[k] := \{1, 2, \dots, k\}$.

Given a graph H , a graph is H -free if it does not contain H as a subgraph. One of the best known results in extremal graph theory is Turán's Theorem [15], which gives the maximum number of edges that a K_t -free graph on n vertices can have. The celebrated Erdős-Stone Theorem [7] then extends this to the case when K_t is replaced by an arbitrary graph H with at least one edge, showing that the maximum number of edges possible is $(1 + o(1))\binom{n}{2} \left(\frac{\chi(H)-2}{\chi(H)-1} \right)$, where $\chi(H)$ denotes the chromatic number of H . This latter result has been called the "fundamental theorem of extremal graph theory" [1]. Turán-type problems when host graphs are hypergraphs are notoriously difficult. A large quantity of work in this area has been carried out in determining the maximum number of edges in a k -uniform hypergraph on n vertices without containing k -uniform linear paths and cycles (see, for example, [9, 10, 12]). Surveys on Turán-type problems of graphs and hypergraphs can be found in [8, 11].

In this paper, we continue to study the topic of "extremal" planar graphs, that is, how many edges can an H -free planar graph on n vertices have? We define $ex_{\mathcal{P}}(n, H)$ to be the maximum number of edges in an H -free planar graph on n vertices. Dowden [3] initiated the study of $ex_{\mathcal{P}}(n, H)$ and proved the following results, where each bound is tight.

Theorem 1.1 ([3]) *Let n be a positive integer.*

- (a) $ex_{\mathcal{P}}(n, C_4) \leq 15(n - 2)/7$ for all $n \geq 4$.
- (b) $ex_{\mathcal{P}}(n, C_5) \leq (12n - 33)/5$ for all $n \geq 11$.

Let Θ_4 and Θ_5 be obtained from C_4 and C_5 , respectively, by adding an additional edge joining two non-consecutive vertices. The present authors [13] studied $ex_{\mathcal{P}}(n, H)$ when $H \in \{\Theta_4, \Theta_5, C_6\}$ and when H is a path on at most 9 vertices. Results from [13] are summarized below.

Theorem 1.2 ([13]) *Let n be a positive integer.*

- (a) $ex_{\mathcal{P}}(n, \Theta_4) \leq 12(n - 2)/5$ for all $n \geq 4$, with equality when $n \equiv 12 \pmod{20}$.
- (b) $ex_{\mathcal{P}}(n, \Theta_5) \leq 5(n - 2)/2$ for all $n \geq 5$, with equality when $n \equiv 50 \pmod{120}$.
- (c) $ex_{\mathcal{P}}(n, C_6) \leq 18(n - 2)/7$ for all $n \geq 6$.
- (d) $ex_{\mathcal{P}}(n, P_9) \leq \max\{9n/4, (5n - 8)/2\}$.

It seems quite non-trivial to determine $ex_{\mathcal{P}}(n, C_t)$ for all $t \geq 7$. In this paper, we first investigate planar graphs H satisfying $ex_{\mathcal{P}}(n, H) = 3n - 6$ for all $n \geq |H|$. This partially answers a question of Dowden [3]. As observed in [3], for all $n \geq 6$, the planar triangulation $2K_1 + C_{n-2}$ is K_4 -free.

Hence, $ex_{\mathcal{P}}(n, H) = 3n - 6$ for all graphs H which contains K_4 as a subgraph and $n \geq \max\{|H|, 6\}$. In particular, $ex_{\mathcal{P}}(n, K_5^-) = 3n - 6$ for all $n \geq 6$, where K_5^- denotes the graph obtained from K_5 by deleting one edge. Proposition 1.3 below describes several sufficient conditions on K_4 -free planar graphs H such that $ex_{\mathcal{P}}(n, H) = 3n - 6$ for all $n \geq |H|$.

Proposition 1.3 *Let H be a K_4 -free planar graph and let $n \geq |H|$ be an integer. Then $ex_{\mathcal{P}}(n, H) = 3n - 6$ if one of the following holds.*

- (a) $\chi(H) = 4$ and $n \geq |H| + 2$.
- (b) $\Delta(H) \geq 7$.
- (c) $\Delta(H) = 6$ and either $n_6(H) + n_5(H) \geq 2$ or $n_6(H) + n_5(H) = 1$ and $n_4(H) \geq 5$.
- (d) $\Delta(H) = 5$ and either H has at least three 5-vertices or H has exactly two adjacent 5-vertices.
- (e) $\Delta(H) = 4$ and $n_4(H) \geq 7$.
- (f) H is 3-regular with $|H| \geq 9$ or H has at least three vertex-disjoint cycles or H has exactly one vertex u of degree $\Delta(H) \in \{4, 5, 6\}$ such that $\Delta(H[N(u)]) \geq 3$.
- (g) $\delta(H) \geq 4$ or H has exactly one vertex of degree at most 3.

Proposition 1.3 implies that $ex_{\mathcal{P}}(n, H) = 3n - 6$ for all H with $n \geq |H| + 2$ and either $\chi(H) = 4$ or $\chi(H) = 3$ and $\Delta(H) \geq 7$. Note that $\Theta_4 = K_4^-$, and both K_4^- and $K_1 + 2K_2$ have chromatic number 3. Theorem 1.2(a) and Theorem 1.5 (see below) then demonstrate that the chromatic number of H does not play a role, as in the Erdős-Stone Theorem.

By Proposition 1.3, $ex_{\mathcal{P}}(n, H)$ remains unknown for K_4 -free planar graphs H with $\Delta(H) = 6$, $n_6(H) + n_5(H) = 1$ and $n_4(H) \leq 4$; or $\Delta(H) = 5$ and $n_5(H) \leq 2$ (and the two 5-vertices are not adjacent when $n_5(H) = 2$); or $\Delta(H) = 4$ and $n_4(H) \leq 6$; or $\Delta(H) \leq 3$. In particular, by Proposition 1.3(f), $ex_{\mathcal{P}}(n, H)$ remains unknown for K_4 -free planar graphs H with exactly one vertex, say u , of degree $\Delta(H) \leq 6$ and $\Delta(H[N(u)]) \leq 2$. It seems non-trivial to determine $ex_{\mathcal{P}}(n, H)$ for all such H . We next study $ex_{\mathcal{P}}(n, W_k)$, where $W_k := K_1 + C_k$ is a wheel on $k + 1 \geq 5$ vertices. Unlike the classic Turán number of W_k (see [4, 5] for more information), the planar Turán number of W_k can be completely determined. We establish this in Theorem 1.4.

Theorem 1.4 *Let n, k be integers with $n \geq k + 1 \geq 5$. Then*

$$ex_{\mathcal{P}}(n, W_k) = \begin{cases} 3n - 6 & \text{if } k \geq 6, \text{ or } k = 5 \text{ and } n \neq 7, \text{ or } k = 4 \text{ and } n \geq 12 \\ 3n - 7 & \text{if } k = 4 \text{ and } n \in \{5, 6\}, \text{ or } k = 5 \text{ and } n = 7 \\ 3n - 8 & \text{if } k = 4 \text{ and } 7 \leq n \leq 11. \end{cases}$$

A graph is a (t, r) -fan if it is isomorphic to $K_1 + tK_{r-1}$, where $t \geq 2$ and $r \geq 2$ are integers. The classical Turán number of (t, r) -fan, namely, $ex(n, K_1 + tK_{r-1})$, has also been studied when n is sufficiently large (see [2, 6] for more information). We next study $ex_{\mathcal{P}}(n, H)$ when H is a K_4 -free (t, r) -fan, in particular, when $H \in \{K_1 + 2K_2, K_{1,t}, K_1 + 3K_2\}$. Theorem 1.5 below establishes

a sharp upper bound for $ex_{\mathcal{P}}(n, K_1 + 2K_2)$, and Theorem 1.6 completely determines the value of $ex_{\mathcal{P}}(n, K_{1,t})$ for all $t \geq 3$. However, the upper bound for $ex_{\mathcal{P}}(n, K_1 + 3K_2)$ when $n \geq 15$ in Theorem 1.7 is not tight.

Theorem 1.5 *Let $n \geq 5$ be an integer. Then*

$$2n - 3 \leq ex_{\mathcal{P}}(n, K_1 + 2K_2) \leq \frac{19n}{8} - 4.$$

Furthermore, $ex_{\mathcal{P}}(n, K_1 + 2K_2) = \frac{19n}{8} - 4$ if and only if n is divisible by 8.

Theorem 1.6 *Let n, t be integers with $n \geq t + 1 \geq 4$. Then*

$$ex_{\mathcal{P}}(n, K_{1,t}) = \begin{cases} 3n - 6 & \text{if } t \geq 7, \text{ or } t = 6 \text{ and } n \in \{7, 8, 9, 10, 12\} \\ 3n - 7 & \text{if } t = 6 \text{ and } n = 11 \\ 3n - 8 & \text{if } t = 6 \text{ and } n \in \{13, 14\}, \text{ or } t = 5 \text{ and } n = 7 \\ \lfloor \frac{(t-1)n}{2} \rfloor & \text{if } t \in \{3, 4\}, \text{ or } t = 5 \text{ and } n \neq 7, \text{ or } t = 6 \text{ and } n \geq 15. \end{cases}$$

Theorem 1.7 *Let $n \geq 7$ be an integer. Then*

$$\lfloor \frac{5n}{2} \rfloor \leq ex_{\mathcal{P}}(n, K_1 + 3K_2) < \frac{17n}{6} - 4$$

for all $n \geq 15$ and

$$ex_{\mathcal{P}}(n, K_1 + 3K_2) = \begin{cases} 3n - 6 & \text{if } n \in \{7, 8, 9, 10, 12\} \\ 3n - 7 & \text{if } n = 11 \\ 3n - 8 & \text{if } n \in \{13, 14\}. \end{cases}$$

We need to introduce more notation. Given a plane graph G and an integer $i \geq 3$, an i -face in G is a face of order i . Let f_i denote the number of i -faces in G . Let T_n denote a plane triangulation on $n \geq 3$ vertices, and let T_n^- be obtained from T_n with one edge removed. For every integer $n \geq 5$, let O_n denote the unique outerplane graph with $2n - 3$ edges, maximum degree 4, and the outer face of order n ; let O'_n be a different drawing of O_n with one unique inner face of order n ; and finally, let O_n^* be the planar triangulation obtained from O_n and O'_n by identifying the outer face of O_n with the unique n -face of O'_n in such a way that O_n^* is a simple graph. The proof of Proposition 1.3 relies heavily on the fact that O_n^* , $K_1 + O_{n-1}$ and $2K_1 + C_{n-2}$ are planar triangulations.

Finally, we shall make use of the following lemma in the proof of Theorem 1.6 and Theorem 1.7.

Lemma 1.8 ([14]) *There does not exist a 4-regular planar graph on 7 vertices, or a 5-regular planar graph on 14 vertices, or a planar graph on $n \in \{11, 13\}$ vertices with exactly one vertex of degree 4 and $n - 1$ vertices of degree 5.*

2 Proof of Proposition 1.3

Let H and n be given as in the statement. To prove (a), assume $\chi(H) = 4$ and $n \geq |H| + 2$. Since the planar triangulation $2K_1 + C_{n-2}$ has no subgraph on $|H|$ vertices with chromatic number 4, we see that $2K_1 + C_{n-2}$ is H -free. Hence, $ex_{\mathcal{P}}(n, H) = 3n - 6$ when $\chi(H) = 4$ and $n \geq |H| + 2$.

To prove (b), assume that $\Delta(H) \geq 7$. Then $n \geq |H| \geq 8$, and the planar triangulation O_n^* is H -free because $\Delta(O_n^*) = 6$. Hence, $ex_{\mathcal{P}}(n, H) = 3n - 6$ for all $n \geq |H|$.

To prove (c), assume $\Delta(H) = 6$. Then $n \geq |H| \geq 7$. Assume first $n_6(H) + n_5(H) \geq 2$. Let $x, y \in V(H)$ be such that $d_H(x) = 6$ and $d_H(y) \geq 5$. Then the planar triangulation $K_1 + O_{n-1}$ is H -free when $xy \notin E(H)$, and the planar triangulation $2K_1 + C_{n-2}$ is H -free when $xy \in E(H)$. Hence, $ex_{\mathcal{P}}(n, H) = 3n - 6$ when $n_6(H) + n_5(H) \geq 2$. Next assume that $n_6(H) + n_5(H) = 1$ and $n_4(H) \geq 5$. Then $n_5(H) = 0$. Let $S \subset V(H)$ be the set of all vertices v such that $d_H(v) = 6$ or $d_H(v) = 4$. Then the planar triangulation $2K_1 + C_{n-2}$ is H -free when $n_4(H) \geq 6$ or $H[S] \neq 2K_1 + P_4$, and the planar triangulation O_n^* is H -free when $H[S] = 2K_1 + P_4$. It follows that $ex_{\mathcal{P}}(n, H) = 3n - 6$ for all $n \geq |H|$. This proves (c).

To prove (d), assume $\Delta(H) = 5$ and $n_5(H) \geq 2$. Then $n \geq |H| \geq 6$. Let u, v be two distinct 5-vertices in H . Then either $n_5(H) \geq 3$ or $n_5(H) = 2$ with $uv \in E(H)$. Note that the planar triangulation $2K_1 + C_{n-2}$ has exactly two non-adjacent vertices of degree at least 5 when $n \geq 7$ and has maximum degree 4 when $n = 6$. Hence, $2K_1 + C_{n-2}$ is H -free, and so $ex_{\mathcal{P}}(n, H) = 3n - 6$ for all $n \geq |H|$. This proves (d).

To prove (e) and (f). Assume $\Delta(H) = 4$ and $n_4(H) \geq 7$, or H is 3-regular with $|H| \geq 9$, or H has at least three vertex-disjoint cycles, or H has exactly one vertex u of degree $\Delta(H) \in \{4, 5, 6\}$ such that $\Delta(H[N(u)]) \geq 3$. Then the planar triangulation $2K_1 + C_{n-2}$ is H -free. Hence, $ex_{\mathcal{P}}(n, H) = 3n - 6$ for all $n \geq |H|$.

It remains to prove (g). Assume $\delta(H) \geq 4$ or H has exactly one vertex of degree at most 3. Then $n \geq |H| \geq 5$. Note that the planar triangulation $K_1 + O_{n-1}$ is 3-degenerate and every subgraph of $K_1 + O_{n-1}$ has at least two vertices of degree at most 3, because every subgraph of O_{n-1} has at least two vertices of degree at most 2. Hence, $K_1 + O_{n-1}$ is H -free, and so $ex_{\mathcal{P}}(n, H) = 3n - 6$ for all $n \geq |H|$. This completes the proof of Proposition 1.3. \blacksquare

3 Proof of Theorem 1.4

Let n, k be given as in the statement. Assume $k \geq 7$. By Proposition 1.3(b), $ex_{\mathcal{P}}(n, W_k) = 3n - 6$ for all $n \geq k + 1$. Assume next $k \in \{5, 6\}$. Since the planar triangulation $2K_1 + C_{n-2}$ is W_k -free when $n \geq k + 3$ or $n = k + 1$, we see that $ex_{\mathcal{P}}(n, W_k) = 3n - 6$ when $n \geq k + 3$ or $n = k + 1$. We next determine $ex_{\mathcal{P}}(n, W_k)$ when $n = k + 2$. For $k = 6$ and $n = 8$, the plane triangulation on 8 vertices depicted in Figure 1(a) is W_6 -free and so $ex_{\mathcal{P}}(n, W_6) = 3n - 6$ when $n = 8$. For $k = 5$ and $n = 7$, note that the plane graph with 7 vertices and 14 edges given in Figure 1(b) is W_5 -free.

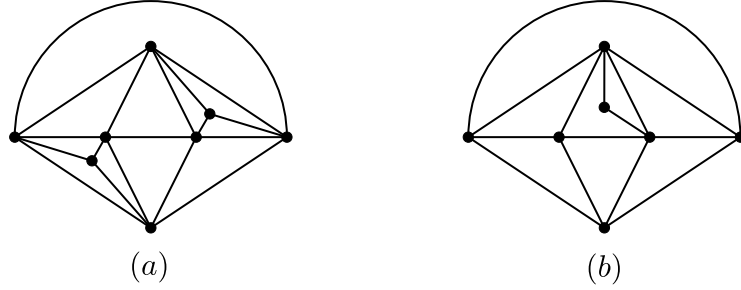


Figure 1: W_k -free plane graphs with $n = k + 2$ vertices and $3n - 12 + k$ edges, where $k \in \{5, 6\}$.

Thus, $ex_p(7, W_5) \geq 3 \cdot 7 - 6 - 1 = 14$. On the other hand, all plane triangulations on 7 vertices are depicted in Figure 2, each containing a copy of W_5 . Hence, $ex_p(n, W_5) = 3n - 7$ when $n = 7$.

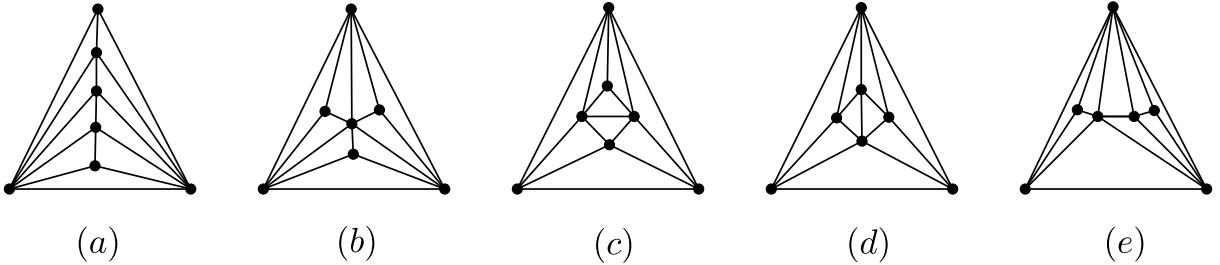


Figure 2: All plane triangulations on 7 vertices. Furthermore, each T_7 has a copy of W_4 and W_5 , and each T_7^- has a copy of W_4 .

It remains to consider the case when $k = 4$. To show $ex_p(n, W_4) = 3n - 6$ for all $n \geq 12$, assume first that $n = 5t + 2$ for some integer $t \geq 2$. Let L_t be a plane triangulation on $n = 5t + 2$ vertices constructed as follows: for each $i \in [t]$, let C^i be a cycle with vertices $u_{i,1}, u_{i,2}, \dots, u_{i,5}$ in order. Let L_t be the plane triangulation obtained from disjoint union of C^1, \dots, C^t by adding edges $u_{i,j}u_{i+1,j}$ and $u_{i,j}u_{i+1,j+1}$ for all $i \in [t-1]$ and $j \in [5]$, where all arithmetic on the index $j + 1$ here is done modulo 5, and finally adding two new non-adjacent vertices u and v such that u is adjacent to all vertices of C^1 and v is adjacent to all vertices of C^t . The graph L_t when $t = 3$ is depicted in Figure 3. It is worth noting that L_t is K_4 -free, $d_{L_t}(u) = d_{L_t}(v) = 5$, $d_{L_t}(u_{1,j}) = d_{L_t}(u_{t,j}) = 5$, $d_{L_t}(u_{i,j}) = 6$ for $2 \leq i \leq t - 1$ and $j \in [5]$. Furthermore, the subgraph induced by the neighborhood of each vertex in L_t is isomorphic to either C_5 or C_6 . Hence, L_t is W_4 -free and so $ex_p(n, W_4) = 3n - 6$ when $n = 5t + 2$ for some integer $t \geq 2$.

Next assume that $n = 5t + 2 + i$ for some $i \in [4]$, where $t \geq 2$ is an integer. Note that the plane triangulation L_t on $5t + 2$ vertices constructed above contains at least four pairwise vertex-disjoint faces. Let F_1, \dots, F_i be any i pairwise vertex-disjoint faces of L_t , and let L_t^i be the plane triangulation obtained from L_t by adding one vertex, say x_j , of degree 3 to each F_j for all $j \in [i]$. Clearly, L_t^i is a plane triangulation on $n = 5t + 2 + i$ vertices. By the choice of F_1, \dots, F_i , we see

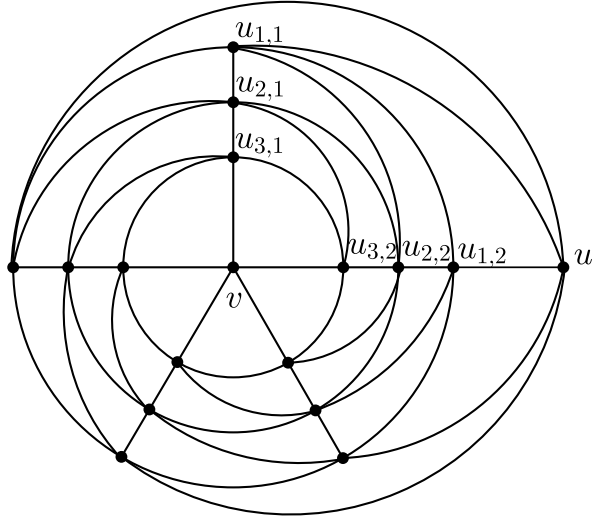


Figure 3: Plane triangulation L_t when $t = 3$.

that x_1, \dots, x_i are pairwise non-adjacent in L_t^i , and no two of x_1, \dots, x_i have common neighbors in L_t^i . We next show that L_t^i is W_4 -free for all $i \in [4]$. Suppose that L_t^i contains a copy of W_4 for some $i \in [4]$. Let H be a W_4 in L_t^i . Then H must contain exactly one, say x_1 , of x_1, \dots, x_i , because L_t is W_4 -free, and no two of x_1, \dots, x_i are adjacent or have common neighbors in L_t^i . Let $y, z \in V(H)$ be the two neighbors of x_1 such that $yz \notin E(H)$. By the choice of x_1 , we see that $yz \in E(L_t)$. But then $L_t[V(H \setminus x_1)] = K_4$ and so L_t contains K_4 as a subgraph, a contradiction. Therefore, $ex_p(n, W_4) = 3n - 6$ for all $n \geq 12$.

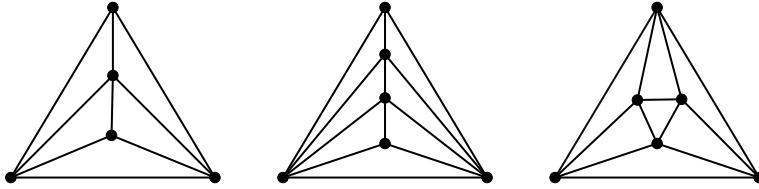


Figure 4: All plane triangulations on 5 and 6 vertices.

We next show that $ex_p(n, W_4) = 3n - 7$ when $n \in \{5, 6\}$. Note that all plane triangulations on $n \in \{5, 6\}$ vertices are depicted in Figure 4, each containing a copy of W_4 . Thus, $ex_p(n, W_4) \leq 3n - 7$. On the other hand, for all $n \in \{5, 6\}$, the planar graph $K_2 + (K_2 \cup K_{n-4})$ has $3n - 7$ edges and is W_4 -free. Hence, $ex_p(n, W_4) = 3n - 7$ when $n \in \{5, 6\}$.

Finally, we show that $ex_p(n, W_4) = 3n - 8$ for all $n \in \{7, 8, 9, 10, 11\}$. The plane graph J , given in Figure 5, is W_4 -free with $n = 11$ vertices and $3n - 8$ edges. Let B be the set of all vertices of degree 3 in J . Then $|B| = 5$. For each $n \in \{7, 8, 9, 10\}$, let J_n be the plane graph obtained from J by deleting $11 - n$ vertices in B . Then J_n is an induced subgraph of J . Clearly, J_n is W_4 -free with n vertices and $3n - 8$ edges. Hence, $ex_p(n, W_4) \geq 3n - 8$ for all $n \in \{7, 8, 9, 10, 11\}$. We next

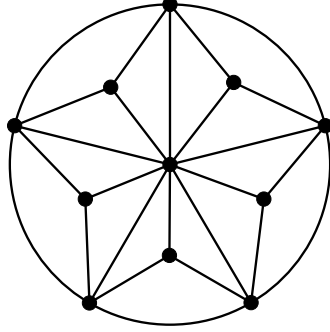


Figure 5: Graph J .

show that $ex_{\mathcal{P}}(n, W_4) \leq 3n - 8$ for all $n \in \{7, 8, 9, 10, 11\}$. Suppose this is not true. Let G be a W_4 -free planar graph on $n \in \{7, 8, 9, 10, 11\}$ vertices with $e(G) \geq 3n - 7$. We choose such a G with n minimum. Then $G = T_n$ or $G = T_n^-$. Since each T_7 , depicted in Figure 2, contains a copy of W_4 , and each T_7^- also contains a copy of W_4 , it follows that $n \in \{8, 9, 10, 11\}$. Let $u \in V(G)$ with $d_G(u) = \delta(G)$. Then $\delta(G) \leq 4$, else $e(G) \geq \frac{5n}{2} > 3n - 6$ because $n \leq 11$, a contradiction. Next, if $\delta(G) \leq 3$, then $e(G \setminus u) \leq 3(n - 1) - 8$ by minimality of n and the fact that $ex_{\mathcal{P}}(n, W_4) \leq 3n - 8$ when $n = 7$. Thus, $e(G) = e(G \setminus u) + d_G(u) \leq 3(n - 1) - 8 + 3 = 3n - 8$, a contradiction. This proves that $\delta(G) = 4$. Since $N_G[u]$ does not contain a copy of W_4 in G , we see that $G \neq T_n$. Thus $G = T_n^-$. We may assume that G is a plane drawing of T_n^- such that the outer face is a 3-face. Let $x_1, y_1 \in V(G)$ be such that $G + x_1y_1 = T_n$. Then x_1 and y_1 must lie on the boundary of the unique 4-face, say F , in G . Let x_1, x_2, y_1, y_2 be the vertices on the boundary of F in order. Then $d_G(v) \geq 5$ for all $v \in V(G) \setminus \{x_1, x_2, y_1, y_2\}$, because $G = T_n^-$ and $N_G[u]$ does not contain a copy of W_4 in G for any $u \in V(G)$ with $d_G(u) = 4$. Thus $2(3n - 7) = 2e(G) \geq 4 \cdot 4 + 5 \cdot (n - 4)$, which implies that $n \in \{10, 11\}$. Suppose each vertex in $\{x_1, x_2, y_1, y_2\}$ has degree 4 in G . Since $G = T_n^-$, there must exist four distinct vertices $z_1, z_2, z_3, z_4 \in V(G) \setminus \{x_1, x_2, y_1, y_2\}$ such that $G[A]$ is isomorphic to the graph given in Figure 6(a), where $A = \{x_1, x_2, y_1, y_2, z_1, z_2, z_3, z_4\}$. But then

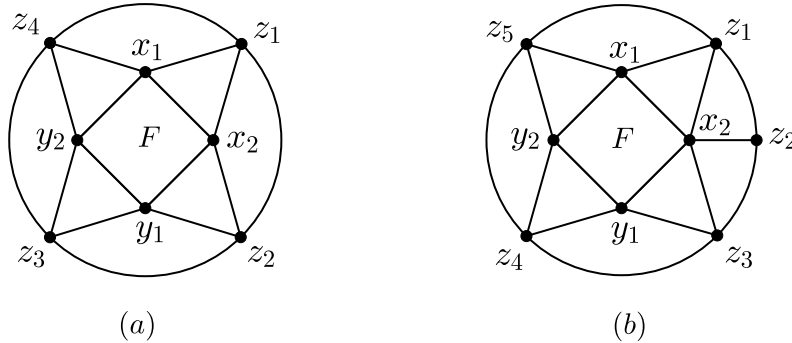


Figure 6: The graph $G[A]$.

G contains $K_{3,3}$ as a minor, because $n \in \{10, 11\}$ and $d_G(v) \geq 5$ for any $v \in V(G) \setminus A$. Thus, we may assume that $d_G(x_2) \geq 5$. Then $2(3n - 7) = 2e(G) \geq 4 \cdot 3 + 5 \cdot (n - 3)$, which implies that $n = 11$, $d_G(v) = 4$ for all $v \in \{x_1, y_1, y_2\}$ and $\Delta(G) = 5$. Thus there exist five distinct vertices $z_1, z_2, z_3, z_4, z_5 \in V(G) \setminus \{x_1, x_2, y_1, y_2\}$ such that $G[A]$ is isomorphic to the graph given in Figure 6(b), where $A = \{x_1, x_2, y_1, y_2, z_1, z_2, z_3, z_4, z_5\}$. But then $e_G(A, V(G) \setminus A) = 6$, contrary to $e_G(V(G) \setminus A, A) \geq 8$ because $n = 11$ and $d_G(v) = 5$ for any $v \in V(G) \setminus A$.

This completes the proof of Theorem 1.4. ■

4 Proof of Theorem 1.5

To establish the desired lower bound, note that the planar graph $K_2 + (n - 2)K_1$ is $(K_1 + 2K_2)$ -free for all $n \geq 5$. Hence, $ex_p(n, K_1 + 2K_2) \geq 2n - 3$ for all $n \geq 5$. In particular, $ex_p(5, K_1 + 2K_2) \geq 7$. We next show that every $(K_1 + 2K_2)$ -free planar graph on $n \geq 5$ vertices has at most $19n/8 - 4$ edges. We proceed the proof by induction on n . Assume first $n = 5$. Then $ex_p(5, K_1 + 2K_2) = 7$, because the only plane triangulation on five vertices, given in Figure 4(a), is not $(K_1 + 2K_2)$ -free, and any T_5^- is not $(K_1 + 2K_2)$ -free. Hence, $ex_p(n, K_1 + 2K_2) = 7 < 19n/8 - 4$ when $n = 5$. So we may assume that $n \geq 6$. Let G be a $(K_1 + 2K_2)$ -free plane graph on $n \geq 6$ vertices. Assume there exists a vertex $u \in V(G)$ with $d_G(u) \leq 2$. By the induction hypothesis, $e(G \setminus u) \leq 19(n - 1)/8 - 4$ and so $e(G) = e(G \setminus u) + d_G(u) \leq 19(n - 1)/8 - 4 + 2 < 19n/8 - 4$, as desired. So we may assume that $\delta(G) \geq 3$. Next, assume G is disconnected. Then each component of G either is isomorphic to K_4 or has at least six vertices because $\delta(G) \geq 3$. Let $G_1, \dots, G_p, G_{p+1}, \dots, G_{p+q}$ be all components of G such that $|G_1| = \dots = |G_p| = 4$ and $6 \leq |G_{p+1}| \leq \dots \leq |G_{p+q}|$, where $p \geq 0$ and $q \geq 0$ are integers with $p + q \geq 2$ and $|G_{p+1}| + \dots + |G_{p+q}| = n - 4p$. Then $e(G_i) = 6$ for all $i \in [p]$, and $e(G_j) \leq \frac{19|G_j|}{8} - 4$ for all $j \in \{p + 1, \dots, p + q\}$ by the induction hypothesis. Therefore,

$$\begin{aligned} e(G) &\leq 6p + \frac{19(|G_{p+1}| + \dots + |G_{p+q}|)}{8} - 4q \\ &= \frac{19n}{8} - \frac{7p}{2} - 4q \\ &\leq \frac{19n}{8} - \frac{7(p+q)}{2} < \frac{19n}{8} - 4, \end{aligned}$$

as desired. So we may further assume that G is connected. Then G has no faces of size at most two. Hence,

$$2e(G) = 3f_3 + \sum_{i \geq 4} i f_i \geq 3f_3 + 4(f - f_3) = 4f - f_3,$$

which implies that

$$f \leq e(G)/2 + f_3/4. \tag{1}$$

Note that each 3-vertex is incident with at most three distinct 3-faces in G . Furthermore, since G is $(K_1 + 2K_2)$ -free, we see that for all $j \geq 4$, each j -vertex is incident with at most two distinct 3-faces in G . Let $U \subseteq V(G)$ denote the set of 3-vertices each incident with exactly three distinct

3-faces in G . Then U must be an independent set in G because G is connected. Furthermore, no two vertices in U have a common neighbor in G , because G is $(K_1 + 2K_2)$ -free. Thus, $4|U| \leq n$ and so $|U| \leq n/4$. It follows that

$$3f_3 \leq 3|U| + 2(n - |U|) = 2n + |U| \leq 9n/4, \tag{2}$$

which implies that $f_3 \leq 3n/4$. This, together with (1), further implies that $f \leq e(G)/2 + 3n/16$. By Euler's formula, $n - 2 = e(G) - f \geq e(G)/2 - 3n/16$. Hence, $e(G) \leq 19n/8 - 4$, as desired.

From the proof above, we see that equality in $e(G) \leq 19n/8 - 4$ is achieved for n if and only if equalities hold in both (1) and (2), and in $4|U| \leq n$. This implies that $e(G) = 19n/8 - 4$ for n if and only if G is a connected, $(K_1 + 2K_2)$ -free plane graph on n vertices satisfying: $\delta(G) \geq 3$; each 3-vertex in G is incident with exactly three distinct 3-faces; each vertex of degree at least 4 in G is incident with exactly two distinct 3-faces; each face is either a 3-face or a 4-face. We next construct such an extremal plane graph for n and $K_1 + 2K_2$. Let $n = 8(k + 1)$ for some integer $k \geq 0$. Let F_0 be the graph depicted in Figure 7(a), we then construct F_k of order n recursively for all $k \geq 1$ via the illustration given in Figure 7(b): the entire graph F_{k-1} is placed into the center quadrangle of Figure 7(b) (in such a way that the center bold quadrangle of Figure 7(b) is identified with the outer quadrangle of F_{k-1}). One can check that F_k is $(K_1 + 2K_2)$ -free with $n = 8(k + 1)$ vertices and $19n/8 - 4$ edges for all $k \geq 0$. ■

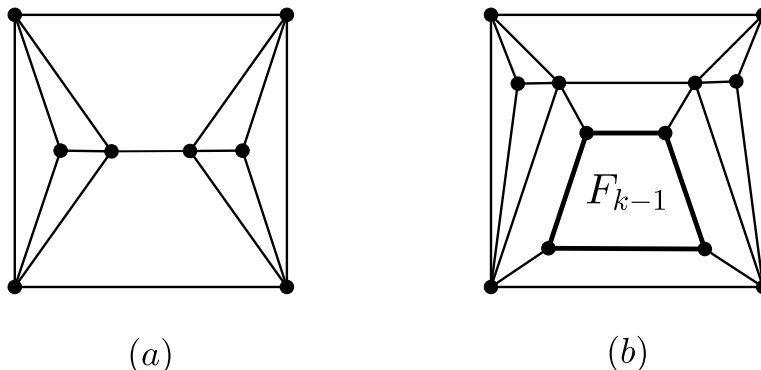


Figure 7: The construction of F_k .

5 Proof of Theorem 1.6

By Proposition 1.3(a), $ex_p(n, K_{1,t}) = 3n - 6$ for all $n \geq t + 1 \geq 8$. So we may assume that $t \leq 6$. We next show that $ex_p(n, K_{1,6}) = 3n - 6$ for all $n \in \{7, 8, 9, 10, 12\}$. Let J_a, J_b, J_c be the plane graphs given in Figure 8. Let J'_a be the plane triangulation obtained from J_a by adding a new vertex adjacent to x_1, x_2, x_3 , J'_b be the plane triangulation obtained from J_b by first deleting the edge x_1x_3 and then adding a new vertex adjacent to x_1, x_2, x_3, x_4 , and J'_c be the plane triangulation

obtained from J_c by first deleting the edge x_1x_3 and then adding one new vertex adjacent to x_1, x_2, x_3, x_4, x_5 . Then the plane triangulations J_a, J'_a, J_b, J'_b and J'_c are $K_{1,6}$ -free because each of them has maximum degree 5. Hence, $ex_{\mathcal{P}}(n, K_{1,6}) = 3n - 6$ for all $n \in \{7, 8, 9, 10, 12\}$. By

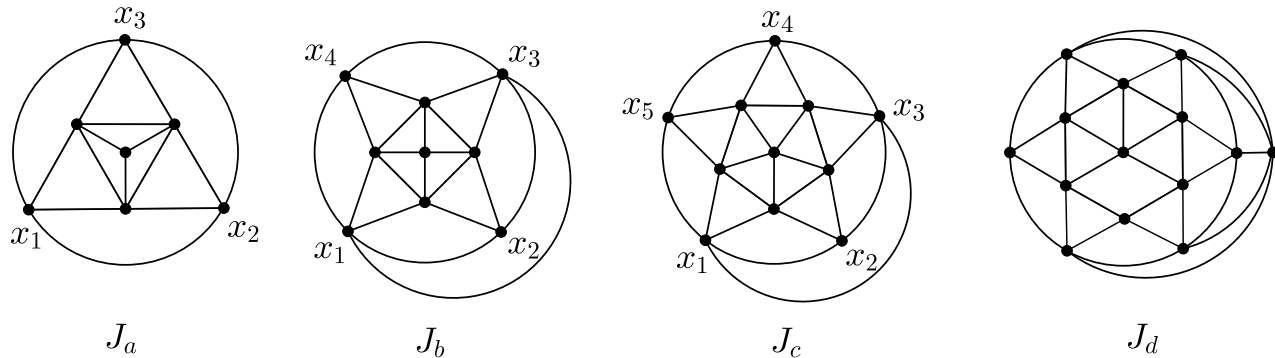


Figure 8: The graphs J_a, J_b, J_c and J_d .

Lemma 1.8, no plane triangulation on 11 vertices has maximum degree at most 5. Hence, every plane triangulation on $n \in \{11, 13, 14\}$ vertices has maximum degree at least 6. This implies that $ex_{\mathcal{P}}(n, K_{1,6}) \leq 3n - 7$ for all $n \in \{11, 13, 14\}$. Since J_c given in Figure 8 is a $K_{1,6}$ -free plane graph with $n = 11$ vertices and $3n - 7$ edges, we have $ex_{\mathcal{P}}(n, K_{1,6}) = 3n - 7$ when $n = 11$. By Lemma 1.8, there does not exist any planar graphs on $n \in \{13, 14\}$ vertices with $3n - 7$ edges and maximum degree at most 5. It follows that $ex_{\mathcal{P}}(n, K_{1,6}) \leq 3n - 8$ when $n \in \{13, 14\}$. Let J'_c be the plane graph obtained from J_c by first deleting the edge x_1x_3 and then adding two new adjacent vertices y_1, y_2 such that y_1 is adjacent to x_1, x_2, x_3 and y_2 is adjacent to x_4, x_5 . Then J'_c and the graph J_d given in Figure 8 are $K_{1,6}$ -free plane graph with $n \in \{13, 14\}$ vertices and $3n - 8$ edges. Hence, $ex_{\mathcal{P}}(n, K_{1,6}) = 3n - 8$ when $n \in \{13, 14\}$.

It is easy to see that $ex_{\mathcal{P}}(n, K_{1,3}) = n$ for all $n \geq 4$, because every $K_{1,3}$ -free planar graph has maximum degree at most 2 and the planar graph C_n is $K_{1,3}$ -free with n edges. We next show that $ex_{\mathcal{P}}(n, K_{1,4}) = \lfloor 3n/2 \rfloor$ for all $n \geq 5$. Clearly, $ex_{\mathcal{P}}(n, K_{1,4}) \leq \lfloor 3n/2 \rfloor$ for all $n \geq 5$, because every $K_{1,4}$ -free planar graph has maximum degree at most 3. Next, for all $n \geq 5$, the planar graph obtained from C_n by adding a matching of size $\lfloor n/2 \rfloor$ is $K_{1,4}$ -free with $\lfloor 3n/2 \rfloor$ edges. Hence, $ex_{\mathcal{P}}(n, K_{1,4}) = \lfloor 3n/2 \rfloor$ for all $n \geq 5$. To determine $ex_{\mathcal{P}}(n, K_{1,5})$ for all $n \geq 6$, since every $K_{1,5}$ -free planar graph on $n \geq 6$ vertices has maximum degree at most 4, we have $ex_{\mathcal{P}}(n, K_{1,5}) \leq 2n$ for all $n \geq 6$. Let J''_a be the plane triangulation obtained from J_a by deleting the unique 3-vertex. Since J''_a is $K_{1,5}$ -free plane graph on $n = 6$ vertices with $2n$ edges, we have $ex_{\mathcal{P}}(n, K_{1,5}) = 2n$ when $n = 6$. By Lemma 1.8, no planar graph with $n = 7$ vertices and $2n$ edges has maximum degree at most 4. Hence, $ex_{\mathcal{P}}(n, K_{1,5}) \leq 2n - 1$ when $n = 7$. Let J'''_a be the plane graph obtained from J''_a by first deleting the edge x_1x_2 and then adding a new vertex adjacent to x_1, x_2 only. Note that J'''_a is a $K_{1,5}$ -free plane graph on $n = 7$ vertices with $2n - 1$ edges, we see that $ex_{\mathcal{P}}(n, K_{1,5}) = 2n - 1$ when $n = 7$. Next, for all $n \geq 8$, let C be a cycle on $2\lfloor n/2 \rfloor$ vertices with vertices

$u_1, \dots, u_{\lfloor \frac{n}{2} \rfloor}, w_{\lfloor \frac{n}{2} \rfloor}, \dots, w_1$ in order. Let H be the plane graph obtained from C by adding the path with vertices $w_1, u_2, w_2, u_3, \dots, w_{\lfloor \frac{n}{2} \rfloor - 1}, u_{\lfloor \frac{n}{2} \rfloor}$ in order. When n is even, the planar graph $H + u_1 u_{\lfloor \frac{n}{2} \rfloor} + u_1 w_{\lfloor \frac{n}{2} \rfloor} + w_1 w_{\lfloor \frac{n}{2} \rfloor}$ is $K_{1,5}$ -free with $2n$ edges. When n is odd, let H' be obtained from H by first deleting the edge $u_2 u_3$ and then adding a new vertex u adjacent to u_2 and u_3 . Then the planar graph $H' + uu_1 + uu_{\lfloor \frac{n}{2} \rfloor} + w_1 w_{\lfloor \frac{n}{2} \rfloor} + u_1 w_{\lfloor \frac{n}{2} \rfloor}$ is $K_{1,5}$ -free with $2n$ edges. Hence, $ex_p(n, K_{1,5}) = 2n$ for all $n \geq 8$.

It remains to show that $ex_p(n, K_{1,6}) = \lfloor 5n/2 \rfloor$ for all $n \geq 15$. Clearly, $ex_p(n, K_{1,6}) \leq \lfloor 5n/2 \rfloor$ for all $n \geq 15$, because every $K_{1,6}$ -free planar graph on $n \geq 15$ vertices has maximum degree at most 5. We next show that $ex_p(n, K_{1,6}) \geq \lfloor 5n/2 \rfloor$ for all $n \geq 15$. Let $n := 4q + r \geq 15$, where $q \geq 3$ and $r \in \{0, 1, 2, 3\}$. Let $p \in \{q, q + 1\}$. Let C^1 and C^2 be two vertex-disjoint cycles with vertices x_1, x_2, \dots, x_q in order and y_1, y_2, \dots, y_p in order, respectively. Let C^3 be a cycle of length $q + p$ with vertices $b_1, a_1, b_2, a_2, \dots, b_q, a_q$ in order when $p = q$, and $b_1, a_1, b_2, a_2, \dots, b_q, a_q, b_{q+1}$ in order when $p = q + 1$. Let R_p be the plane graph on $2q + 2p$ vertices obtained from disjoint copies of C^1 , C^2 and C^3 by making x_i adjacent to $\{a_i, b_i, b_{i+1}\}$, and y_j adjacent to $\{b_j, a_{j-1}, a_j\}$ for all $1 \leq i \leq q$ and $1 \leq j \leq p$, where all arithmetic on the indices $i + 1$ and $j - 1$ here are

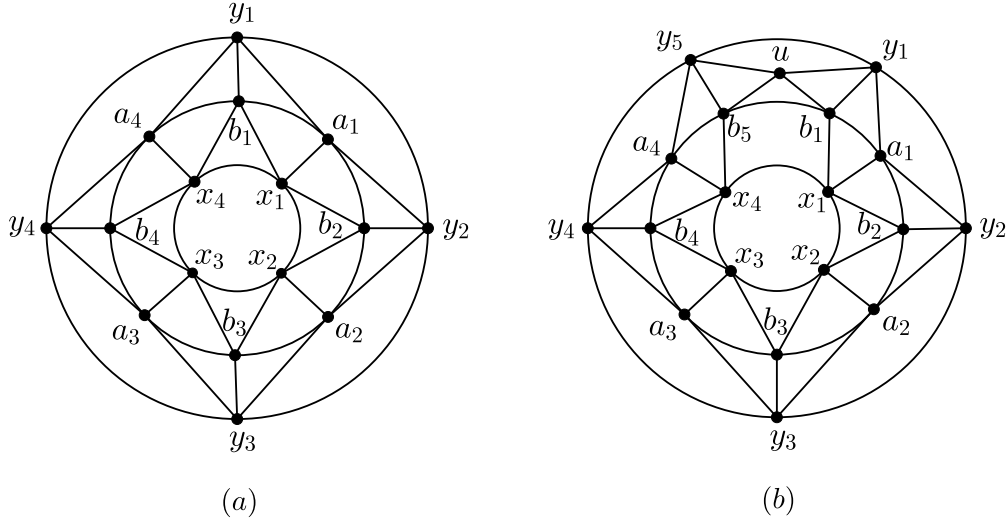


Figure 9: Almost 5-regular plane graphs on $4q + r$ vertices when $q = 4$ and $r \in \{0, 3\}$.

done modulo p . Then R_p is $K_{1,6}$ -free planar graph with $10q$ edges when $p = q$ and $10q + 3$ edges when $p = q + 1$. The construction of R_p on $4q$ vertices when $q = 4$ is depicted in Figure 9(a). When $n = 4q$ for $q \geq 4$, the planar graph R_p with $p = q$ is $K_{1,6}$ -free with $10q$ edges and so $ex_p(n, K_{1,6}) = 10q = 5n/2$. When $n = 4q + 1$ for $q \geq 4$, let R^1 be obtained from $R_p - y_2 y_3 - y_1 y_p$ with $p = q$ by adding a new vertex u adjacent to y_2 and y_3 . Then the planar graph $R^1 + uy_1 + uy_p$ is $K_{1,6}$ -free with $10q + 2$ edges. Hence, $ex_p(n, K_{1,6}) = 10q + 2 = \lfloor 5n/2 \rfloor$ when $n = 4q + 1$ for $q \geq 4$. When $n = 4q + 2$ for $q \geq 4$, let R^2 be obtained from $R_p - y_2 y_3 - y_1 y_p - x_2 x_3 - x_1 x_p - b_1 a_p$ with $p = q$ by adding two new vertices u adjacent to y_2 and y_3 and v adjacent to x_2 and x_3 . Then

the planar graph $R^2 + uy_1 + uy_p + ua_q + vx_1 + vx_q + vb_1$ is $K_{1,6}$ -free with $10q + 5$ edges. Hence, $ex_p(n, K_{1,6}) = 10q + 5 = 5n/2$ when $n = 4q + 2$ for $q \geq 4$. When $n = 4q + 3$ for $n \geq 3$, the planar graph obtained from R_p with $p = q + 1$ by adding a new vertex u adjacent to y_1, b_1, y_p, b_p , given in Figure 9(b) when $q = 4$, is $K_{1,6}$ -free with $10q + 7$ edges. Hence, $ex_p(n, K_{1,6}) = 10q + 7 = \lfloor 5n/2 \rfloor$ when $n = 4q + 3$ for $q \geq 3$.

6 Proof of Theorem 1.7

Since the plane triangulations J_a, J'_a, J_b and J'_b constructed in the proof of Theorem 1.6 is $(K_1 + 3K_2)$ -free, we see that $ex_p(n, K_1 + 3K_2) = 3n - 6$ for all $n \in \{7, 8, 9, 10\}$. To determine $ex_p(11, K_1 + 3K_2)$, note that the plane graph J_c given in Figure 8 with $n = 11$ vertices and $3n - 7$ edges is $(K_1 + 3K_2)$ -free. Thus $ex_p(n, K_1 + 3K_2) \geq 3n - 7$ when $n = 11$. By Lemma 1.8, no plane triangulation on 11 vertices has maximum degree at most 5. Hence, every plane triangulation on 11 vertices must contain a vertex of degree at least 6 (and so contains a copy of $K_1 + 3K_2$), which implies that $ex_p(n, K_1 + 3K_2) = 3n - 7$ when $n = 11$. Since every $K_{1,6}$ -free graph is certainly $(K_1 + 3K_2)$ -free, by Theorem 1.6, $ex_p(n, K_1 + 3K_2) = ex_p(n, K_{1,6}) = 3n - 6$ when $n = 12$, $ex_p(n, K_1 + 3K_2) \geq ex_p(n, K_{1,6}) = 3n - 8$ when $n \in \{13, 14\}$, and $ex_p(n, K_1 + 3K_2) \geq ex_p(n, K_{1,6}) = \lfloor 5n/2 \rfloor$ when $n \geq 15$. Since every plane triangulation on $n \in \{13, 14\}$ vertices has maximum degree at least 6, we see that $ex_p(n, K_1 + 3K_2) \leq 3n - 7$ when $n \in \{13, 14\}$. By Lemma 1.8, every T_n^- with $n \in \{13, 14\}$ has maximum degree at least 6 and so contains a copy of $K_1 + 3K_2$. It follows that $ex_p(n, K_1 + 3K_2) = 3n - 8 < 17n/6 - 4$ when $n \in \{13, 14\}$.

We next show that every $(K_1 + 3K_2)$ -free planar graph G on $n \geq 13$ vertices has at most $17n/6 - 4$ edges. We proceed the proof by induction on n . This is trivially true when $n \in \{13, 14\}$. So we may assume that $n \geq 15$. Assume there exists a vertex $u \in V(G)$ with $d_G(u) \leq 2$. By the induction hypothesis, $e(G \setminus u) \leq 17(n-1)/6 - 4$ and so $e(G) = e(G \setminus u) + d_G(u) \leq 17(n-1)/6 - 4 + 2 < 17n/6 - 4$, as desired. So we may assume that $\delta(G) \geq 3$. Assume next that G is disconnected. Let $G_1, \dots, G_p, G_{p+1}, \dots, G_{p+q}$ be all components of G such that $|G_1| \leq \dots \leq |G_p| \leq 12$ and $13 \leq |G_{p+1}| \leq \dots \leq |G_{p+q}|$, where $p \geq 0$ and $q \geq 0$ are integers with $p+q \geq 2$ and $|G_1| + \dots + |G_{p+q}| = n$. Then $e(G_i) \leq 3|G_i| - 6$ for all $i \in [p]$, and $e(G_j) \leq 17|G_j|/6 - 4$ for all $j \in \{p+1, \dots, p+q\}$ by the induction hypothesis. Therefore,

$$\begin{aligned} e(G) &\leq 3(|G_1| + \dots + |G_p|) - 6p + \frac{17(|G_{p+1}| + \dots + |G_{p+q}|)}{6} - 4q \\ &= \frac{17n}{6} - (6p + 4q) + \frac{|G_1| + \dots + |G_p|}{6} \\ &\leq \frac{17n}{6} - (6p + 4q) + 2p = \frac{17n}{6} - 4(p + q) < \frac{17n}{6} - 4, \end{aligned}$$

as desired. So we may further assume that G is connected. Then G has no faces of size at most two. Hence,

$$2e(G) = 3f_3 + \sum_{i \geq 4} if_i \geq 3f_3 + 4(f - f_3) = 4f - f_3,$$

which implies that $f \leq e(G)/2 + f_3/4$. Note that $n_3(G) \geq 0$ and $n_5(G) < n$; and for all $i \in \{3, 4, 5\}$, each i -vertex is incident with at most i 3-faces. Furthermore, for all $j \geq 6$, each j -vertex is incident with at most four 3-faces because G is $(K_1 + 3K_2)$ -free and $n \geq 15$. It follows that

$$3f_3 \leq 3n_3(G) + 4n_4(G) + 5n_5(G) + 4(n - n_3(G) - n_4(G) - n_5(G)) = 4n - n_3(G) + n_5(G) < 5n,$$

which implies that $f_3 < 5n/3$. This, together with the fact that $f \leq e(G)/2 + f_3/4$, further implies that $f < e(G)/2 + 5n/12$. By Euler's formula, $n - 2 = e(G) - f > e(G)/2 - 5n/12$. Hence, $e(G) < 17n/6 - 4$. ■

7 Concluding remarks

The lower bound in Theorem 1.7 can be further improved when n is divisible by 24. To see this, let $n = 24(k + 1)$ for some integer $k \geq 0$. Let R_5 be the 5-regular plane graph on twelve vertices given in Figure 10(a), and let G_0 be the plane graph obtained from two disjoint copies of R_5 by adding three independent edges between their outer faces, as depicted in Figure 10(b). We construct G_k of order n recursively for all $k \geq 1$ via the illustration given in Figure 10(c): the entire graph G_{k-1} is placed into the center quadrangle of Figure 10(c) (in such a way that the center bold quadrangle of Figure 10(c) is identified with the outer quadrangle of G_{k-1}). One can check that G_k is $(K_1 + 3K_2)$ -free with $n = 24(k + 1)$ vertices and $67n/24 - 4$ edges for all $k \geq 0$.

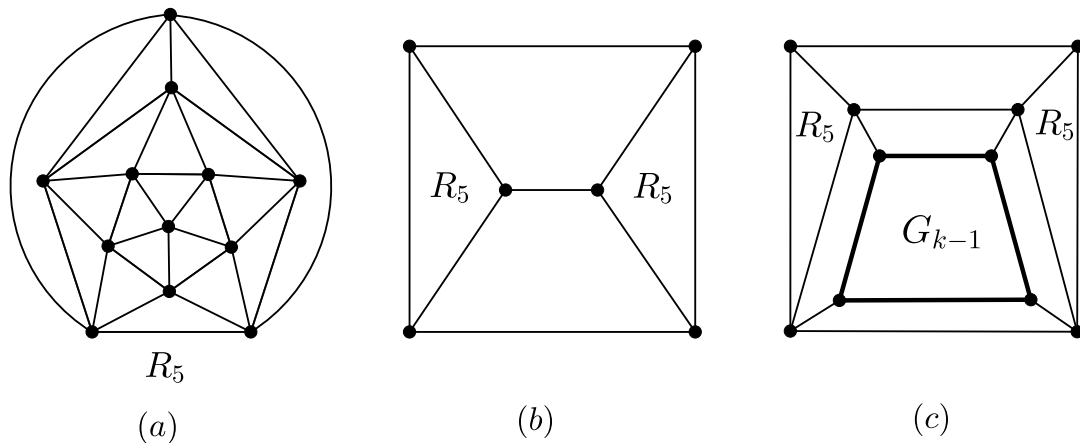


Figure 10: The construction of G_k .

As mentioned earlier, it seems non-trivial to determine $ex_{\mathcal{P}}(n, H)$ for all K_4 -free planar graphs H with exactly one vertex, say u , satisfying $d_H(u) = \Delta(H) \leq 6$ and $\Delta(H[N(u)]) \leq 2$. We conclude this section by giving an upper bound (but not tight) for $ex_{\mathcal{P}}(n, K_1 + H)$, where H is a disjoint union of paths.

Theorem 7.1 *Let $4 \leq t \leq 6$ be an integer and let H be a graph on t vertices such that H is a disjoint union of paths. Then $ex_{\mathcal{P}}(n, K_1 + H) \leq \frac{13(t-1)n}{4t-2} - \frac{12(t-1)}{2t-1}$ for all $n \geq t + 1$.*

Proof. Let t and H be given as in the statement. Since H is a subgraph of $K_1 + P_t$, it suffices to show that $ex_{\mathcal{P}}(n, K_1 + P_t) \leq \frac{13(t-1)n}{4t-2} - \frac{12(t-1)}{2t-1}$ for all $n \geq t+1$. Let G be a $(K_1 + P_t)$ -free planar graph on $n \geq t+1$ vertices. We next show that $e(G) \leq \frac{13(t-1)n}{4t-2} - \frac{12(t-1)}{2t-1}$ by induction on n . This is trivially true when $n = t+1$ because $e(G) \leq 3(t+1) - 6 \leq \frac{13(t-1)(t+1)}{4t-2} - \frac{12(t-1)}{2t-1}$ for $5 \leq t \leq 6$ and $e(G) \leq 3(t+1) - 7 \leq \frac{13(t-1)(t+1)}{4t-2} - \frac{12(t-1)}{2t-1}$ for $t = 4$. So we may assume that $n \geq t+2$. We may further assume that $\delta(G) \geq 3$ and G is connected. Hence,

$$2e(G) = 3f_3 + \sum_{i \geq 4} i f_i \geq 3f_3 + 4(f - f_3) = 4f - f_3,$$

which implies that $f \leq e(G)/2 + f_3/4$. Note that for all $3 \leq i \leq t-1$, each i -vertex is incident with at most i many 3-faces, and for all $j \geq t$, each j -vertex is incident with at most $(t-2) \lfloor \frac{j}{t-1} \rfloor$ many 3-faces, because G is $(K_1 + P_t)$ -free. It follows that

$$\begin{aligned} 3f_3 &\leq \sum_{i=3}^{t-1} i \cdot n_i(G) + \sum_{j \geq t} (t-2) \left\lfloor \frac{j}{t-1} \right\rfloor \cdot n_j(G) \\ &\leq \sum_{i=3}^{t-1} \left(\frac{i \cdot n_i(G)}{t-1} + \frac{(t-2)i \cdot n_i(G)}{t-1} \right) + \frac{t-2}{t-1} \sum_{j \geq t} j \cdot n_j(G) \\ &= \sum_{i=3}^{t-1} \frac{i \cdot n_i(G)}{t-1} + \frac{t-2}{t-1} \sum_{\ell \geq 3} \ell \cdot n_\ell(G) \\ &= \sum_{i=3}^{t-1} \frac{i \cdot n_i(G)}{t-1} + \left(\frac{t-2}{t-1} \cdot 2e(G) \right) \\ &= \sum_{i=3}^{t-1} n_i(G) - \sum_{i=3}^{t-1} \frac{(t-1-i) \cdot n_i(G)}{t-1} + \left(\frac{t-2}{t-1} \cdot 2e(G) \right) \\ &< n + \frac{t-2}{t-1} \cdot 2e(G), \end{aligned}$$

which implies that $f_3 < \frac{n}{3} + \frac{2(t-2)}{3(t-1)} \cdot e(G)$. This, together with the fact that $f \leq e(G)/2 + f_3/4$, further implies that $f \leq \frac{e(G)}{2} + \frac{n}{12} + \frac{(t-2)}{6(t-1)} \cdot e(G) = \frac{(4t-5)}{6(t-1)} \cdot e(G) + \frac{n}{12}$. By Euler's formula, $n - 2 = e(G) - f \geq \frac{(2t-1)}{6(t-1)} \cdot e(G) - \frac{n}{12}$. Hence, $e(G) \leq \frac{13(t-1)n}{4t-2} - \frac{12(t-1)}{2t-1}$. \blacksquare

Acknowledgments. Zi-Xia Song would like to thank Yongtang Shi and the Chern Institute of Mathematics at Nankai University for hospitality and support during her visit in June 2018.

Yongxin Lan and Yongtang Shi are partially supported by the National Natural Science Foundation of China and the Natural Science Foundation of Tianjin (No.17JCQNJC00300).

References

- [1] B. Bollobás, *Modern Graph Theory*, Springer, 2013.

- [2] G. Chen, R. J. Gould, F. Pfender and B. Wei, Extremal graphs for intersecting cliques, *J. Combin. Theory Ser. B* 89 (2003), 159–171.
- [3] C. Dowden, Extremal C_4 -free/ C_5 -free planar graphs, *J. Graph Theory* 83 (2016), 213–230.
- [4] T. Dzido, A note on Turán numbers for even wheels, *Graphs Combin.* 29 (2013), 1305–1309.
- [5] T. Dzido and A. Jastrzębski, Turán numbers for odd wheels, *Discrete Math.* 341 (2018) 1150–1154.
- [6] P. Erdős, Z. Füredi, R. J. Gould and D. S. Gunderson, Extremal graphs for intersecting triangles, *J. Combin. Theory Ser. B* 64 (1995), 89–100.
- [7] P. Erdős and A. Stone, On the structure of linear graphs, *Bull. Amer. Math. Soc.* 52 (1946), 1087–1091.
- [8] Z. Füredi, Turán type problems, “Surveys in Combinatorics”, London Math. Soc. Lecture Note Ser. 166, Cambridge Univ. Press, Cambridge, 1991, pp. 253–300.
- [9] Z. Füredi and T. Jiang, Hypergraph Turán numbers of linear cycles, *J. Combin. Theory Ser. A* 123 (2014), 252–270.
- [10] Z. Füredi, T. Jiang and R. Seiver, Exact solution of the hypergraph Turán problem for k -uniform linear paths, *Combinatorica* 34 (2014), 299–322.
- [11] P. Keevash, Hypergraph Turán problems, “Surveys in Combinatorics”, London Math. Soc. Lecture Note Ser. 392, Cambridge Univ. Press, Cambridge, 2011, pp. 83–139.
- [12] A. Kostochka, D. Mubayi and J. Verstraëte, Turán problems and shadows I: Paths and cycles, *J. Combin. Theory Ser. A* 129 (2015), 57–79.
- [13] Y. Lan, Y. Shi and Z-X. Song, Planar Turán numbers for Theta graphs and paths of small order, arXiv:1711.01614, 2017.
- [14] E. F. Schmeichel and S. L. Hakimi, On planar graphical degree sequences, *SIAM J. Appl. Math.* 32 (1977), 598–609.
- [15] P. Turán, On an extremal problem in graph theory, *Mat. Fiz. Lapok.* 48 (1941), 436–452.